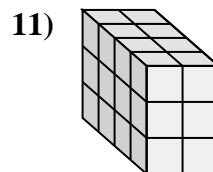
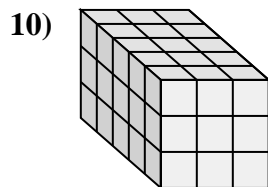
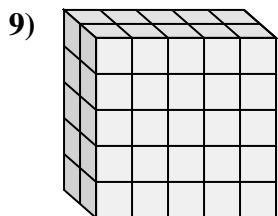
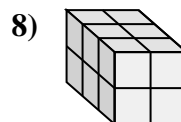
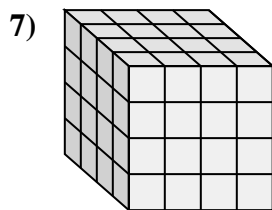
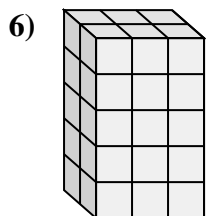
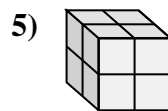
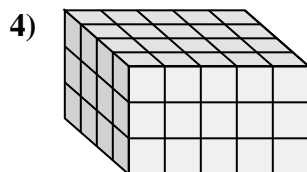
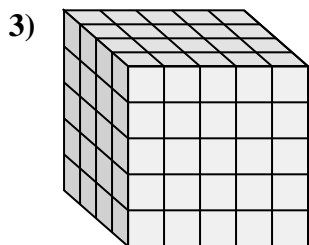
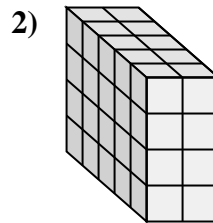
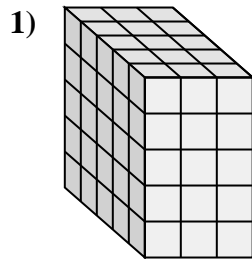
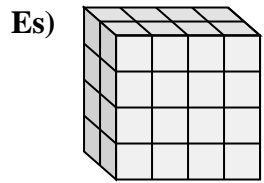




Collega ogni problema con l'equazione che potrebbe rappresentarlo. Rispondi con il termine e la lettera mancanti.



Risposte

Es. **J, 4**

1. _____

2. _____

3. _____

4. _____

5. _____

6. _____

7. _____

8. _____

9. _____

10. _____

11. _____

A. $4 \times 5 \times 3 = \underline{\quad}$

B. $4 \times \underline{\quad} \times 3 = 24$

C. $2 \times 3 \times 5 = \underline{\quad}$

D. $\underline{\quad} \times 2 \times 2 = 12$

E. $\underline{\quad} \times 5 \times 5 = 50$

F. $\underline{\quad} \times 3 \times 3 = 45$

G. $5 \times \underline{\quad} \times 4 = 40$

H. $5 \times 3 \times 5 = \underline{\quad}$

I. $4 \times \underline{\quad} \times 4 = 64$

J. $2 \times \underline{\quad} \times 4 = 32$

K. $4 \times \underline{\quad} \times 5 = 100$

L. $2 \times \underline{\quad} \times 2 = 8$

