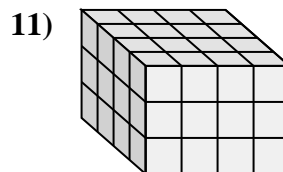
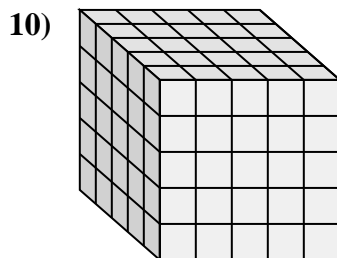
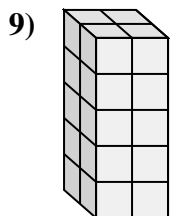
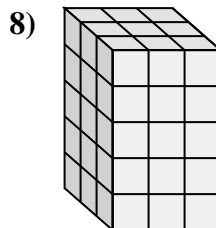
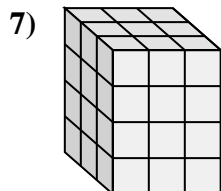
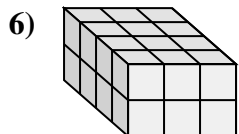
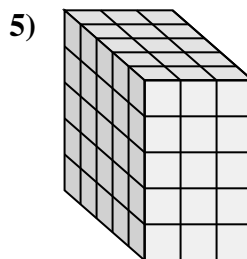
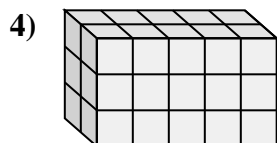
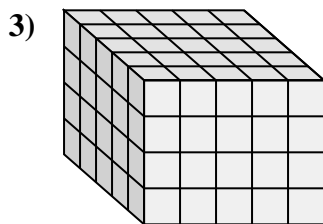
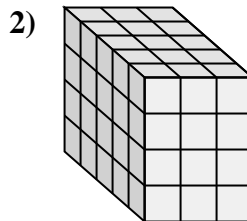
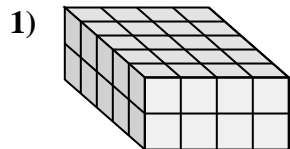
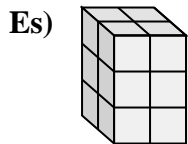




Collega ogni problema con l'equazione che potrebbe rappresentarlo. Rispondi con il termine e la lettera mancanti.



### Risposte

Es. **C, 3**

1. \_\_\_\_\_

2. \_\_\_\_\_

3. \_\_\_\_\_

4. \_\_\_\_\_

5. \_\_\_\_\_

6. \_\_\_\_\_

7. \_\_\_\_\_

8. \_\_\_\_\_

9. \_\_\_\_\_

10. \_\_\_\_\_

11. \_\_\_\_\_

A.  $\_\_\_ \times 2 \times 5 = 20$

B.  $5 \times \_\_\_ \times 5 = 125$

C.  $2 \times 2 \times \_\_\_ = 12$

D.  $3 \times 3 \times \_\_\_ = 45$

E.  $3 \times \_\_\_ \times 4 = 36$

F.  $5 \times 4 \times \_\_\_ = 40$

G.  $4 \times \_\_\_ \times 2 = 24$

H.  $\_\_\_ \times 5 \times 4 = 100$

I.  $2 \times \_\_\_ \times 3 = 30$

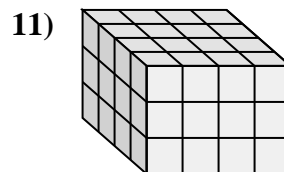
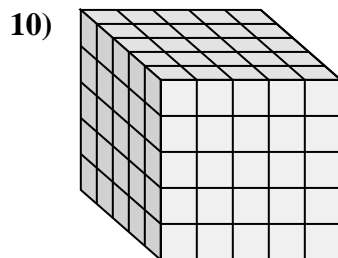
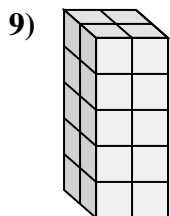
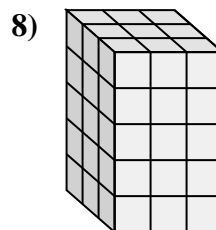
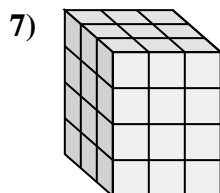
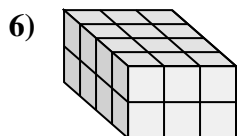
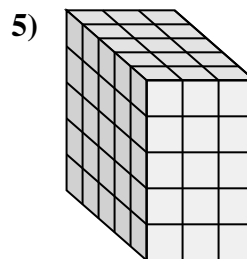
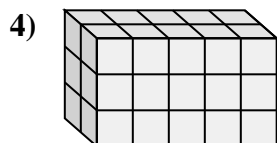
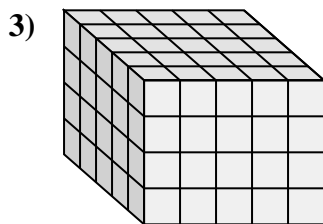
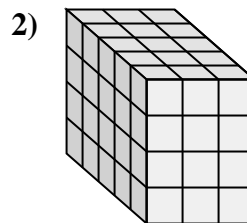
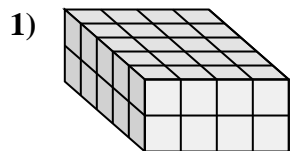
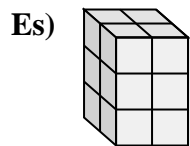
J.  $\_\_\_ \times 4 \times 3 = 48$

K.  $\_\_\_ \times 3 \times 4 = 60$

L.  $5 \times 3 \times 5 = \_\_\_$



Collega ogni problema con l'equazione che potrebbe rappresentarlo. Rispondi con il termine e la lettera mancanti.



**Risposte**

Es. C, 3

1. F, 2

2. K, 5

3. H, 5

4. I, 5

5. L, 75

6. G, 3

7. E, 3

8. D, 5

9. A, 2

10. B, 5

11. J, 4

A.  $\_\_ \times 2 \times 5 = 20$

B.  $5 \times \_\_ \times 5 = 125$

C.  $2 \times 2 \times \_\_ = 12$

D.  $3 \times 3 \times \_\_ = 45$

E.  $3 \times \_\_ \times 4 = 36$

F.  $5 \times 4 \times \_\_ = 40$

G.  $4 \times \_\_ \times 2 = 24$

H.  $\_\_ \times 5 \times 4 = 100$

I.  $2 \times \_\_ \times 3 = 30$

J.  $\_\_ \times 4 \times 3 = 48$

K.  $\_\_ \times 3 \times 4 = 60$

L.  $5 \times 3 \times 5 = \_\_$