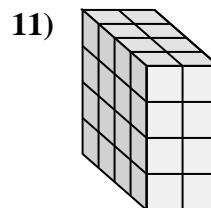
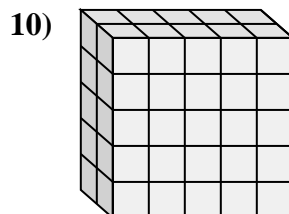
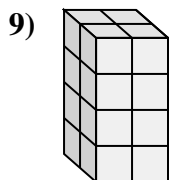
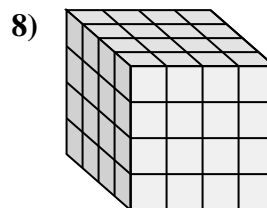
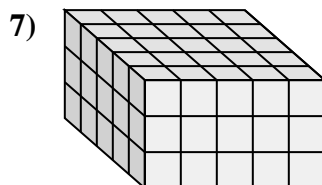
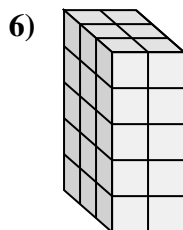
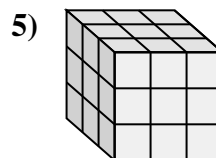
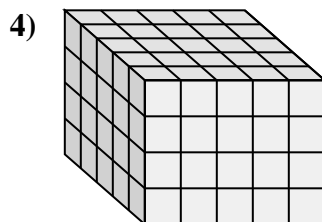
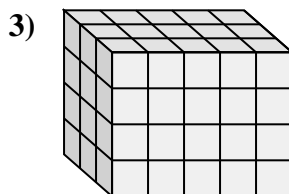
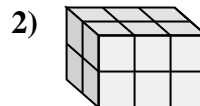
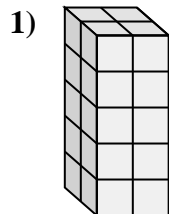
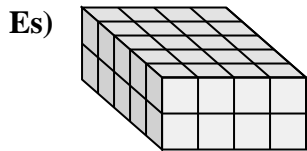




Collega ogni problema con l'equazione che potrebbe rappresentarlo. Rispondi con il termine e la lettera mancanti.



Risposte

Es. B, 2

1. J, 20

2. I, 2

3. E, 4

4. A, 5

5. K, 27

6. F, 30

7. C, 3

8. L, 4

9. H, 4

10. D, 2

11. G, 32

A. $5 \times \underline{\quad} \times 4 = 100$

B. $5 \times 4 \times \underline{\quad} = 40$

C. $5 \times 5 \times \underline{\quad} = 75$

D. $\underline{\quad} \times 5 \times 5 = 50$

E. $3 \times 5 \times \underline{\quad} = 60$

F. $3 \times 2 \times 5 = \underline{\quad}$

G. $4 \times 2 \times 4 = \underline{\quad}$

H. $2 \times 2 \times \underline{\quad} = 16$

I. $2 \times 3 \times \underline{\quad} = 12$

J. $2 \times 2 \times 5 = \underline{\quad}$

K. $3 \times 3 \times 3 = \underline{\quad}$

L. $4 \times \underline{\quad} \times 4 = 64$