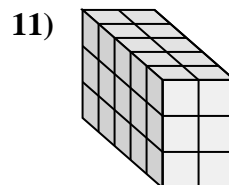
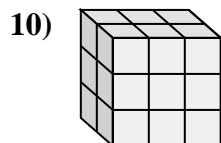
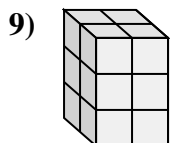
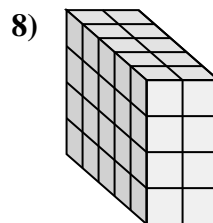
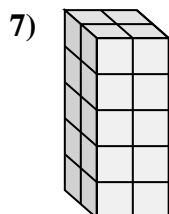
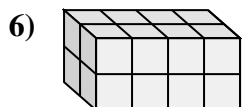
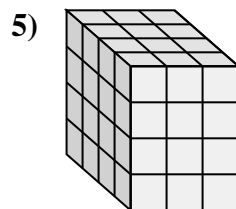
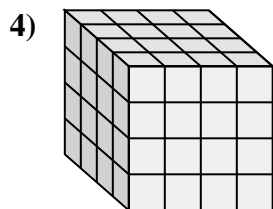
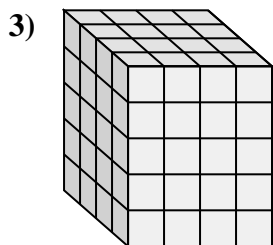
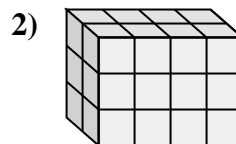
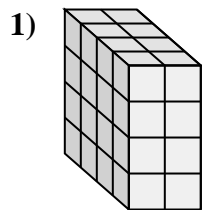
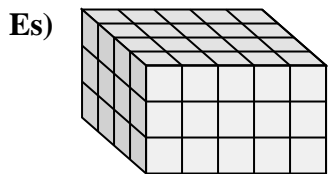




Collega ogni problema con l'equazione che potrebbe rappresentarlo. Rispondi con il termine e la lettera mancanti.



Risposte

Es. E, 60

1. K, 32

2. D, 3

3. I, 5

4. G, 4

5. J, 4

6. H, 2

7. F, 20

8. B, 5

9. A, 12

10. C, 3

11. L, 2

A. $2 \times 2 \times 3 = \underline{\quad}$

B. $\underline{\quad} \times 2 \times 4 = 40$

C. $2 \times 3 \times \underline{\quad} = 18$

D. $2 \times 4 \times \underline{\quad} = 24$

E. $4 \times 5 \times 3 = \underline{\quad}$

F. $2 \times 2 \times 5 = \underline{\quad}$

G. $4 \times \underline{\quad} \times 4 = 64$

H. $\underline{\quad} \times 4 \times 2 = 16$

I. $4 \times 4 \times \underline{\quad} = 80$

J. $\underline{\quad} \times 3 \times 4 = 48$

K. $4 \times 2 \times 4 = \underline{\quad}$

L. $5 \times \underline{\quad} \times 3 = 30$