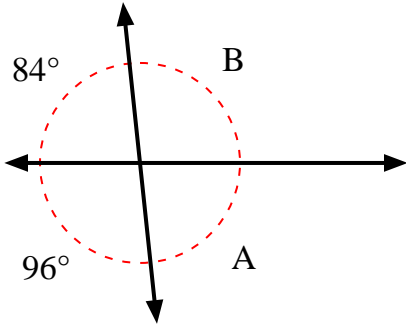


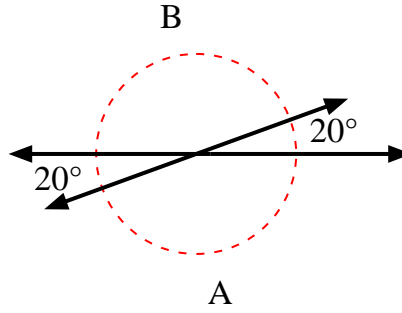


Trova il valore dell'angolo 'A' e dell'angolo 'B'.

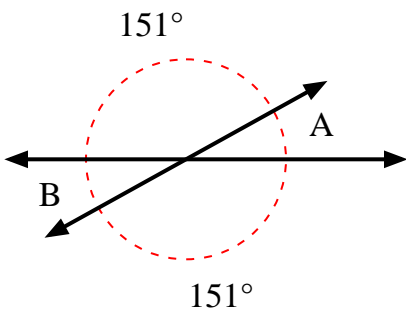
1)



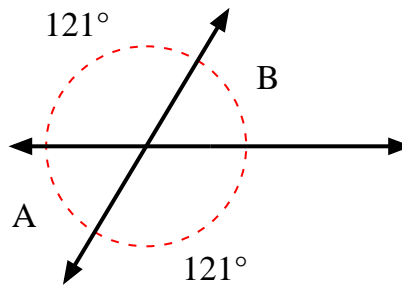
2)



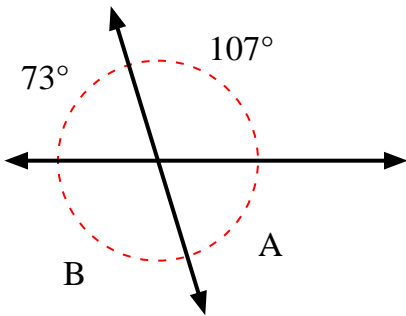
3)



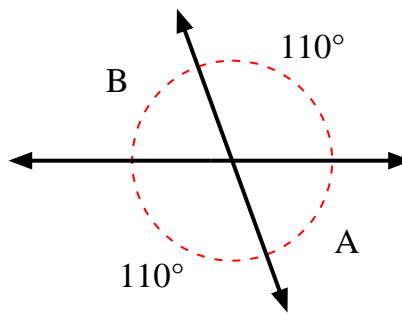
4)



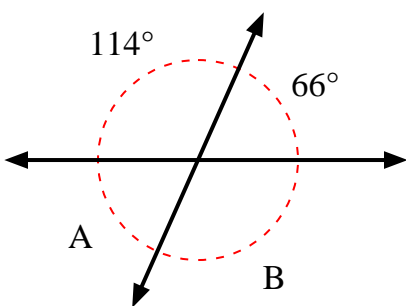
5)



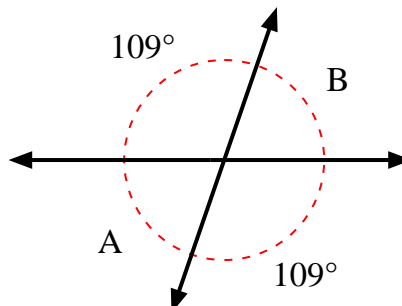
6)



7)



8)



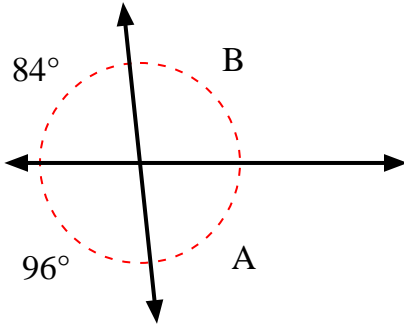
**Risposte**

1. \_\_\_\_\_
2. \_\_\_\_\_
3. \_\_\_\_\_
4. \_\_\_\_\_
5. \_\_\_\_\_
6. \_\_\_\_\_
7. \_\_\_\_\_
8. \_\_\_\_\_

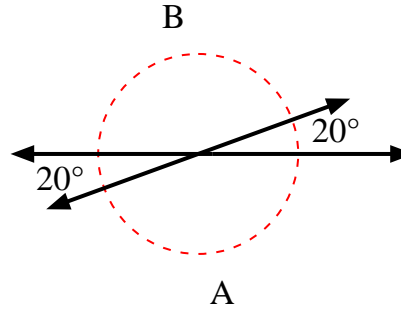


Trova il valore dell'angolo 'A' e dell'angolo 'B'.

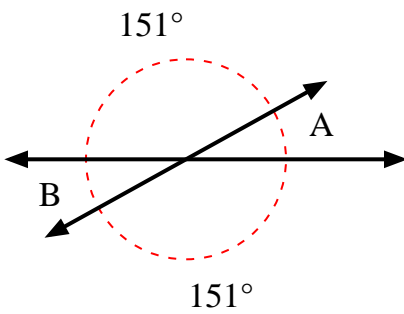
1)



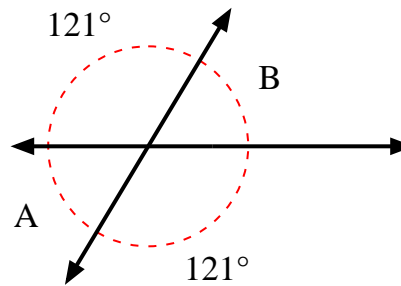
2)



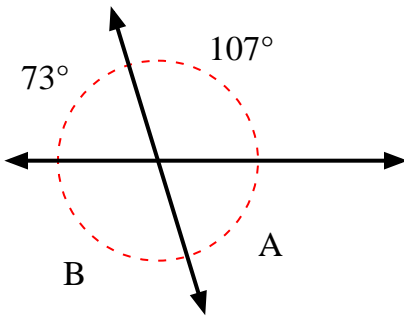
3)



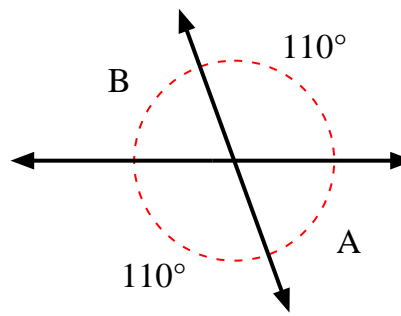
4)



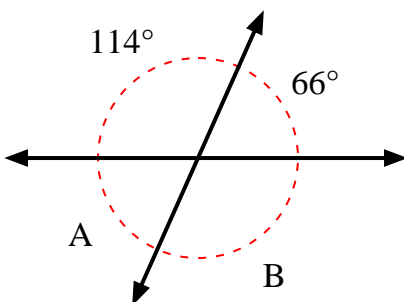
5)



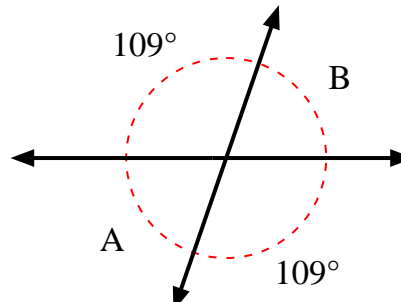
6)



7)



8)

**Risposte**

1.	<b>84°</b>	<b>96°</b>
2.	<b>160°</b>	<b>160°</b>
3.	<b>29°</b>	<b>29°</b>
4.	<b>59°</b>	<b>59°</b>
5.	<b>73°</b>	<b>107°</b>
6.	<b>70°</b>	<b>70°</b>
7.	<b>66°</b>	<b>114°</b>
8.	<b>71°</b>	<b>71°</b>