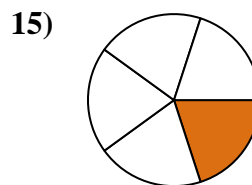
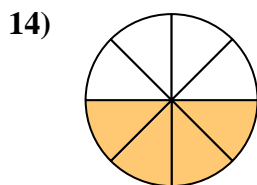
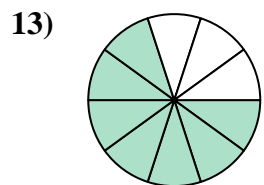
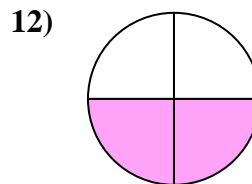
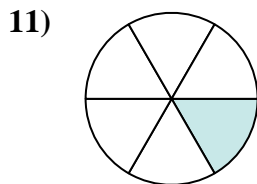
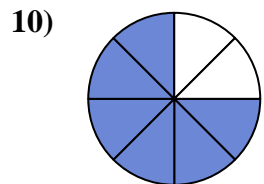
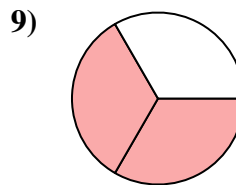
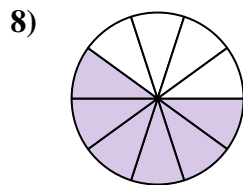
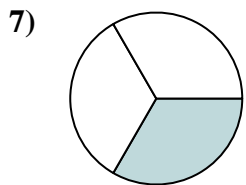
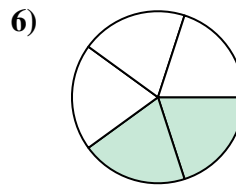
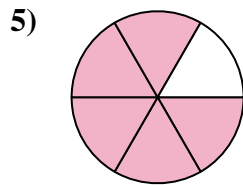
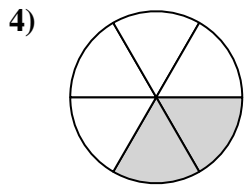
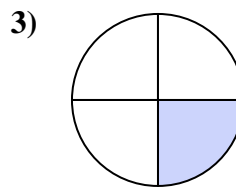
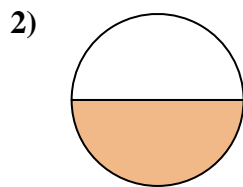
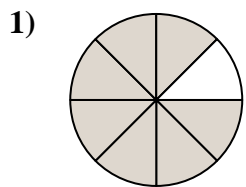




Trova l'angolo (in gradi) della parte ombreggiata del cerchio.



Risposte

1. _____

2. _____

3. _____

4. _____

5. _____

6. _____

7. _____

8. _____

9. _____

10. _____

11. _____

12. _____

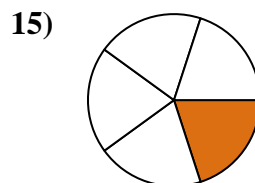
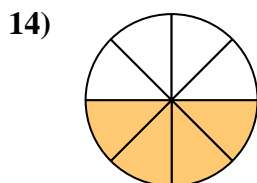
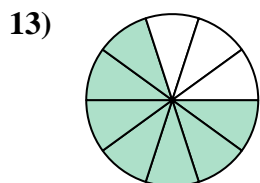
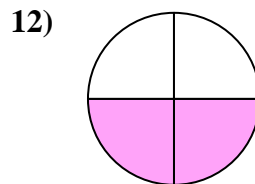
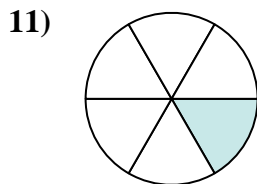
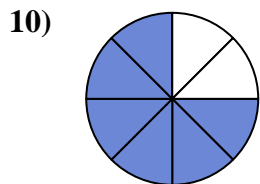
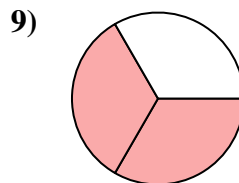
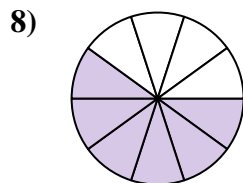
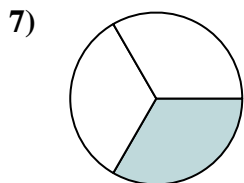
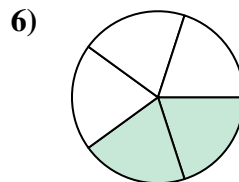
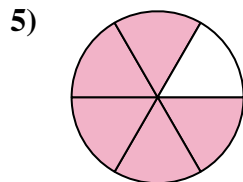
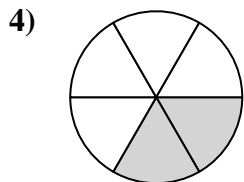
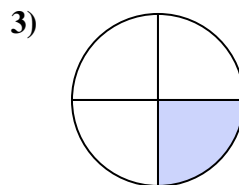
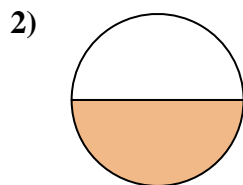
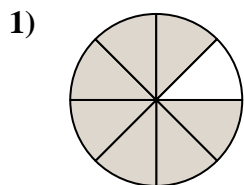
13. _____

14. _____

15. _____



Trova l'angolo (in gradi) della parte ombreggiata del cerchio.



Risposte

1. 315

2. 180

3. 90

4. 120

5. 300

6. 144

7. 120

8. 216

9. 240

10. 270

11. 60

12. 180

13. 252

14. 180

15. 72



Trova l'angolo (in gradi) della parte ombreggiata del cerchio.

120	270	90	216	315
180	180	144	240	300
120	60			

Risposte

1. _____
2. _____
3. _____
4. _____
5. _____
6. _____
7. _____
8. _____
9. _____
10. _____
11. _____
12. _____

