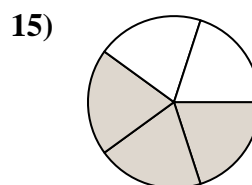
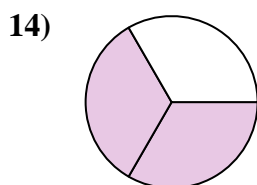
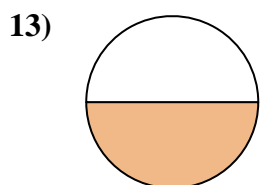
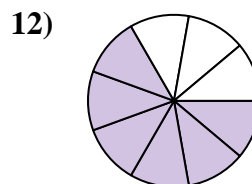
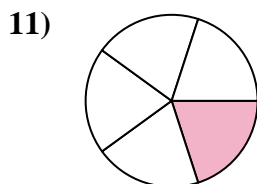
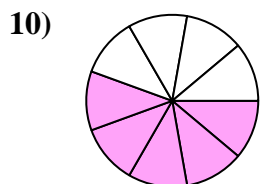
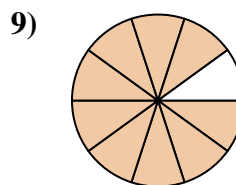
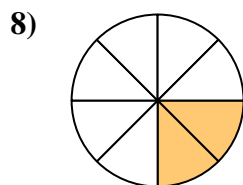
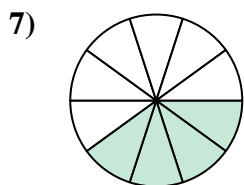
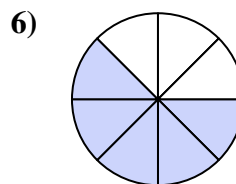
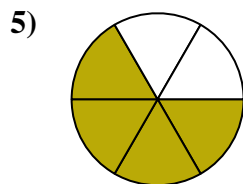
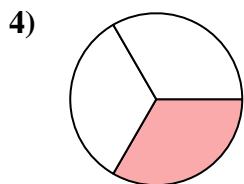
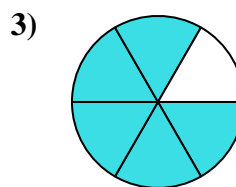
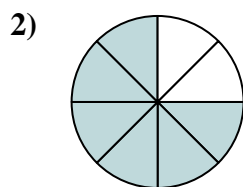
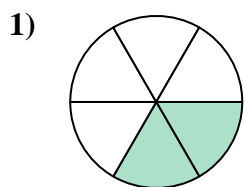




Trova l'angolo (in gradi) della parte ombreggiata del cerchio.

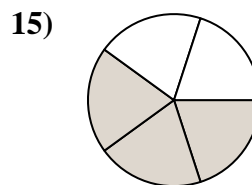
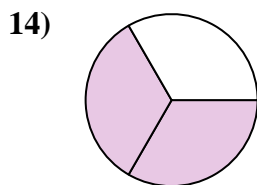
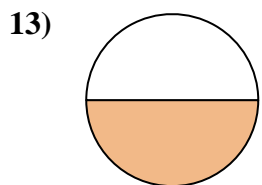
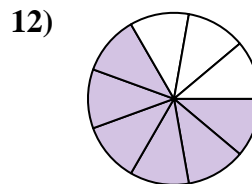
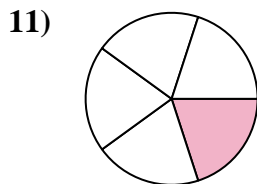
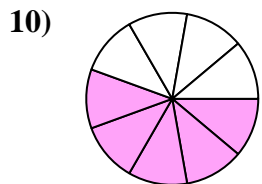
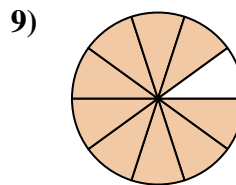
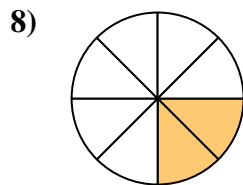
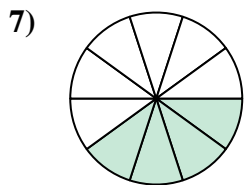
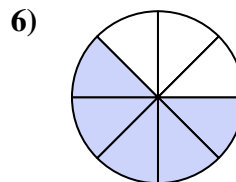
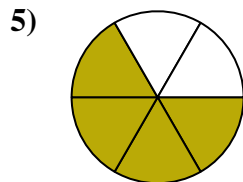
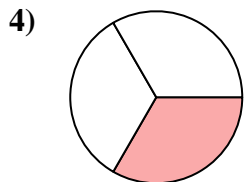
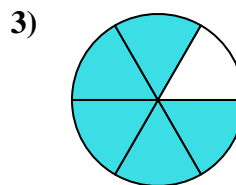
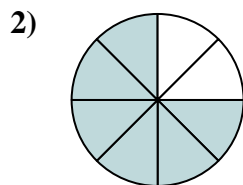
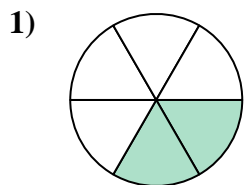


Risposte

1. _____
2. _____
3. _____
4. _____
5. _____
6. _____
7. _____
8. _____
9. _____
10. _____
11. _____
12. _____
13. _____
14. _____
15. _____



Trova l'angolo (in gradi) della parte ombreggiata del cerchio.



Risposte

1. 120

2. 270

3. 300

4. 120

5. 240

6. 225

7. 144

8. 90

9. 324

10. 200

11. 72

12. 240

13. 180

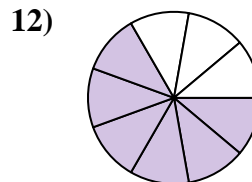
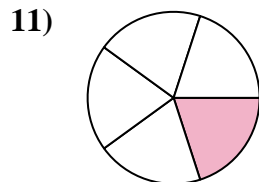
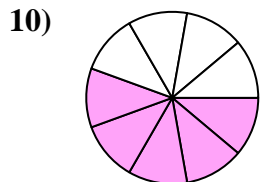
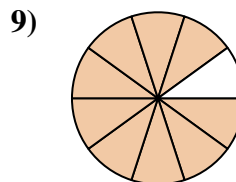
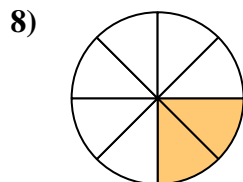
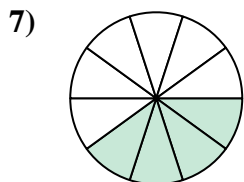
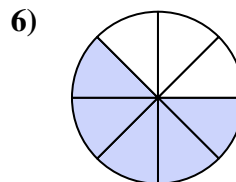
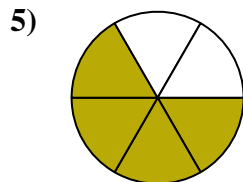
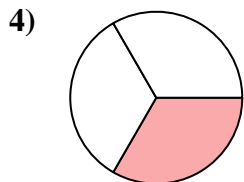
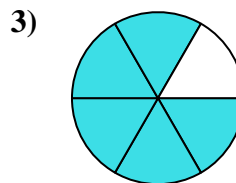
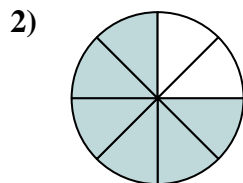
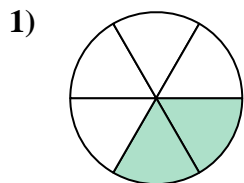
14. 240

15. 216



Trova l'angolo (in gradi) della parte ombreggiata del cerchio.

144	120	120	270	200
240	240	90	72	225
324	300			



Risposte

1. _____
2. _____
3. _____
4. _____
5. _____
6. _____
7. _____
8. _____
9. _____
10. _____
11. _____
12. _____