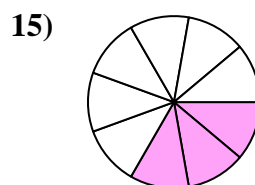
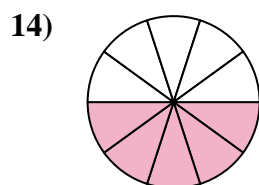
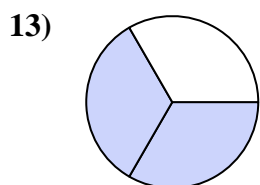
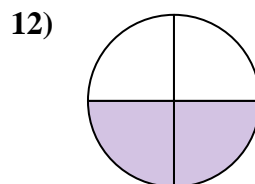
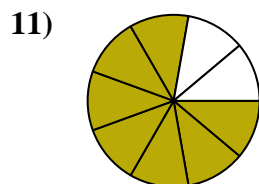
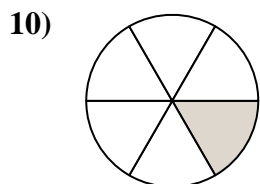
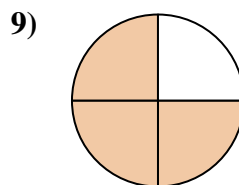
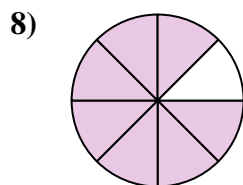
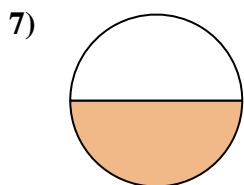
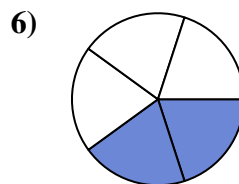
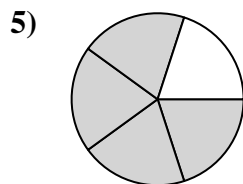
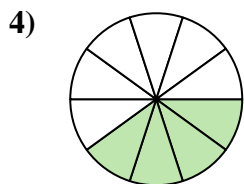
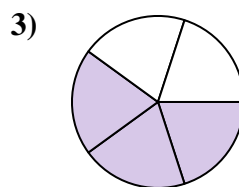
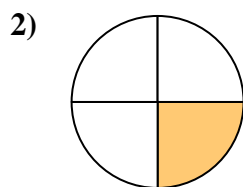
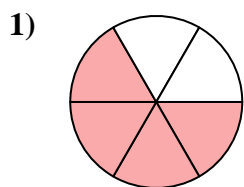




Trova l'angolo (in gradi) della parte ombreggiata del cerchio.

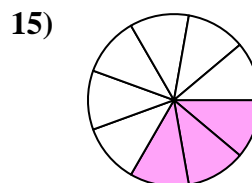
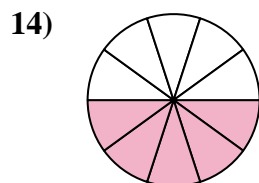
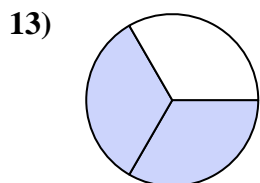
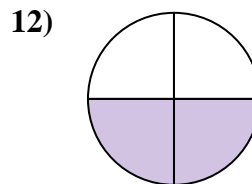
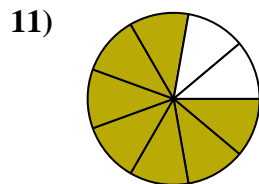
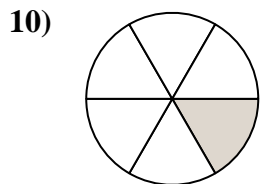
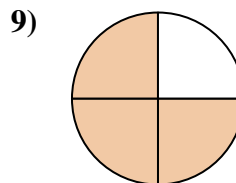
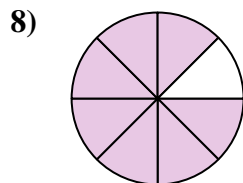
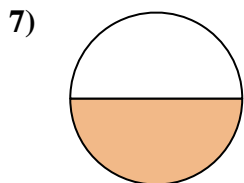
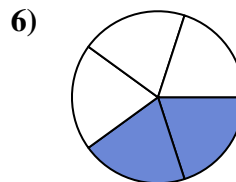
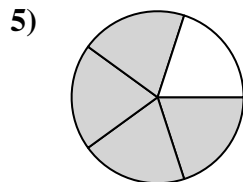
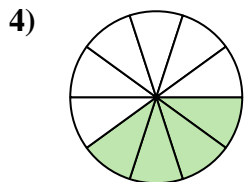
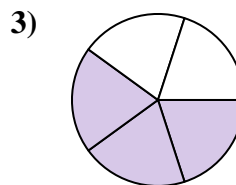
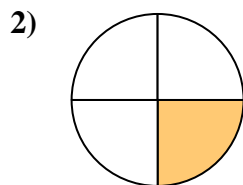
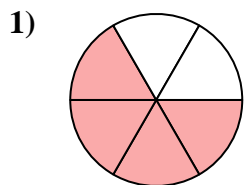


Risposte

1. _____
2. _____
3. _____
4. _____
5. _____
6. _____
7. _____
8. _____
9. _____
10. _____
11. _____
12. _____
13. _____
14. _____
15. _____



Trova l'angolo (in gradi) della parte ombreggiata del cerchio.



Risposte

1. 240

2. 90

3. 216

4. 144

5. 288

6. 144

7. 180

8. 315

9. 270

10. 60

11. 280

12. 180

13. 240

14. 180

15. 120



Trova l'angolo (in gradi) della parte ombreggiata del cerchio.

288

216

315

144

280

60

90

240

144

270

180

180

Risposte

1. _____

2. _____

3. _____

4. _____

5. _____

6. _____

7. _____

8. _____

9. _____

10. _____

11. _____

12. _____

