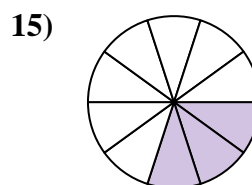
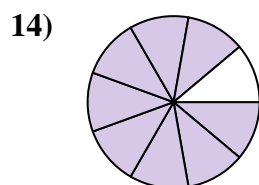
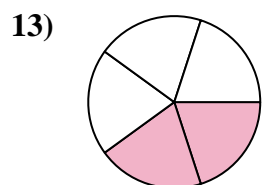
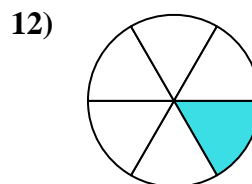
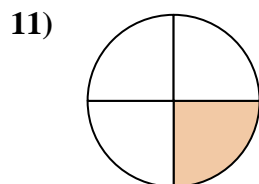
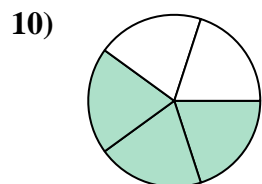
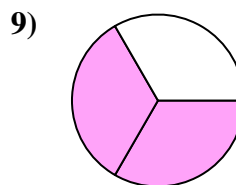
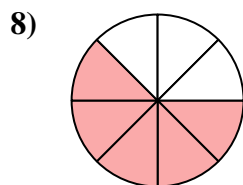
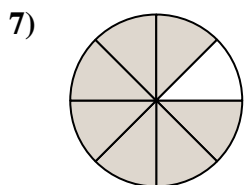
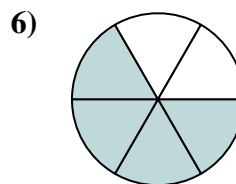
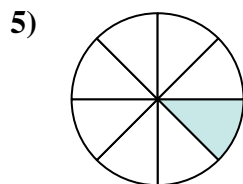
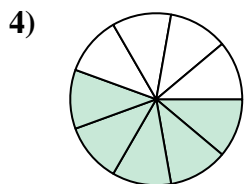
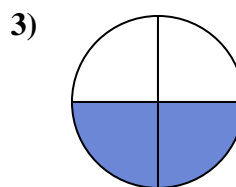
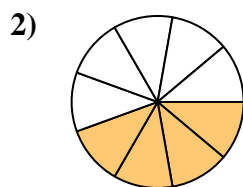
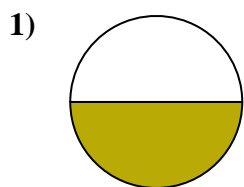




Trova l'angolo (in gradi) della parte ombreggiata del cerchio.

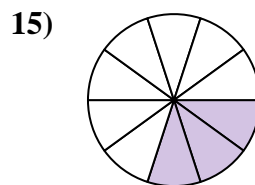
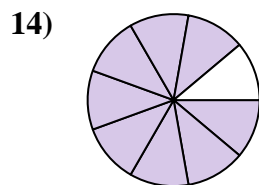
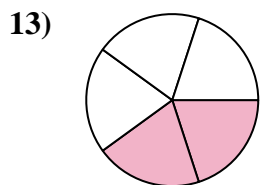
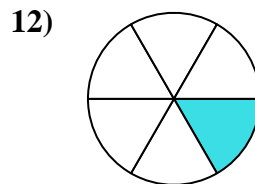
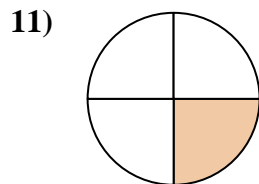
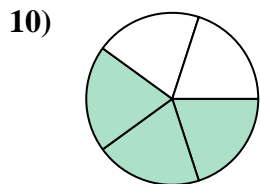
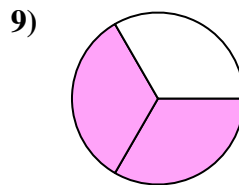
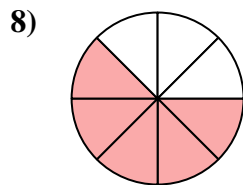
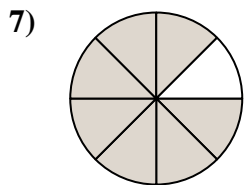
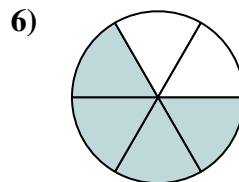
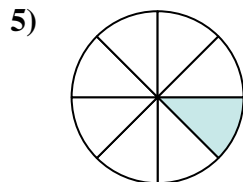
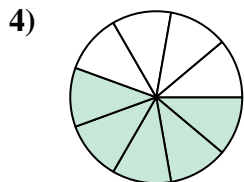
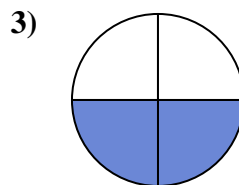
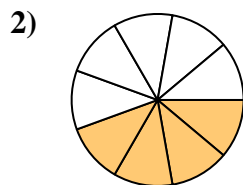
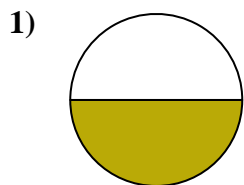


**Risposte**

1. \_\_\_\_\_
2. \_\_\_\_\_
3. \_\_\_\_\_
4. \_\_\_\_\_
5. \_\_\_\_\_
6. \_\_\_\_\_
7. \_\_\_\_\_
8. \_\_\_\_\_
9. \_\_\_\_\_
10. \_\_\_\_\_
11. \_\_\_\_\_
12. \_\_\_\_\_
13. \_\_\_\_\_
14. \_\_\_\_\_
15. \_\_\_\_\_



Trova l'angolo (in gradi) della parte ombreggiata del cerchio.



**Risposte**

1. 180

2. 160

3. 180

4. 200

5. 45

6. 240

7. 315

8. 225

9. 240

10. 216

11. 90

12. 60

13. 144

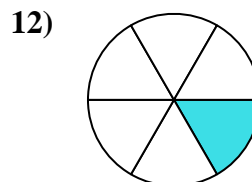
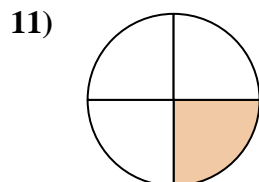
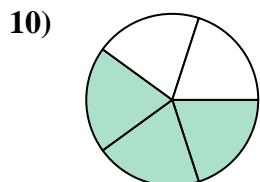
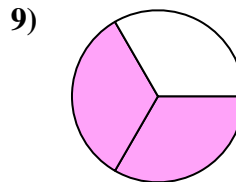
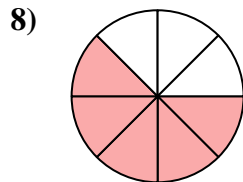
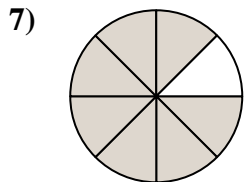
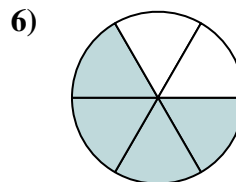
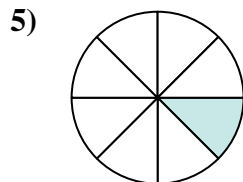
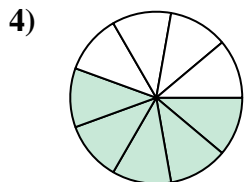
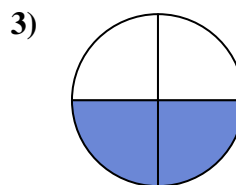
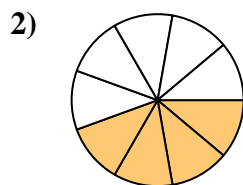
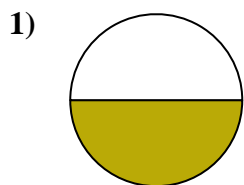
14. 320

15. 108



Trova l'angolo (in gradi) della parte ombreggiata del cerchio.

90	200	240	60	160
216	315	180	45	225
240	180			



**Risposte**

1. \_\_\_\_\_
2. \_\_\_\_\_
3. \_\_\_\_\_
4. \_\_\_\_\_
5. \_\_\_\_\_
6. \_\_\_\_\_
7. \_\_\_\_\_
8. \_\_\_\_\_
9. \_\_\_\_\_
10. \_\_\_\_\_
11. \_\_\_\_\_
12. \_\_\_\_\_