



Calcola l'angolo del cerchio rispetto a (0,0).

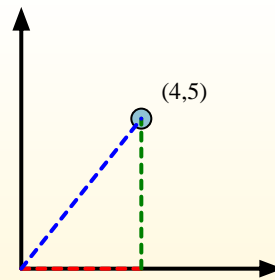
Primero encuentra la pendiente.

$$(y_2 - y_1) \div (x_2 - x_1) = m$$

$$(5 - 0) \div (4 - 0) = 1.25$$

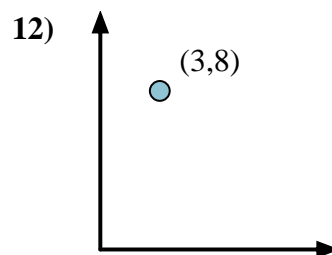
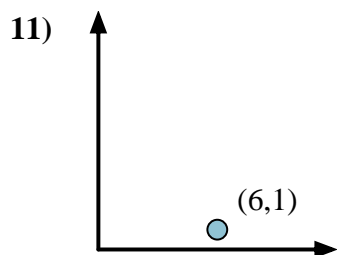
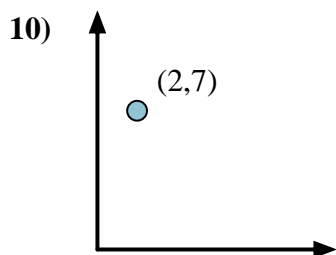
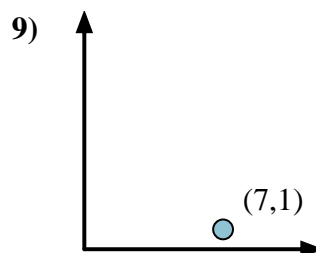
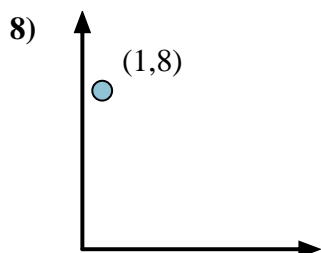
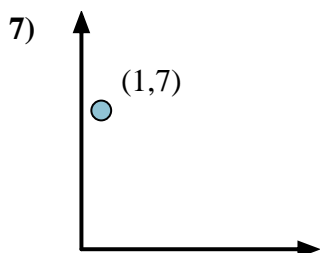
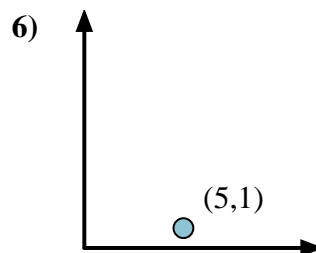
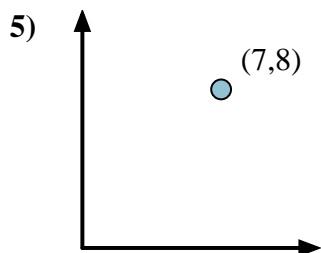
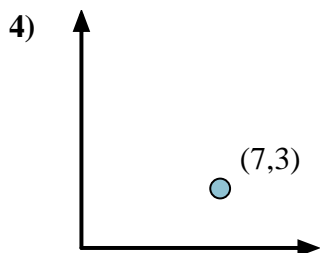
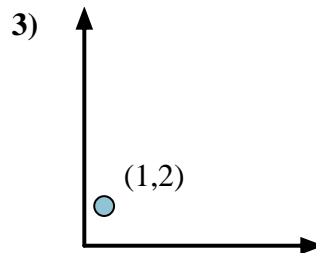
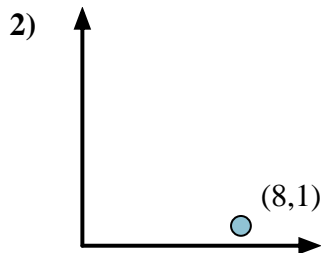
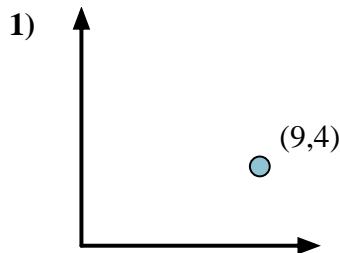
Em seguida, encontre o arco da tangente (também conhecido como tangente inversa) da inclinação.

$$\arctan(1.25) = 51.34^\circ$$



Risposte

1. _____
2. _____
3. _____
4. _____
5. _____
6. _____
7. _____
8. _____
9. _____
10. _____
11. _____
12. _____





Calcola l'angolo del cerchio rispetto a (0,0).

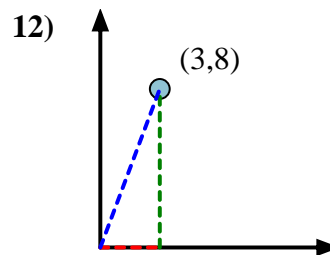
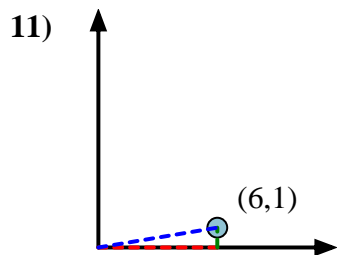
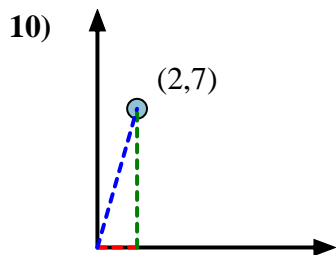
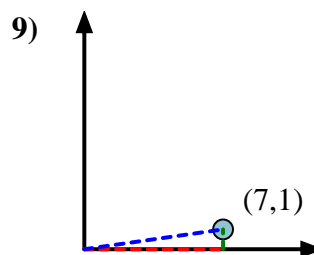
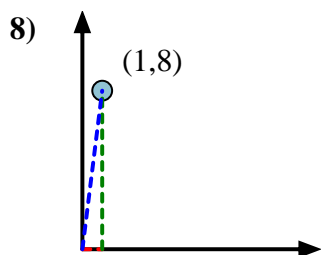
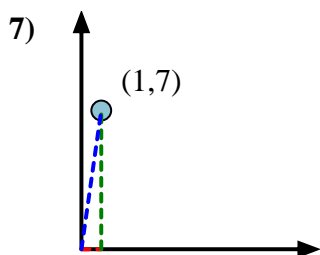
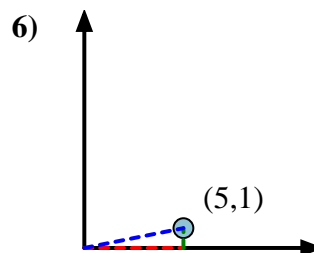
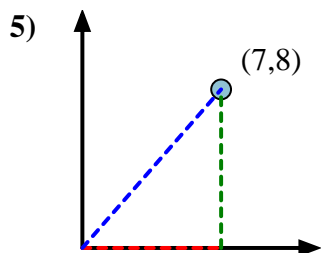
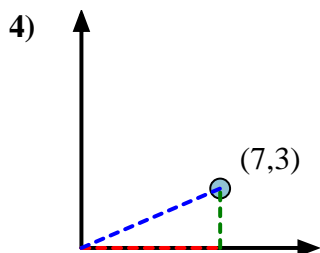
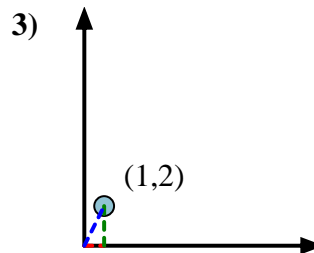
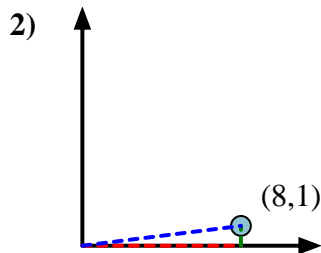
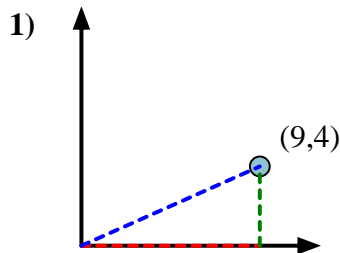
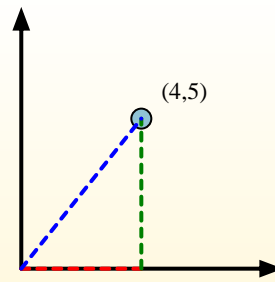
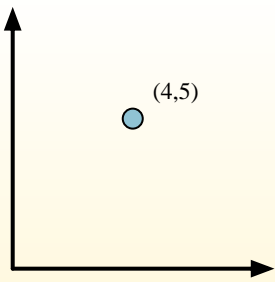
Primeramente encuentra la pendiente.

$$(y_2 - y_1) \div (x_2 - x_1) = m$$

$$(5 - 0) \div (4 - 0) = 1.25$$

Em seguida, encontre o arco da tangente (também conhecido como tangente inversa) da inclinação.

$$\arctan(1.25) = 51.34^\circ$$

**Risposte**1. **23,96**2. **7,13**3. **63,43**4. **23,20**5. **48,81**6. **11,31**7. **81,87**8. **82,87**9. **8,13**10. **74,05**11. **9,46**12. **69,44**



Calcola l'angolo del cerchio rispetto a (0,0).

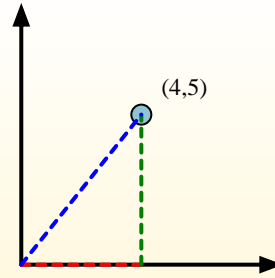
Primerò encuentra la pendiente.

$$(y_2 - y_1) \div (x_2 - x_1) = m$$

$$(5 - 0) \div (4 - 0) = 1.25$$

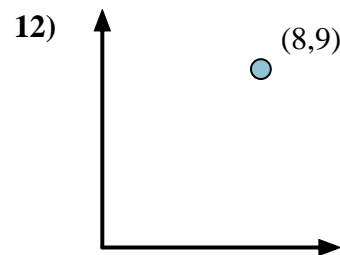
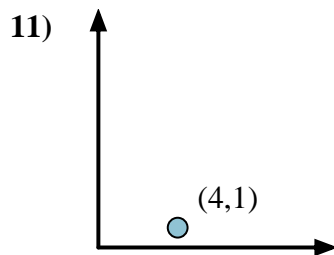
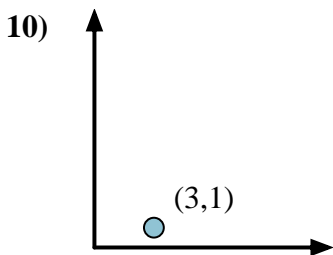
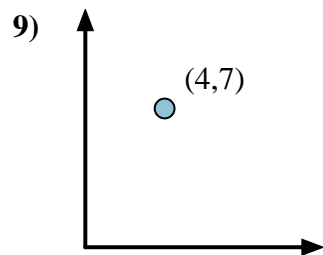
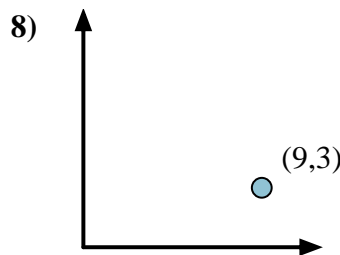
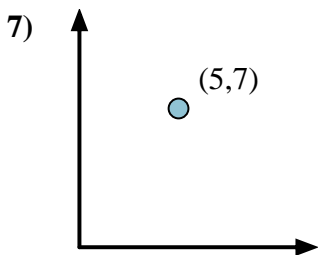
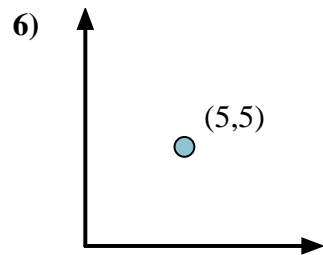
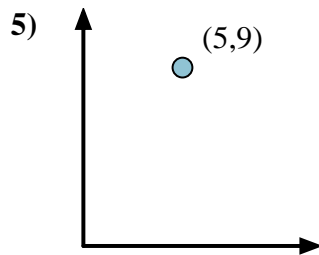
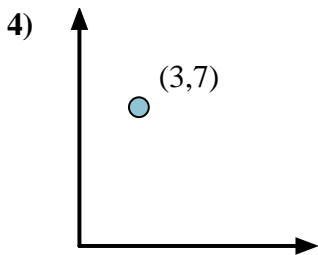
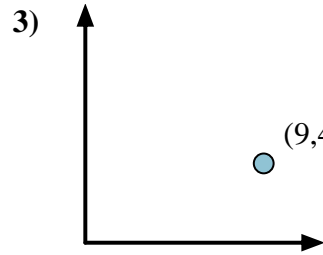
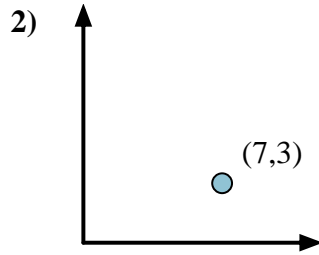
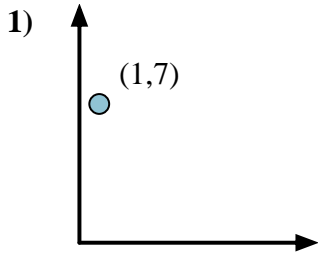
Em seguida, encontre o arco da tangente (também conhecido como tangente inversa) da inclinação.

$$\arctan(1.25) = 51.34^\circ$$



Risposte

1. _____
2. _____
3. _____
4. _____
5. _____
6. _____
7. _____
8. _____
9. _____
10. _____
11. _____
12. _____





Calcola l'angolo del cerchio rispetto a (0,0).

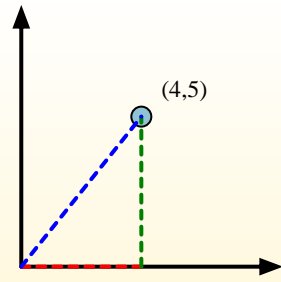
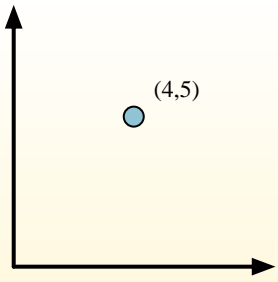
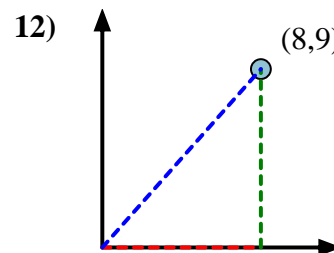
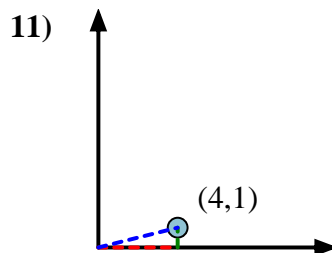
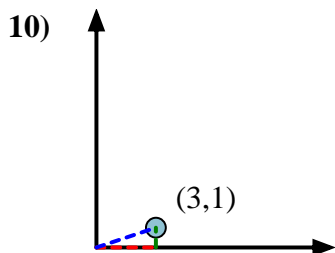
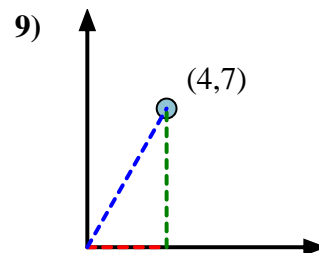
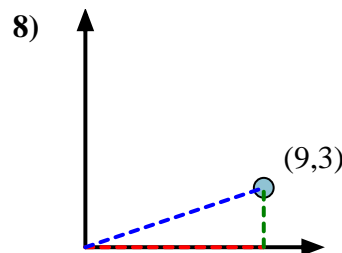
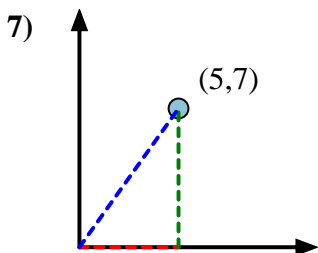
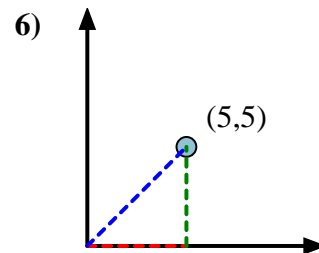
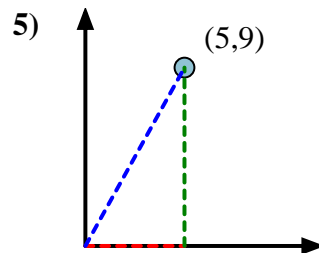
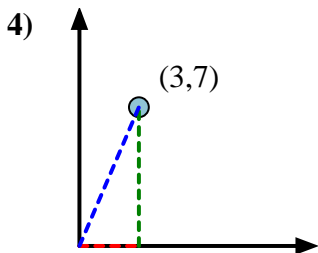
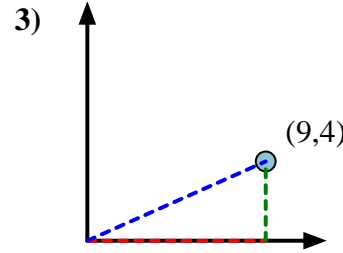
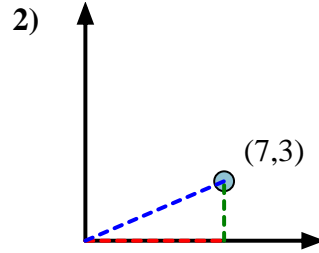
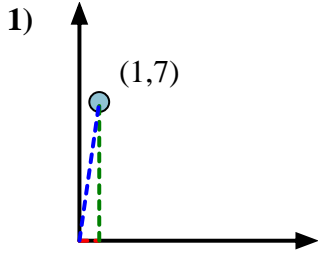
Primeramente encuentra la pendiente.

$$(y_2 - y_1) \div (x_2 - x_1) = m$$

$$(5 - 0) \div (4 - 0) = 1.25$$

Em seguida, encontre o arco da tangente (também conhecido como tangente inversa) da inclinação.

$$\arctan(1.25) = 51.34^\circ$$

**Risposte**1. **81,87**2. **23,20**3. **23,96**4. **66,80**5. **60,95**6. **45,00**7. **54,46**8. **18,43**9. **60,26**10. **18,43**11. **14,04**12. **48,37**



Calcola l'angolo del cerchio rispetto a (0,0).

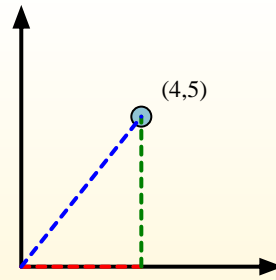
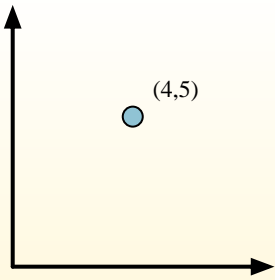
Primerò encuentra la pendiente.

$$(y_2 - y_1) \div (x_2 - x_1) = m$$

$$(5 - 0) \div (4 - 0) = 1.25$$

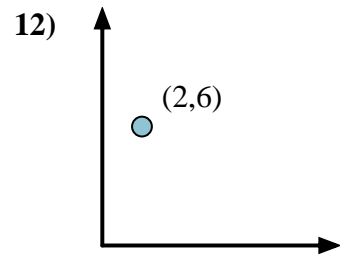
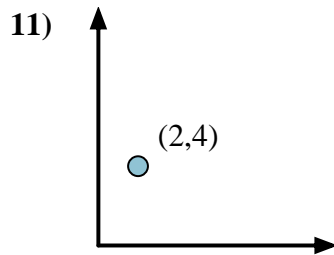
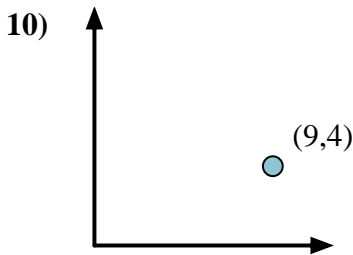
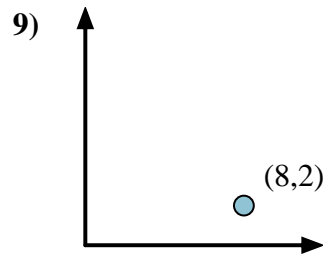
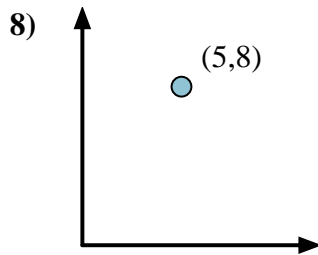
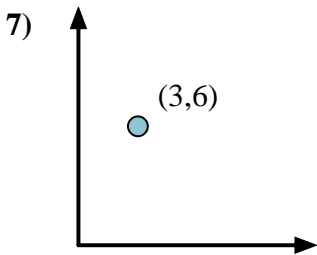
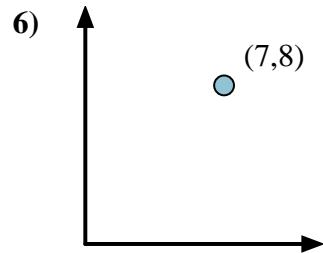
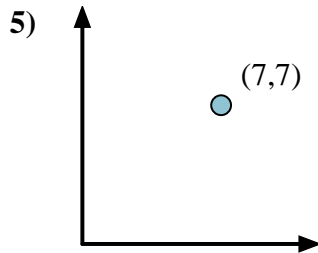
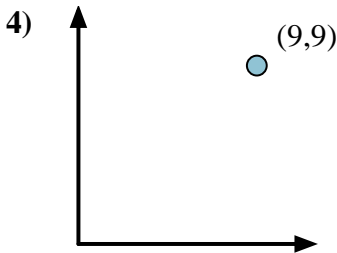
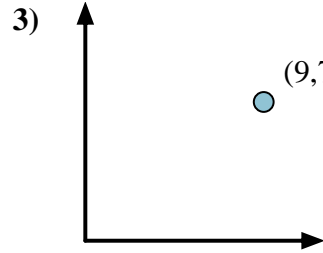
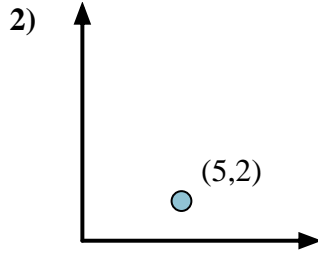
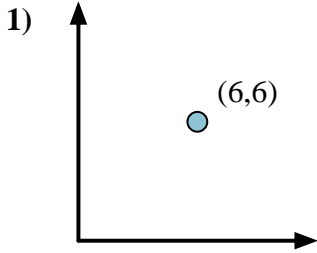
Em seguida, encontre o arco da tangente (também conhecido como tangente inversa) da inclinação.

$$\arctan(1.25) = 51.34^\circ$$



Risposte

1. _____
2. _____
3. _____
4. _____
5. _____
6. _____
7. _____
8. _____
9. _____
10. _____
11. _____
12. _____





Calcola l'angolo del cerchio rispetto a (0,0).

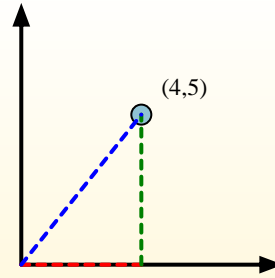
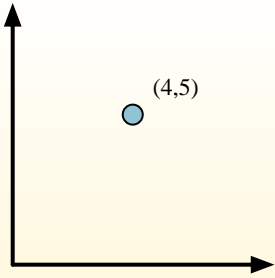
Primeramente encuentra la pendiente.

$$(y_2 - y_1) \div (x_2 - x_1) = m$$

$$(5 - 0) \div (4 - 0) = 1.25$$

Em seguida, encontre o arco da tangente (também conhecido como tangente inversa) da inclinação.

$$\arctan(1.25) = 51.34^\circ$$



Risposte

1. **45,00**

2. **21,80**

3. **37,87**

4. **45,00**

5. **45,00**

6. **48,81**

7. **63,43**

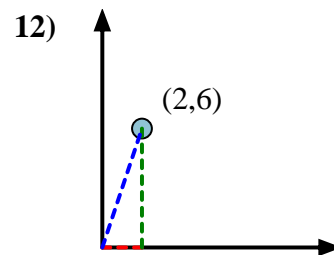
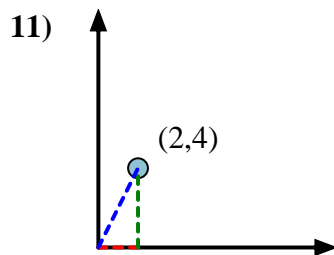
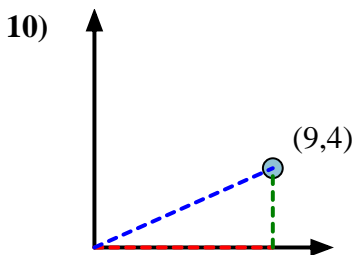
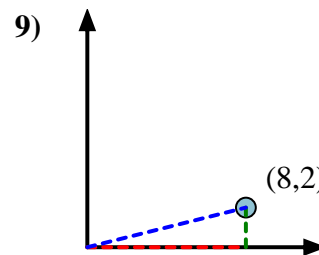
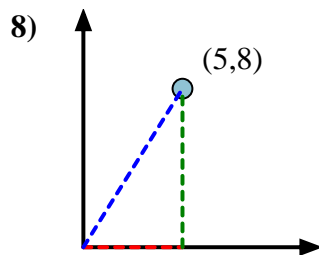
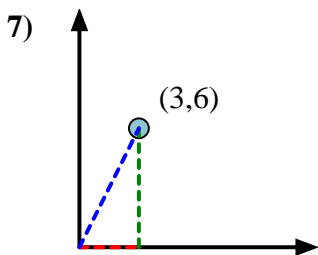
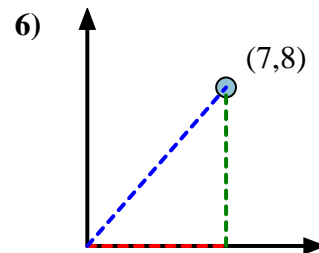
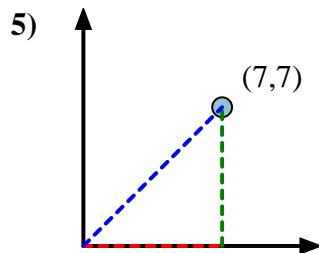
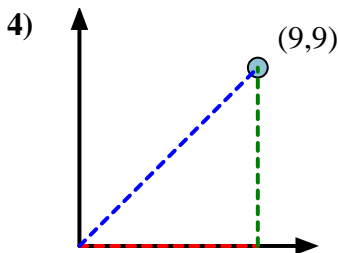
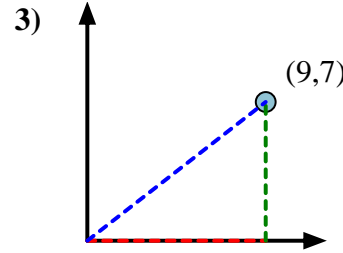
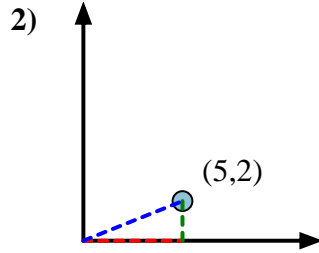
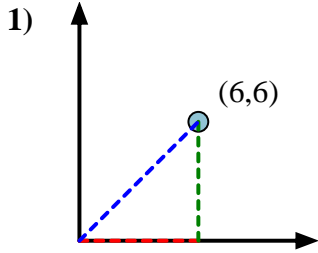
8. **57,99**

9. **14,04**

10. **23,96**

11. **63,43**

12. **71,57**





Calcola l'angolo del cerchio rispetto a (0,0).

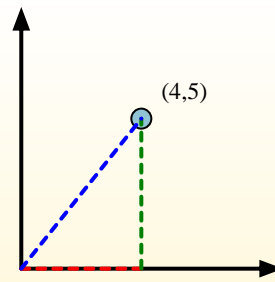
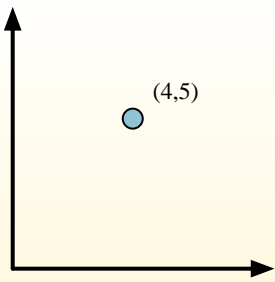
Primerò encuentra la pendiente.

$$(y_2 - y_1) \div (x_2 - x_1) = m$$

$$(5 - 0) \div (4 - 0) = 1.25$$

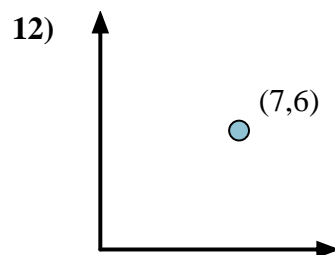
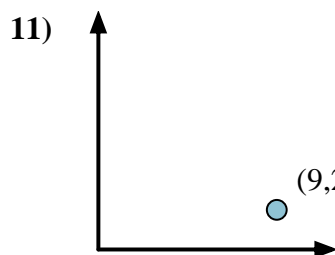
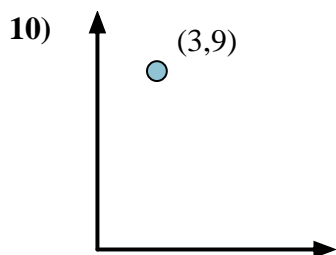
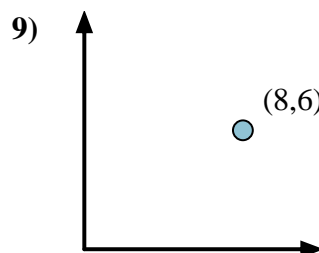
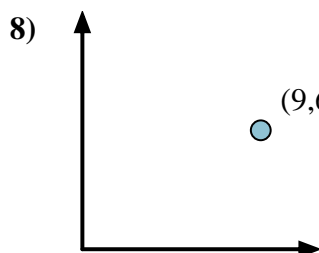
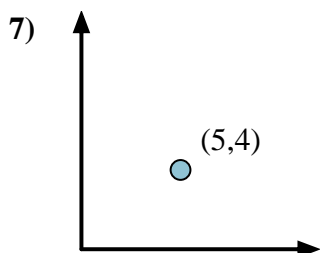
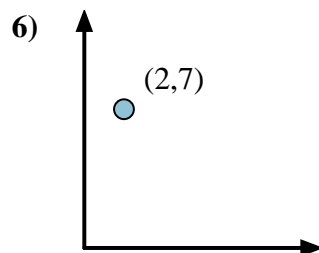
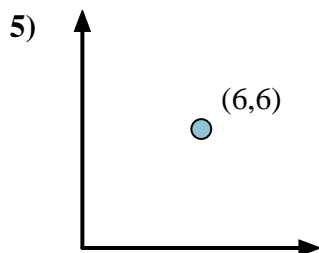
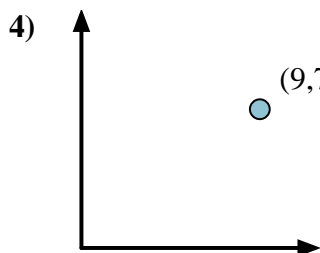
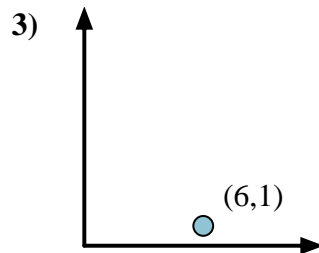
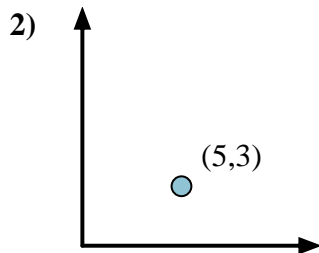
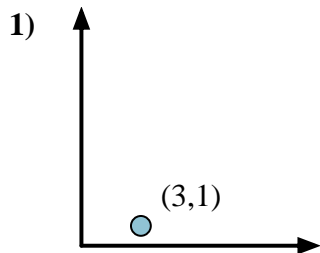
Em seguida, encontre o arco da tangente (também conhecido como tangente inversa) da inclinação.

$$\arctan(1.25) = 51.34^\circ$$



Risposte

1. _____
2. _____
3. _____
4. _____
5. _____
6. _____
7. _____
8. _____
9. _____
10. _____
11. _____
12. _____





Calcola l'angolo del cerchio rispetto a (0,0).

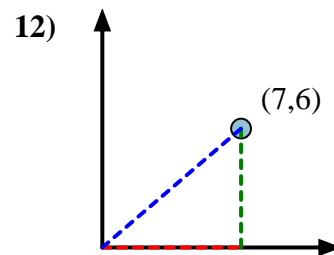
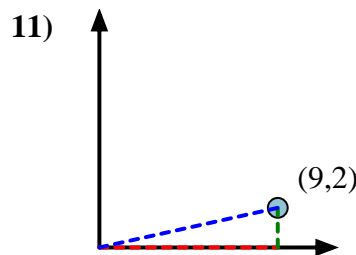
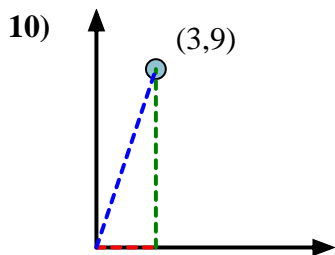
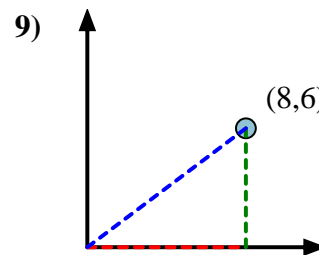
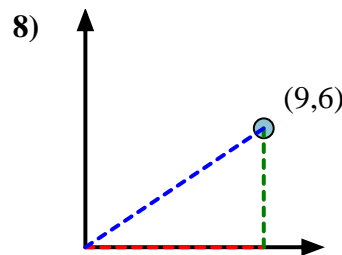
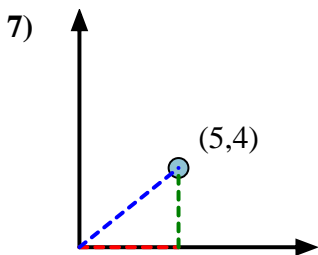
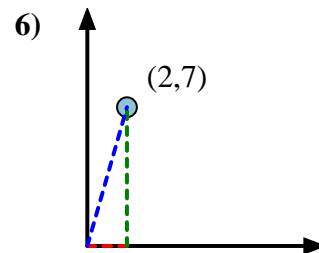
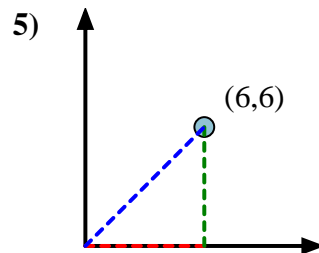
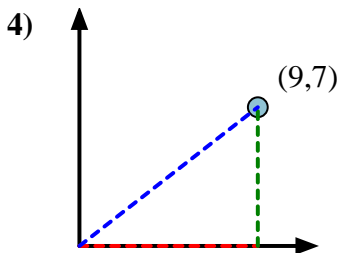
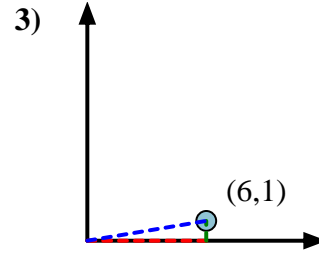
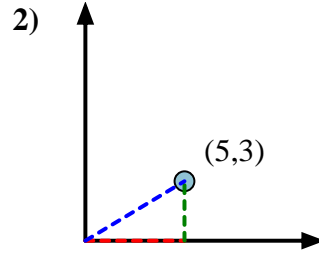
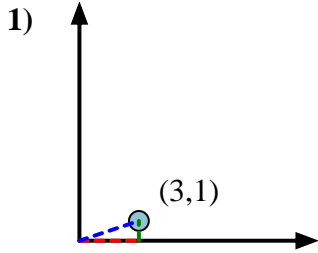
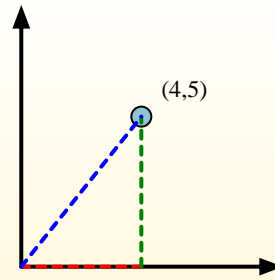
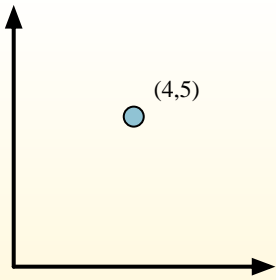
Primeramente encuentra la pendiente.

$$(y_2 - y_1) \div (x_2 - x_1) = m$$

$$(5 - 0) \div (4 - 0) = 1.25$$

Em seguida, encontre o arco da tangente (também conhecido como tangente inversa) da inclinação.

$$\arctan(1.25) = 51.34^\circ$$

**Risposte**1. **18,43**2. **30,96**3. **9,46**4. **37,87**5. **45,00**6. **74,05**7. **38,66**8. **33,69**9. **36,87**10. **71,57**11. **12,53**12. **40,60**



Calcola l'angolo del cerchio rispetto a (0,0).

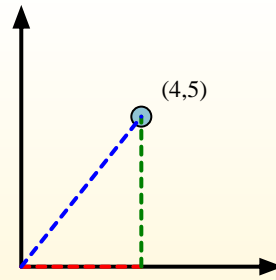
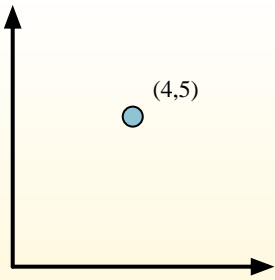
Primerò encuentra la pendiente.

$$(y_2 - y_1) \div (x_2 - x_1) = m$$

$$(5 - 0) \div (4 - 0) = 1.25$$

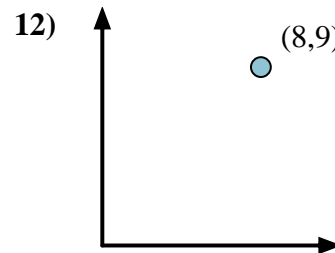
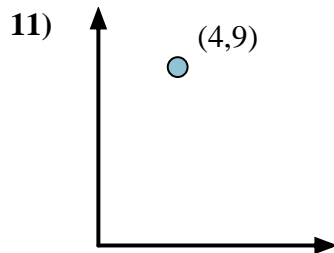
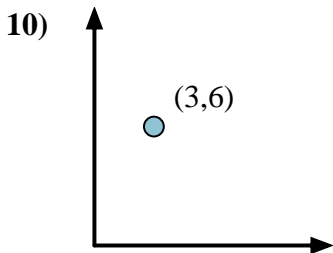
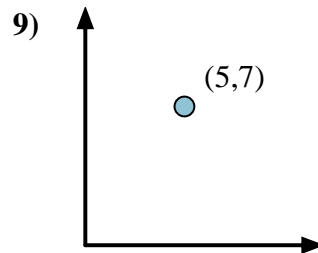
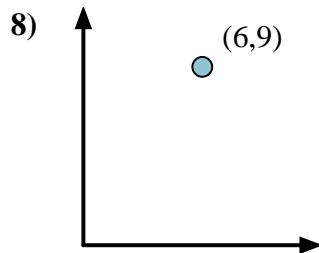
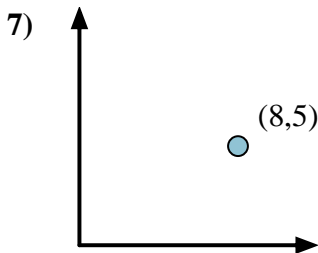
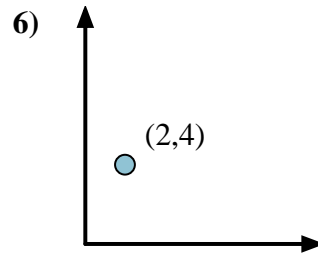
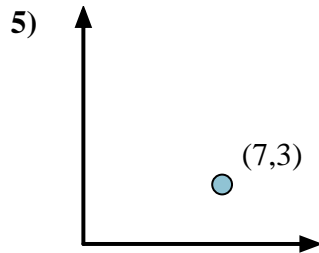
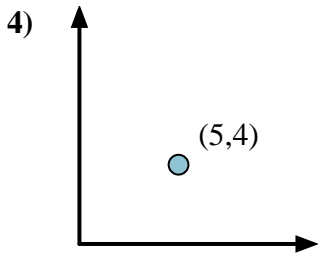
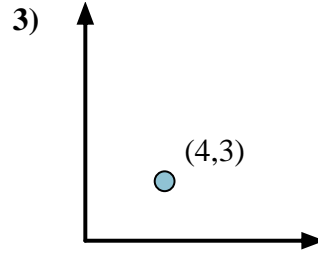
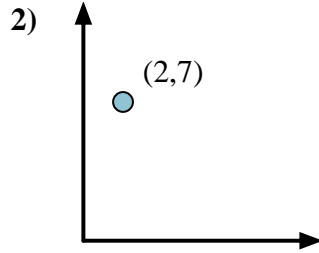
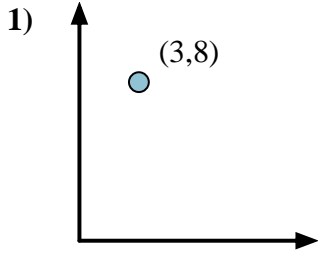
Em seguida, encontre o arco da tangente (também conhecido como tangente inversa) da inclinação.

$$\arctan(1.25) = 51.34^\circ$$



Risposte

1. _____
2. _____
3. _____
4. _____
5. _____
6. _____
7. _____
8. _____
9. _____
10. _____
11. _____
12. _____



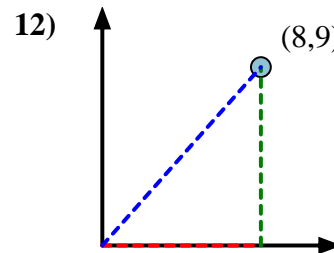
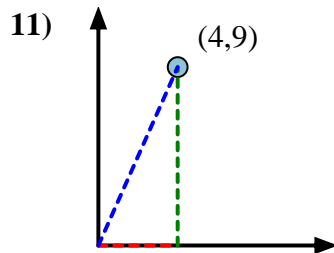
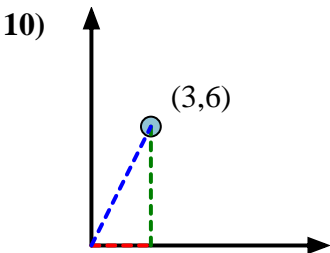
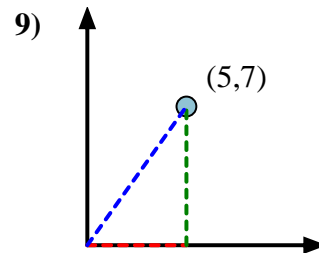
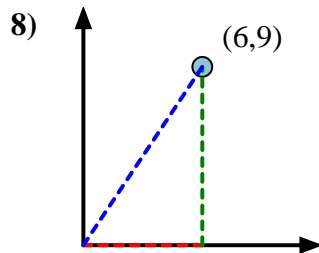
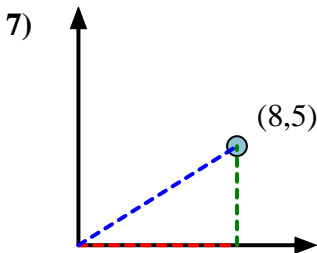
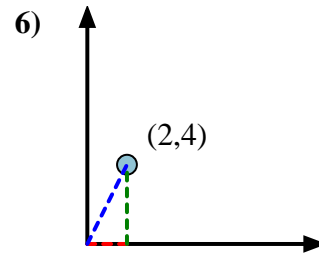
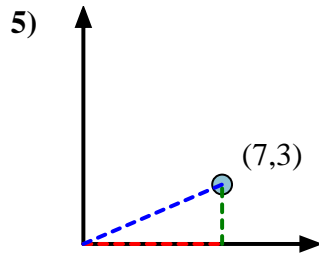
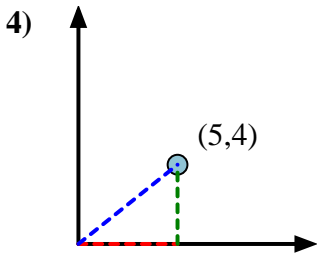
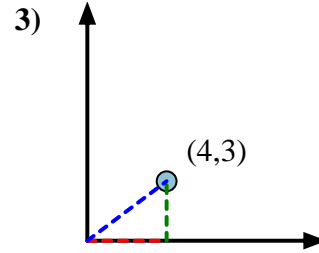
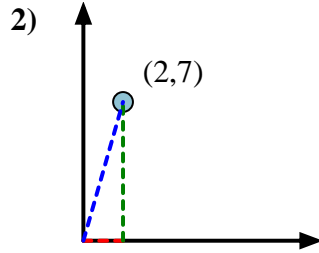
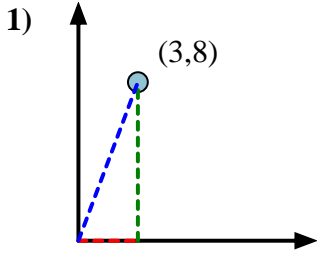


Calcola l'angolo del cerchio rispetto a (0,0).

Primeramente encuentra la pendiente.
 $(y_2 - y_1) \div (x_2 - x_1) = m$
 $(5 - 0) \div (4 - 0) = 1.25$

Em seguida, encuentre o arco da tangente (também conhecido como tangente inversa) da inclinação.
 $\arctan(1.25) = 51.34^\circ$

Risposte



1. 69,44
2. 74,05
3. 36,87
4. 38,66
5. 23,20
6. 63,43
7. 32,01
8. 56,31
9. 54,46
10. 63,43
11. 66,04
12. 48,37



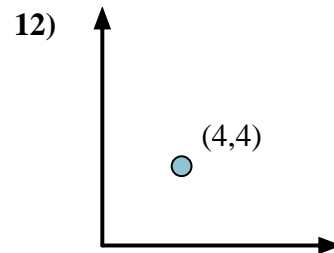
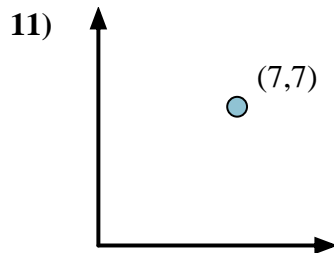
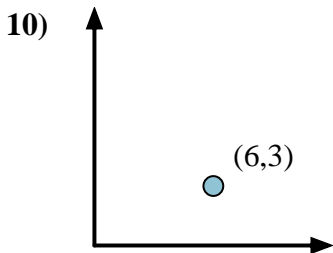
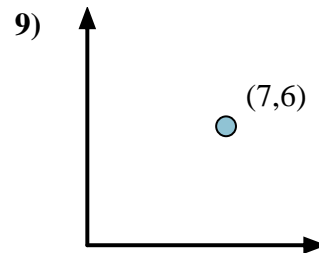
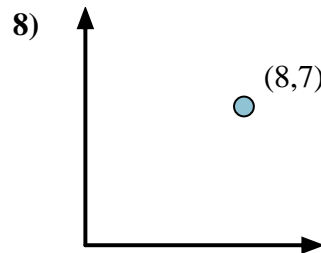
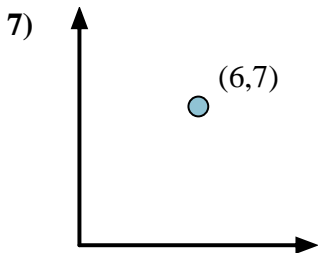
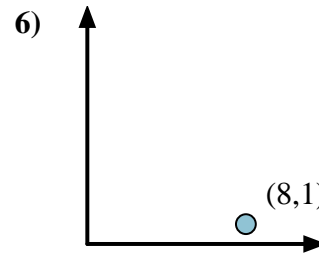
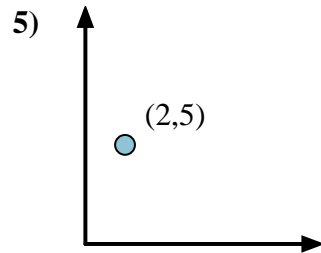
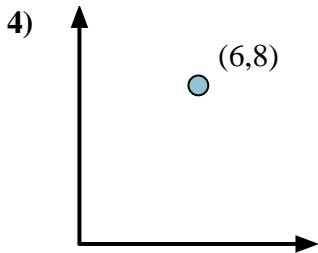
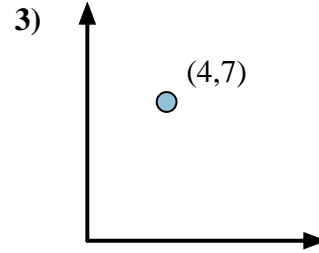
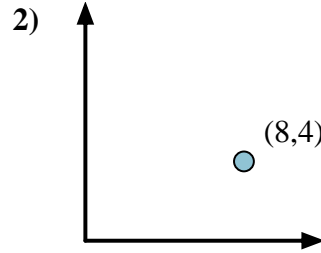
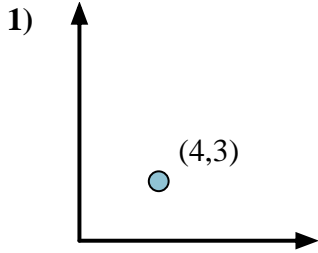
Calcola l'angolo del cerchio rispetto a (0,0).

Primerò encuentra la pendiente.
 $(y_2 - y_1) \div (x_2 - x_1) = m$
 $(5 - 0) \div (4 - 0) = 1.25$

Em seguida, encuentre o arco da tangente (também conhecido como tangente inversa) da inclinação.
 $\arctan(1.25) = 51.34^\circ$

Risposte

1. _____
2. _____
3. _____
4. _____
5. _____
6. _____
7. _____
8. _____
9. _____
10. _____
11. _____
12. _____





Calcola l'angolo del cerchio rispetto a (0,0).

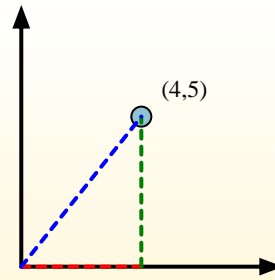
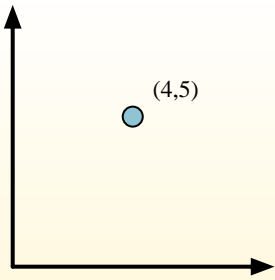
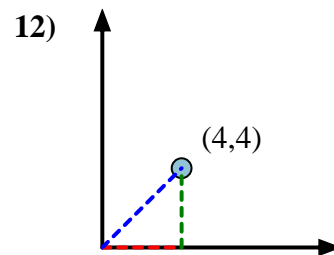
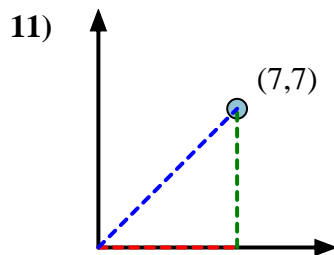
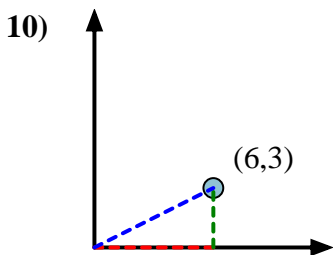
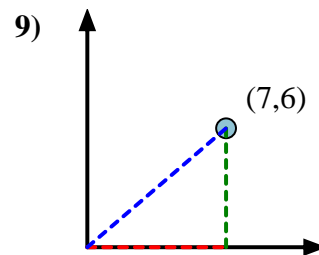
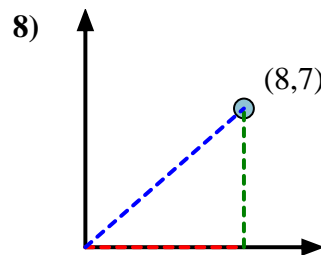
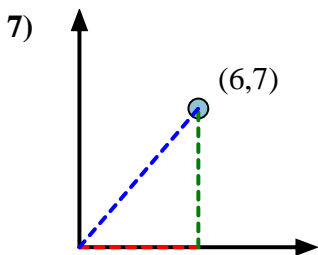
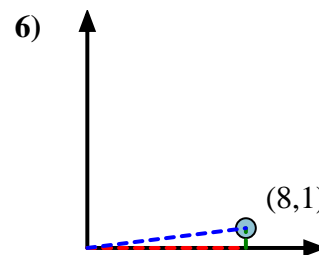
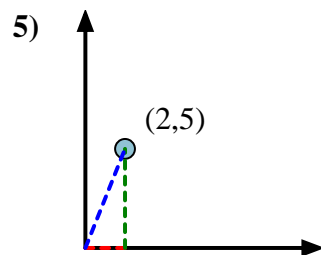
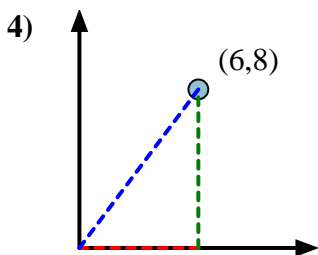
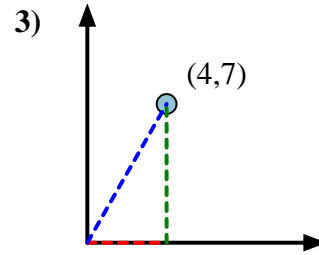
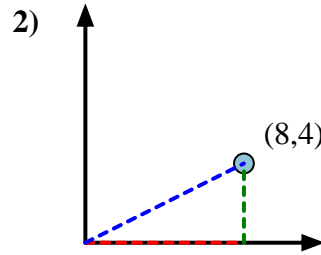
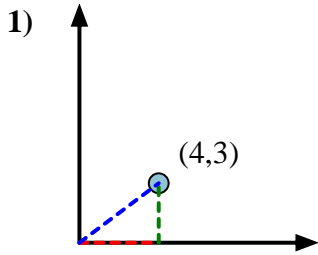
Primeramente encuentra la pendiente.

$$(y_2 - y_1) \div (x_2 - x_1) = m$$

$$(5 - 0) \div (4 - 0) = 1.25$$

Em seguida, encontre o arco da tangente (também conhecido como tangente inversa) da inclinação.

$$\arctan(1.25) = 51.34^\circ$$

**Risposte**1. **36,87**2. **26,57**3. **60,26**4. **53,13**5. **68,20**6. **7,13**7. **49,40**8. **41,19**9. **40,60**10. **26,57**11. **45,00**12. **45,00**



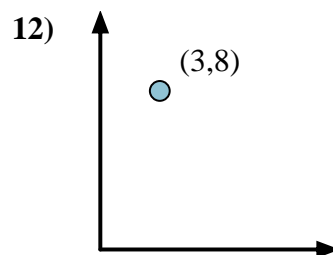
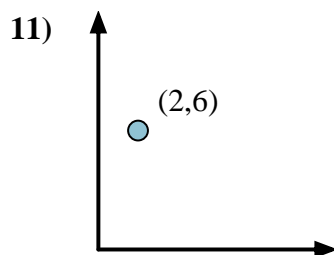
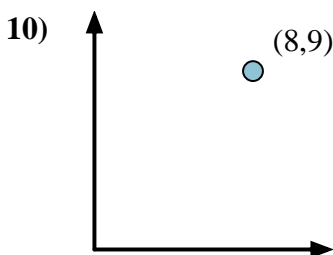
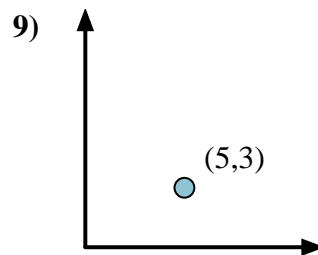
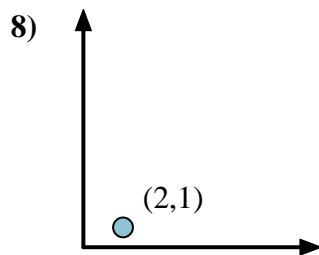
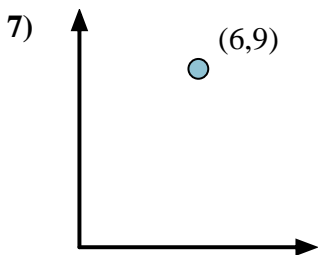
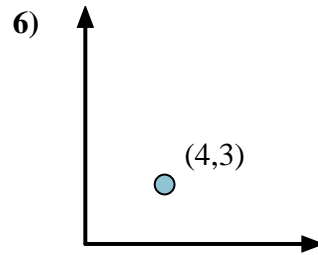
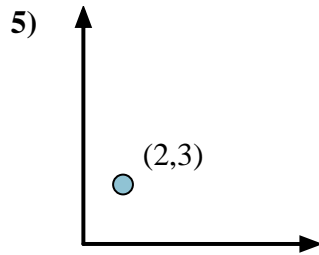
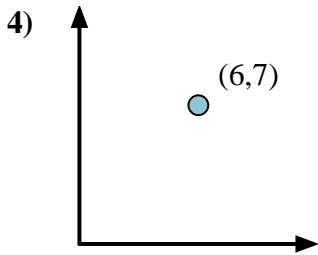
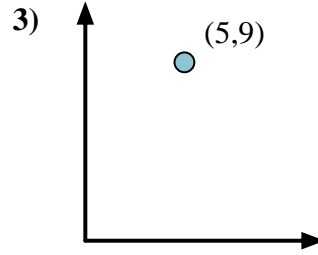
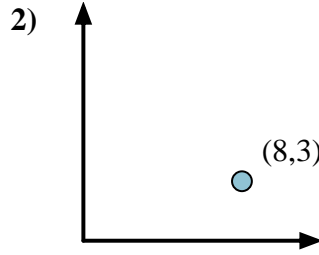
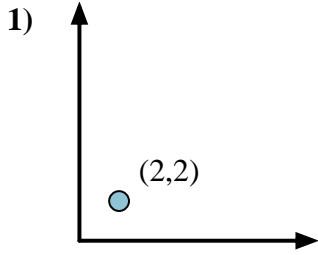
Calcola l'angolo del cerchio rispetto a (0,0).

Primerò encuentra la pendiente.
 $(y_2 - y_1) \div (x_2 - x_1) = m$
 $(5 - 0) \div (4 - 0) = 1.25$

Em seguida, encuentre o arco da tangente (também conhecido como tangente inversa) da inclinação.
 $\arctan(1.25) = 51.34^\circ$

Risposte

1. _____
2. _____
3. _____
4. _____
5. _____
6. _____
7. _____
8. _____
9. _____
10. _____
11. _____
12. _____





Calcola l'angolo del cerchio rispetto a (0,0).

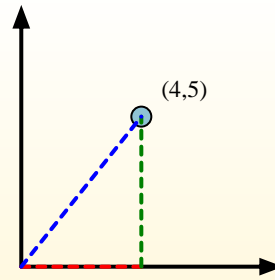
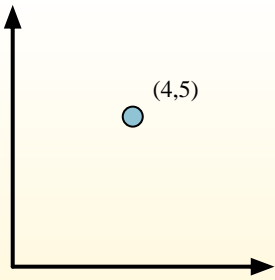
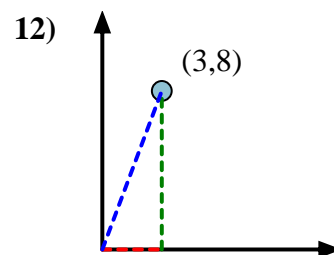
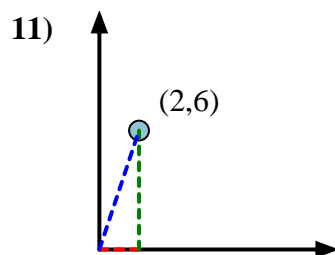
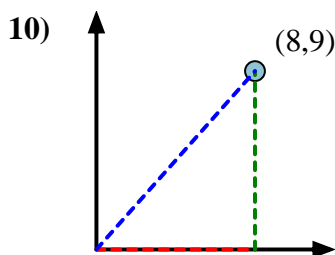
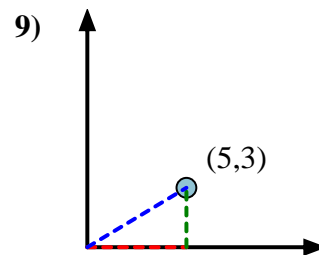
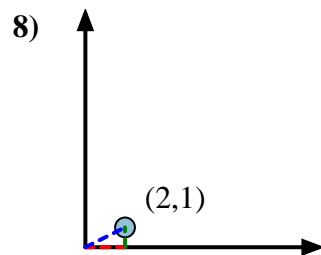
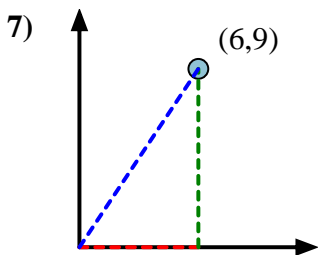
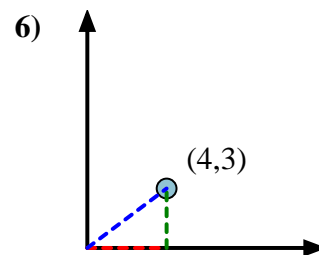
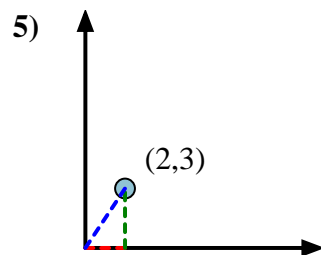
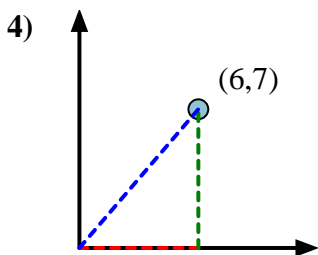
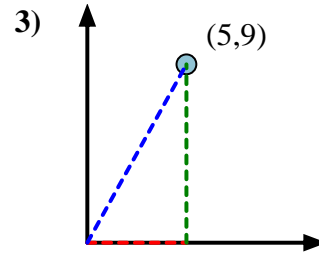
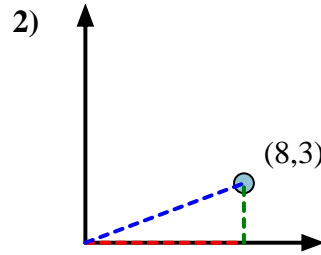
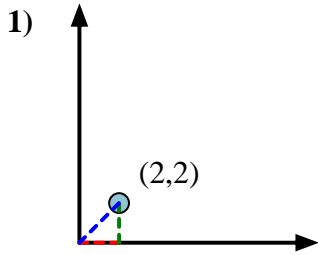
Primeramente encuentra la pendiente.

$$(y_2 - y_1) \div (x_2 - x_1) = m$$

$$(5 - 0) \div (4 - 0) = 1.25$$

Em seguida, encontre o arco da tangente (também conhecido como tangente inversa) da inclinação.

$$\arctan(1.25) = 51.34^\circ$$

**Risposte**1. 45,002. 20,563. 60,954. 49,405. 56,316. 36,877. 56,318. 26,579. 30,9610. 48,3711. 71,5712. 69,44



Calcola l'angolo del cerchio rispetto a (0,0).

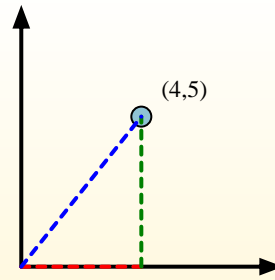
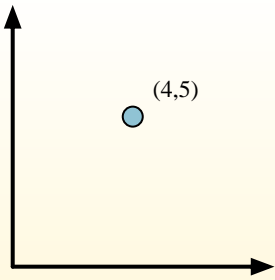
Primerò encuentra la pendiente.

$$(y_2 - y_1) \div (x_2 - x_1) = m$$

$$(5 - 0) \div (4 - 0) = 1.25$$

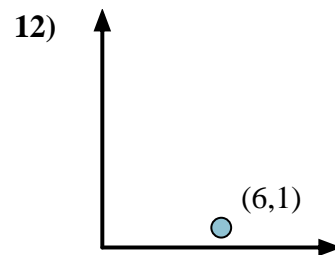
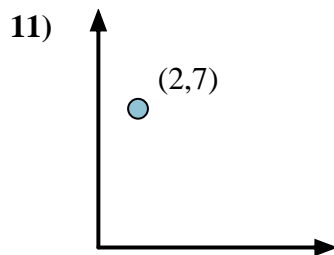
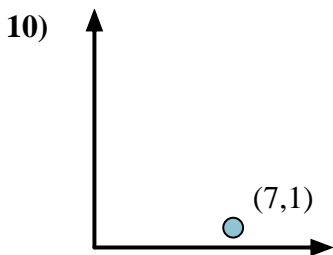
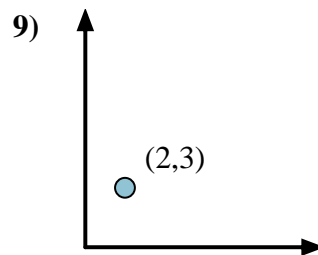
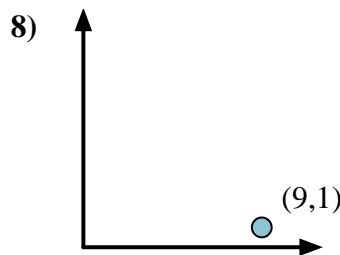
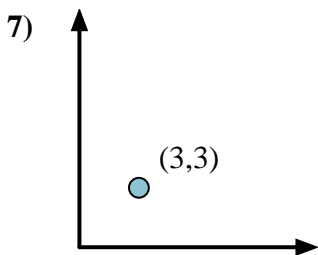
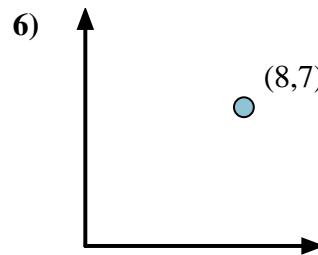
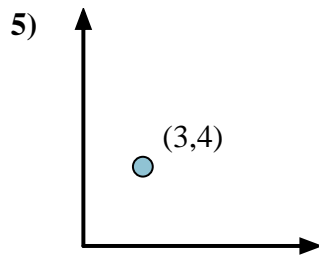
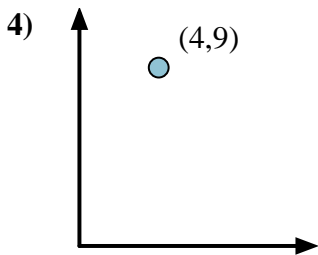
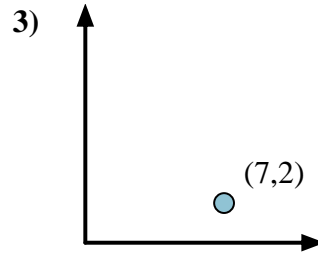
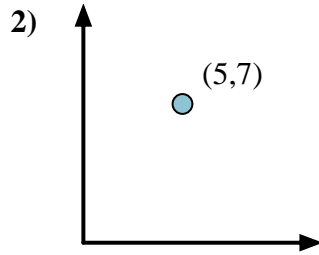
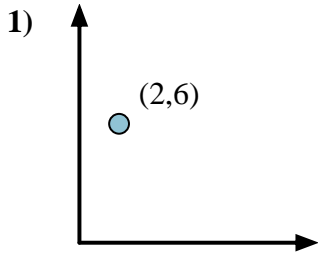
Em seguida, encontre o arco da tangente (também conhecido como tangente inversa) da inclinação.

$$\arctan(1.25) = 51.34^\circ$$



Risposte

1. _____
2. _____
3. _____
4. _____
5. _____
6. _____
7. _____
8. _____
9. _____
10. _____
11. _____
12. _____





Calcola l'angolo del cerchio rispetto a (0,0).

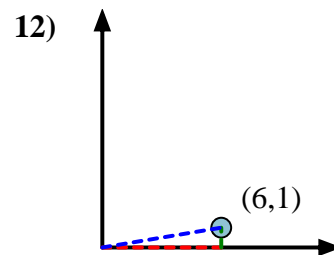
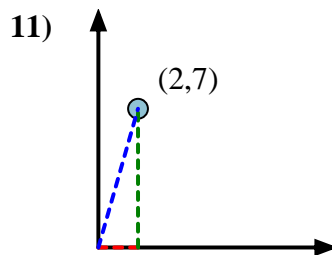
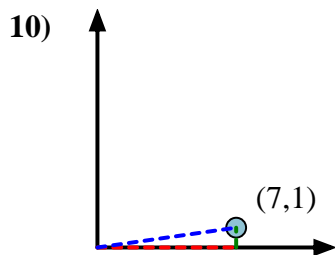
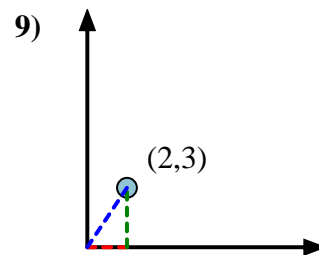
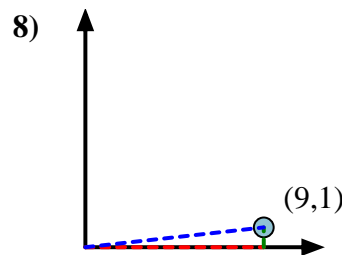
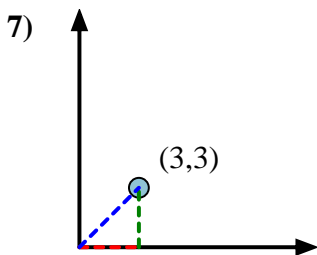
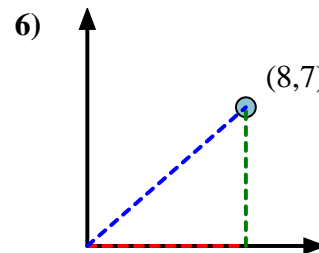
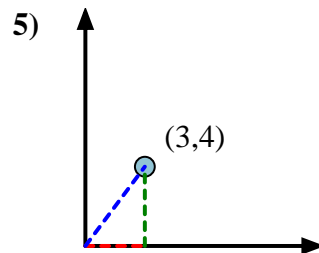
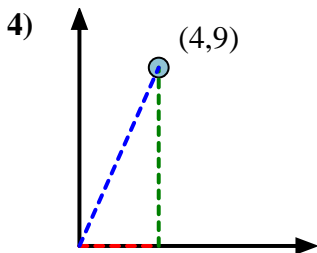
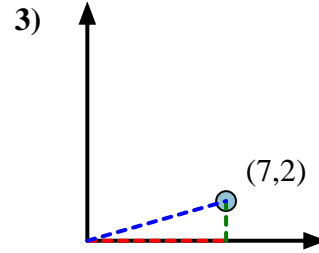
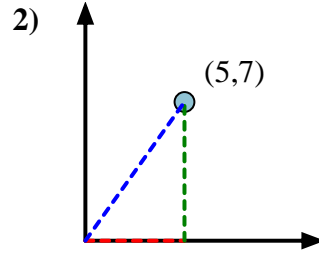
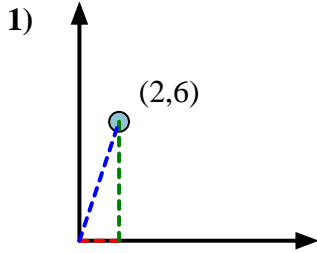
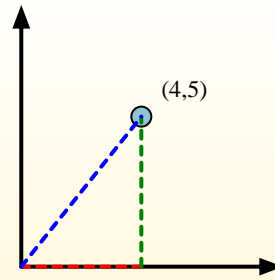
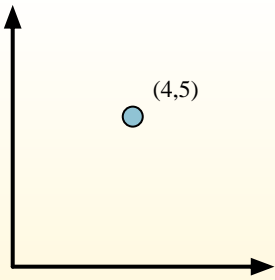
Primero encuentra la pendiente.

$$(y_2 - y_1) \div (x_2 - x_1) = m$$

$$(5 - 0) \div (4 - 0) = 1.25$$

Em seguida, encontre o arco da tangente (também conhecido como tangente inversa) da inclinação.

$$\arctan(1.25) = 51.34^\circ$$

**Risposte**1. **71,57**2. **54,46**3. **15,95**4. **66,04**5. **53,13**6. **41,19**7. **45,00**8. **6,34**9. **56,31**10. **8,13**11. **74,05**12. **9,46**



Calcola l'angolo del cerchio rispetto a (0,0).

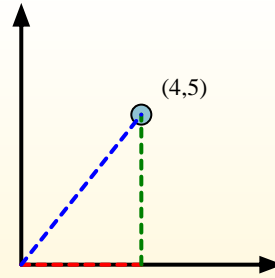
Primerò encuentra la pendiente.

$$(y_2 - y_1) \div (x_2 - x_1) = m$$

$$(5 - 0) \div (4 - 0) = 1.25$$

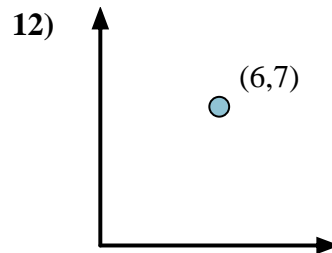
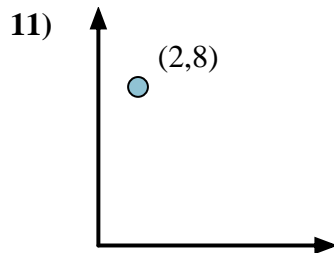
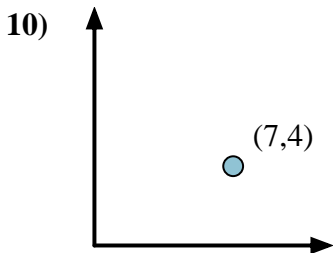
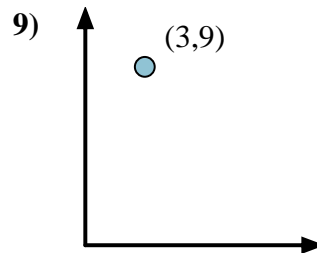
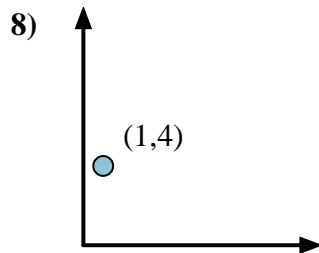
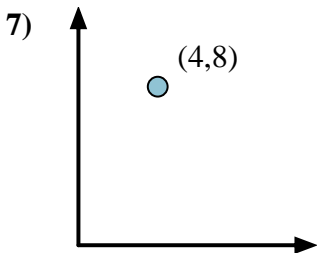
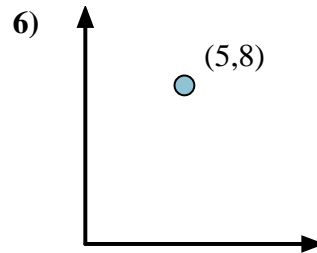
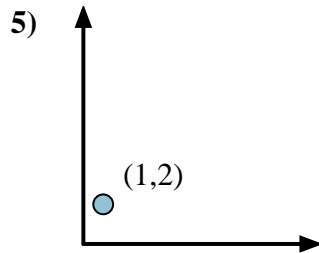
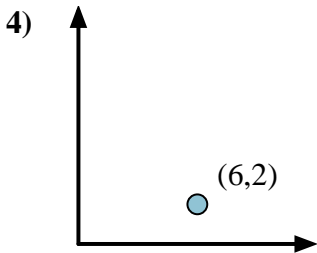
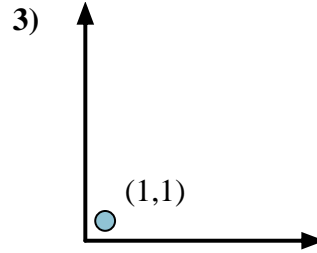
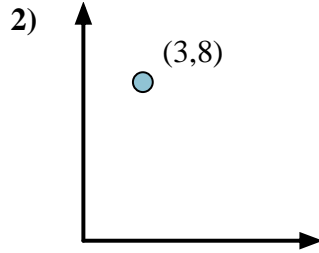
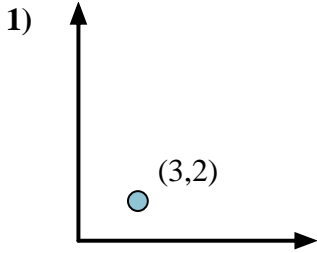
Em seguida, encontre o arco da tangente (também conhecido como tangente inversa) da inclinação.

$$\arctan(1.25) = 51.34^\circ$$



Risposte

1. _____
2. _____
3. _____
4. _____
5. _____
6. _____
7. _____
8. _____
9. _____
10. _____
11. _____
12. _____





Calcola l'angolo del cerchio rispetto a (0,0).

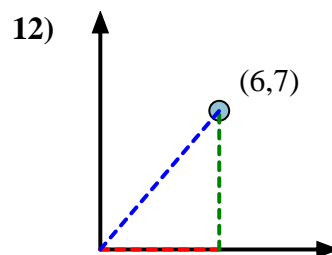
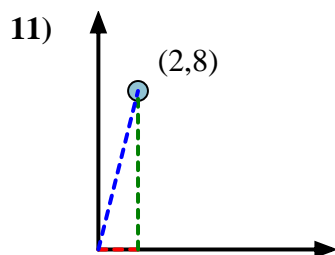
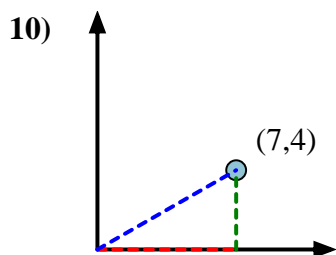
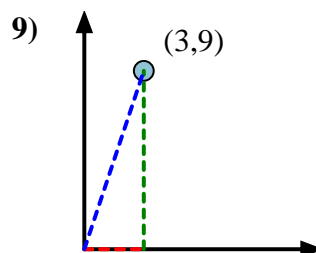
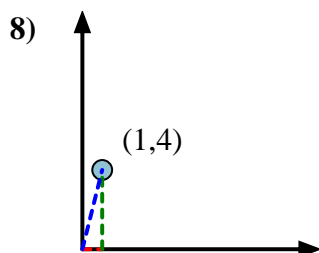
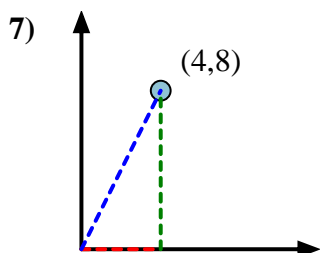
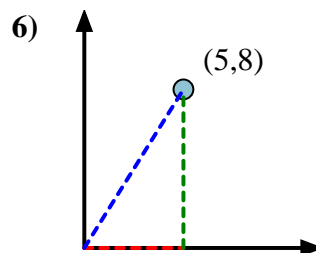
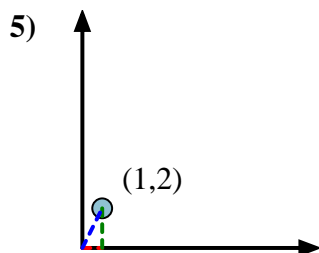
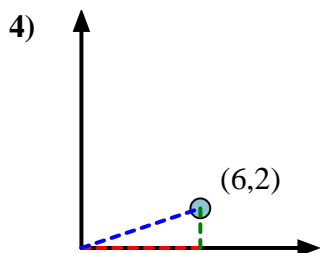
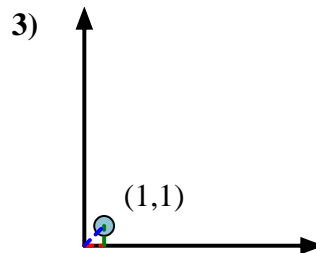
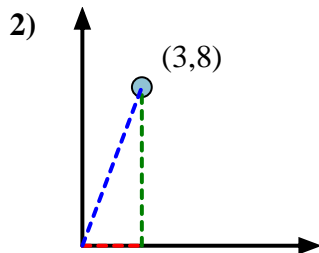
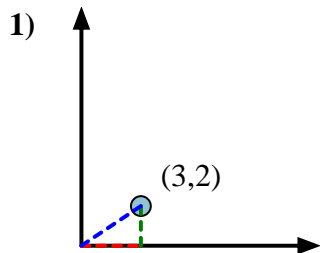
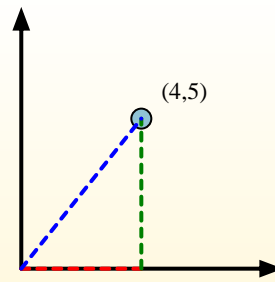
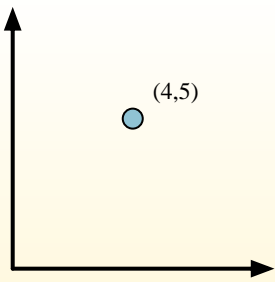
Primero encuentra la pendiente.

$$(y_2 - y_1) \div (x_2 - x_1) = m$$

$$(5 - 0) \div (4 - 0) = 1.25$$

Em seguida, encontre o arco da tangente (também conhecido como tangente inversa) da inclinação.

$$\arctan(1.25) = 51.34^\circ$$

**Risposte**1. **33,69**2. **69,44**3. **45,00**4. **18,43**5. **63,43**6. **57,99**7. **63,43**8. **75,96**9. **71,57**10. **29,74**11. **75,96**12. **49,40**



Calcola l'angolo del cerchio rispetto a (0,0).

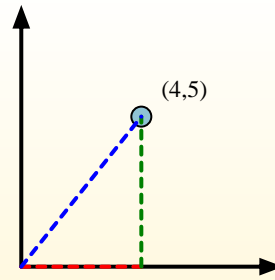
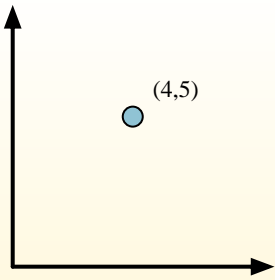
Primero encuentra la pendiente.

$$(y_2 - y_1) \div (x_2 - x_1) = m$$

$$(5 - 0) \div (4 - 0) = 1.25$$

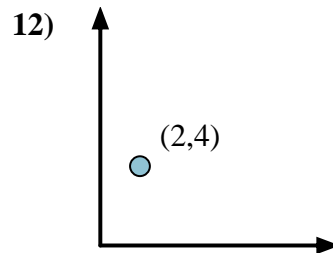
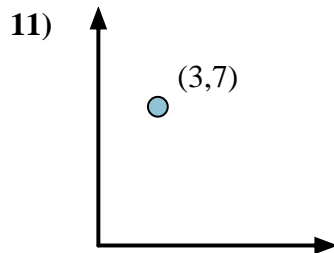
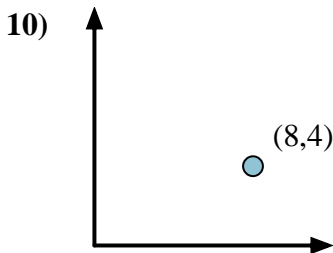
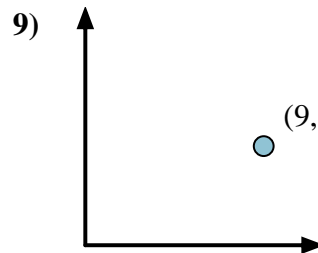
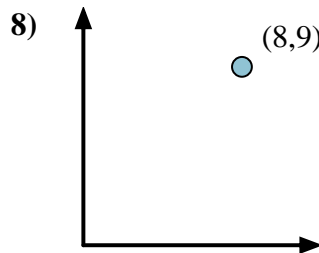
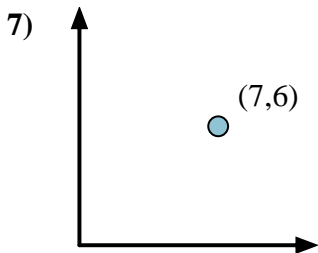
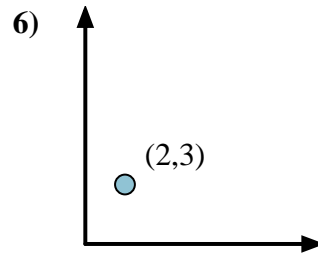
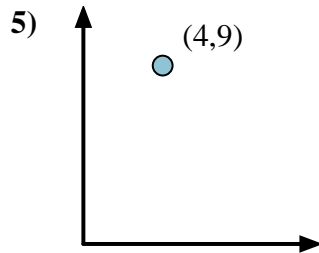
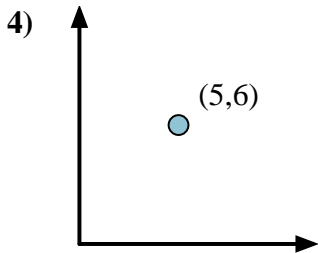
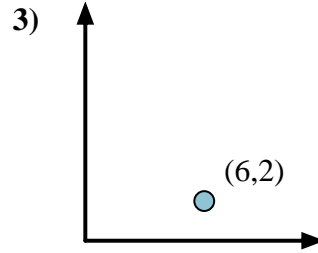
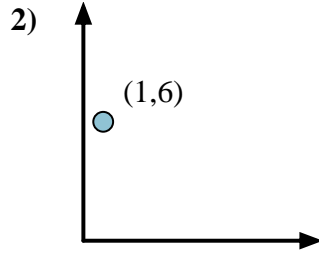
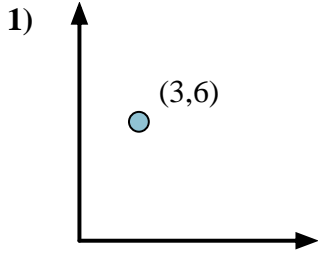
Em seguida, encontre o arco da tangente (também conhecido como tangente inversa) da inclinação.

$$\arctan(1.25) = 51.34^\circ$$



Risposte

1. _____
2. _____
3. _____
4. _____
5. _____
6. _____
7. _____
8. _____
9. _____
10. _____
11. _____
12. _____





Calcola l'angolo del cerchio rispetto a (0,0).

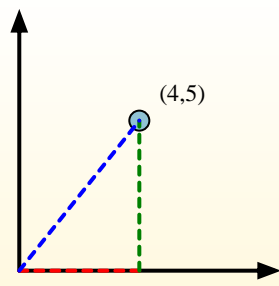
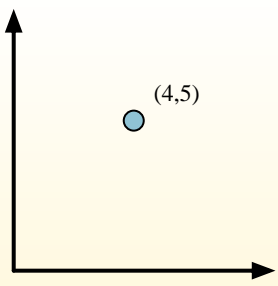
Primeramente encuentra la pendiente.

$$(y_2 - y_1) \div (x_2 - x_1) = m$$

$$(5 - 0) \div (4 - 0) = 1.25$$

Em seguida, encontre o arco da tangente (também conhecido como tangente inversa) da inclinação.

$$\arctan(1.25) = 51.34^\circ$$

**Risposte**1. 63,432. 80,543. 18,434. 50,195. 66,046. 56,317. 40,608. 48,379. 29,0510. 26,5711. 66,8012. 63,43