



Calcola l'angolo del cerchio rispetto a (0,0).

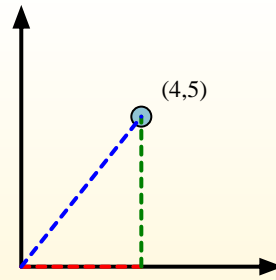
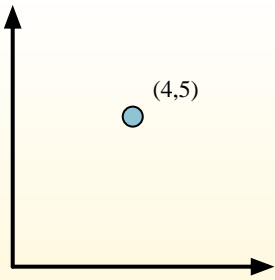
Primero encuentra la pendiente.

$$(y_2 - y_1) \div (x_2 - x_1) = m$$

$$(5 - 0) \div (4 - 0) = 1.25$$

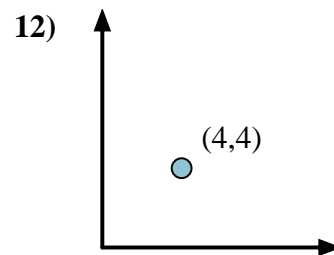
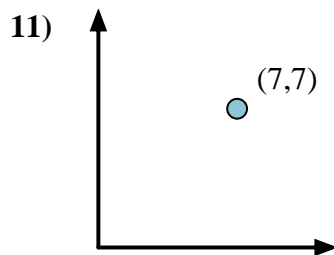
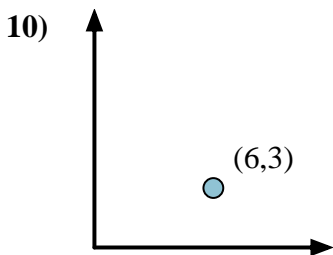
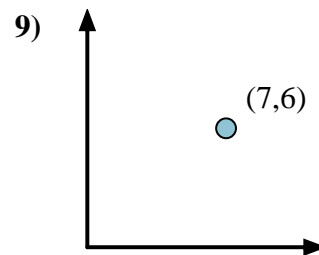
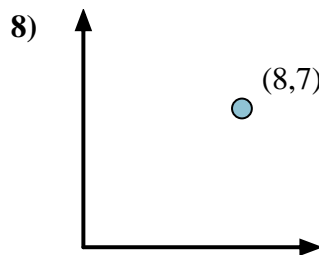
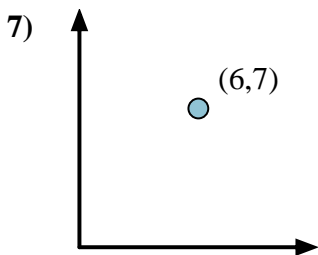
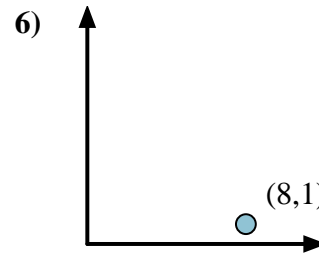
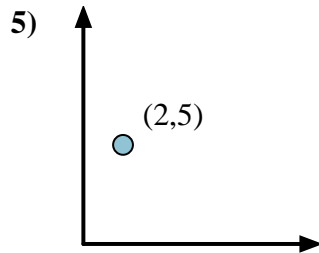
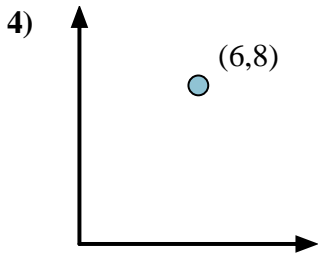
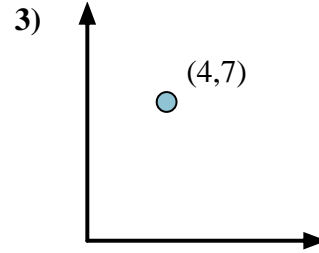
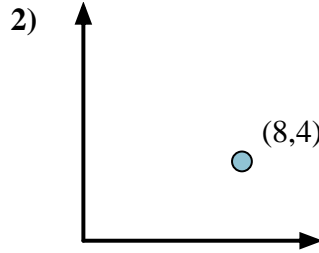
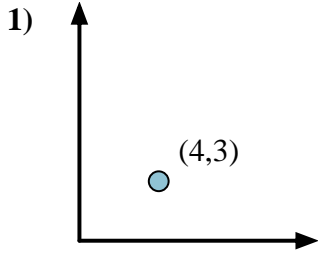
Em seguida, encontre o arco da tangente (também conhecido como tangente inversa) da inclinação.

$$\arctan(1.25) = 51.34^\circ$$



Risposte

1. _____
2. _____
3. _____
4. _____
5. _____
6. _____
7. _____
8. _____
9. _____
10. _____
11. _____
12. _____





Calcola l'angolo del cerchio rispetto a (0,0).

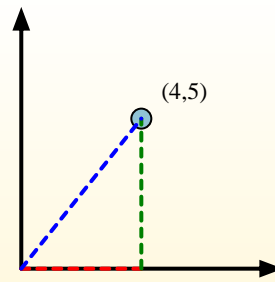
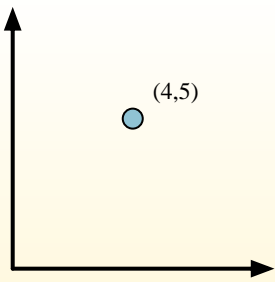
Primeramente encuentra la pendiente.

$$(y_2 - y_1) \div (x_2 - x_1) = m$$

$$(5 - 0) \div (4 - 0) = 1.25$$

Em seguida, encontre o arco da tangente (também conhecido como tangente inversa) da inclinação.

$$\arctan(1.25) = 51.34^\circ$$

**Risposte**1. **36,87**2. **26,57**3. **60,26**4. **53,13**5. **68,20**6. **7,13**7. **49,40**8. **41,19**9. **40,60**10. **26,57**11. **45,00**12. **45,00**