



Calcola l'angolo del cerchio rispetto a (0,0).

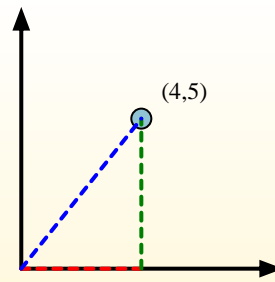
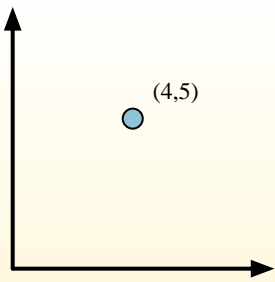
Primerò encuentra la pendiente.

$$(y_2 - y_1) \div (x_2 - x_1) = m$$

$$(5 - 0) \div (4 - 0) = 1.25$$

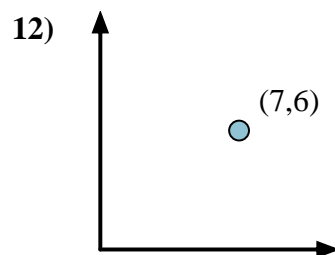
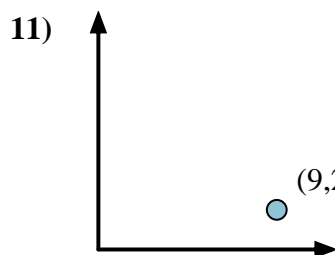
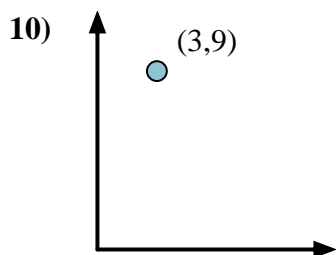
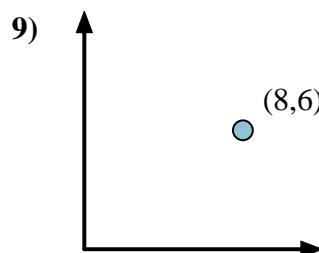
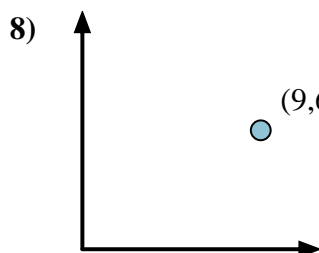
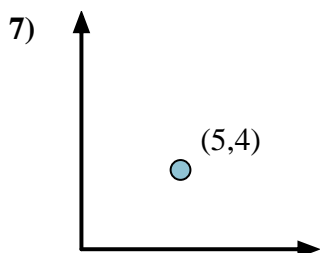
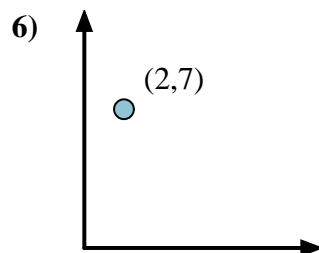
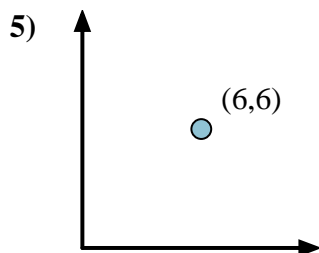
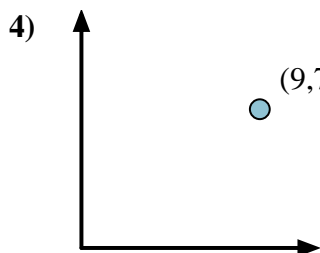
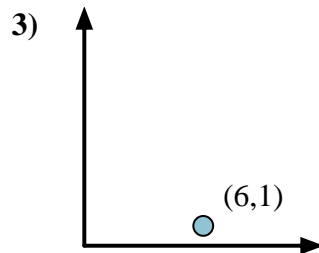
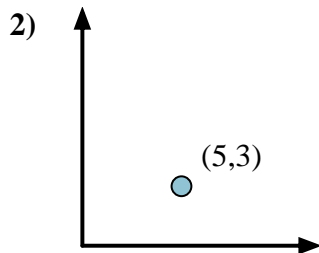
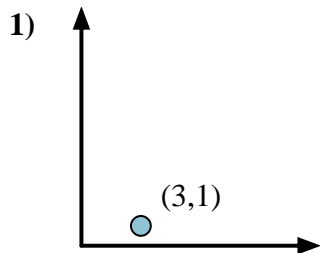
Em seguida, encontre o arco da tangente (também conhecido como tangente inversa) da inclinação.

$$\arctan(1.25) = 51.34^\circ$$



Risposte

1. _____
2. _____
3. _____
4. _____
5. _____
6. _____
7. _____
8. _____
9. _____
10. _____
11. _____
12. _____





Calcola l'angolo del cerchio rispetto a (0,0).

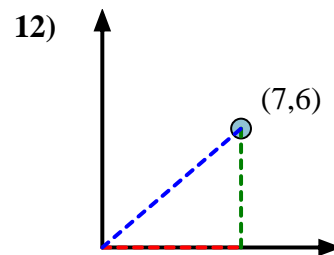
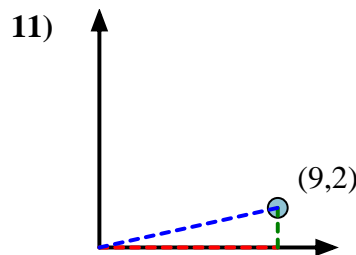
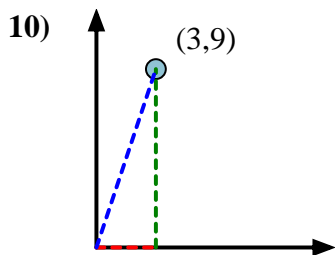
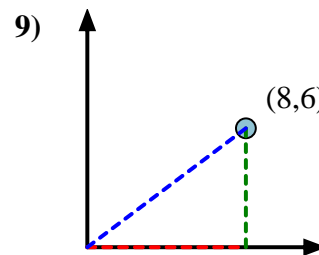
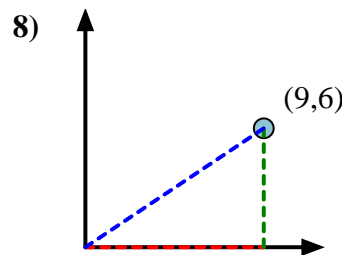
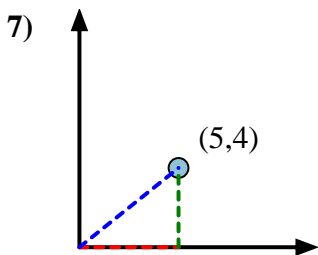
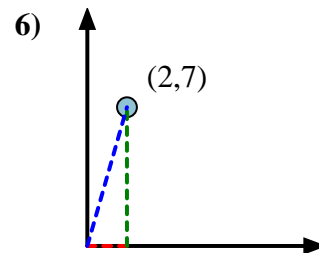
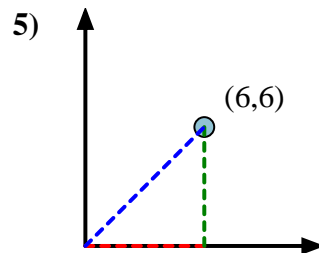
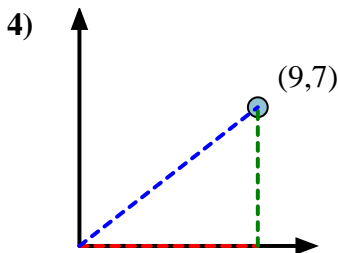
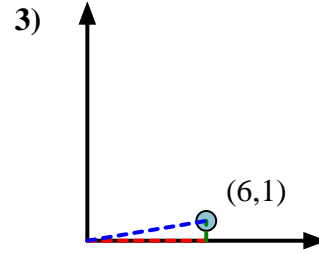
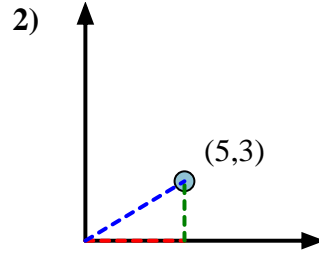
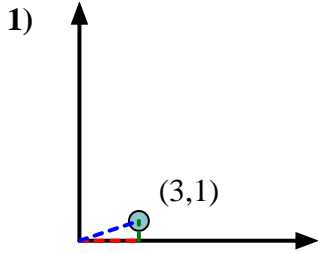
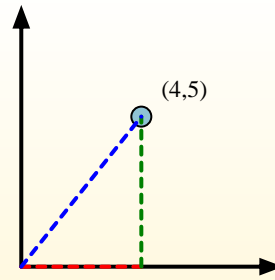
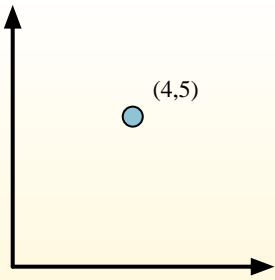
Primeramente encuentra la pendiente.

$$(y_2 - y_1) \div (x_2 - x_1) = m$$

$$(5 - 0) \div (4 - 0) = 1.25$$

Em seguida, encontre o arco da tangente (também conhecido como tangente inversa) da inclinação.

$$\arctan(1.25) = 51.34^\circ$$

**Risposte**1. **18,43**2. **30,96**3. **9,46**4. **37,87**5. **45,00**6. **74,05**7. **38,66**8. **33,69**9. **36,87**10. **71,57**11. **12,53**12. **40,60**