

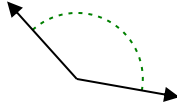


Determina se l'angolo mostrato è acuto, ottuso, retto, o piatto.

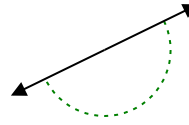
Es)



1)



2)



Risposte

Es. **acuto**

1. _____

2. _____

3. _____

4. _____

5. _____

6. _____

7. _____

8. _____

9. _____

10. _____

11. _____

12. _____

13. _____

14. _____

15. _____

16. _____

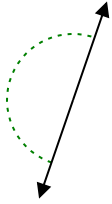
17. _____

18. _____

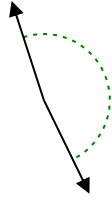
19. _____

20. _____

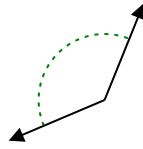
3)



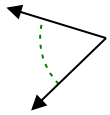
4)



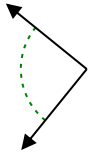
5)



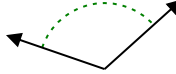
6)



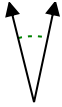
7)



8)



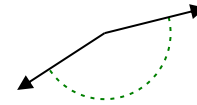
9)



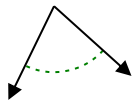
10)



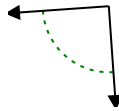
11)



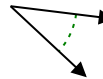
12)



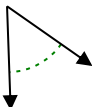
13)



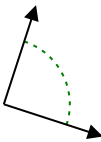
14)



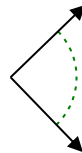
15)



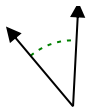
16)



17)



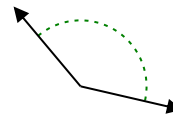
18)



19)



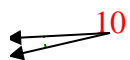
20)



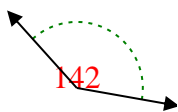


Determina se l'angolo mostrato è acuto, ottuso, retto, o piatto.

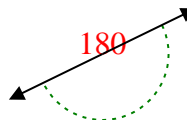
Es)



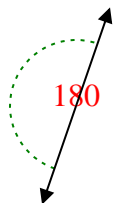
1)



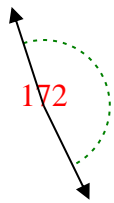
2)



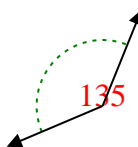
3)



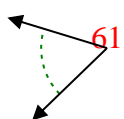
4)



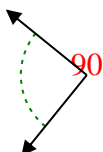
5)



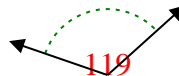
6)



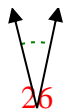
7)



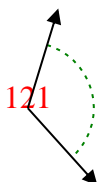
8)



9)



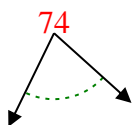
10)



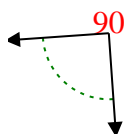
11)



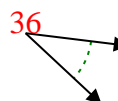
12)



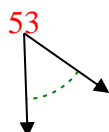
13)



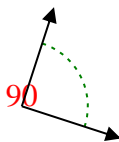
14)



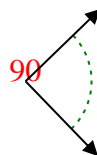
15)



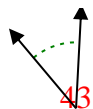
16)



17)



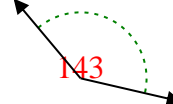
18)



19)



20)



Risposte

Es. acuto

1. ottuso

2. piatto

3. piatto

4. ottuso

5. ottuso

6. acuto

7. retto

8. ottuso

9. acuto

10. ottuso

11. ottuso

12. acuto

13. retto

14. acuto

15. acuto

16. retto

17. retto

18. acuto

19. retto

20. ottuso