



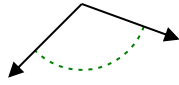
Determina se l'angolo mostrato è acuto, ottuso, retto, o piatto.

Risposte

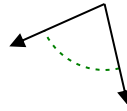
Es)



1)



2)

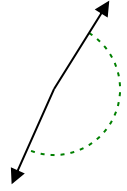


Es. **acuto**

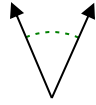
1. _____

2. _____

3)



4)



5)

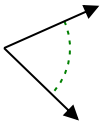


3. _____

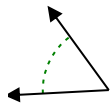
4. _____

5. _____

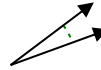
6)



7)



8)

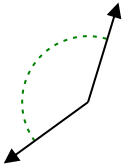


6. _____

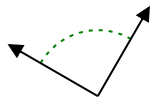
7. _____

8. _____

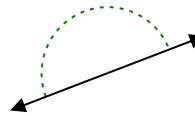
9)



10)



11)

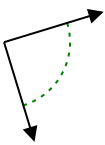


9. _____

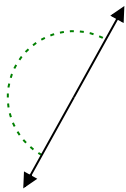
10. _____

11. _____

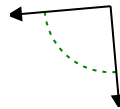
12)



13)



14)

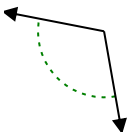


12. _____

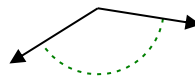
13. _____

14. _____

15)



16)



17)

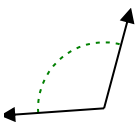


15. _____

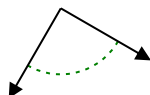
16. _____

17. _____

18)



19)



20)



18. _____

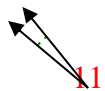
19. _____

20. _____

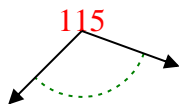


Determina se l'angolo mostrato è acuto, ottuso, retto, o piatto.

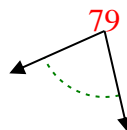
Es)



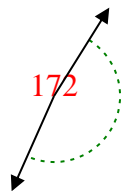
1)



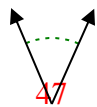
2)



3)



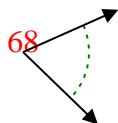
4)



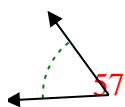
5)



6)



7)



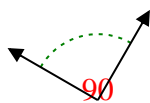
8)



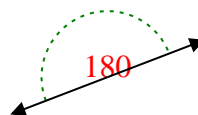
9)



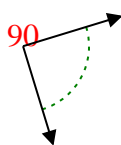
10)



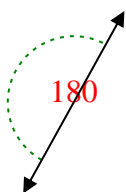
11)



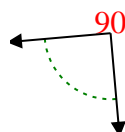
12)



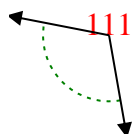
13)



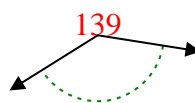
14)



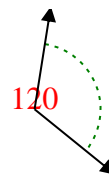
15)



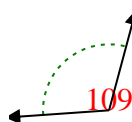
16)



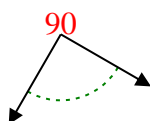
17)



18)



19)



20)



Risposte

Es. **acuto**

1. **ottuso**

2. **acuto**

3. **ottuso**

4. **acuto**

5. **acuto**

6. **acuto**

7. **acuto**

8. **acuto**

9. **ottuso**

10. **retto**

11. **piatto**

12. **retto**

13. **piatto**

14. **retto**

15. **ottuso**

16. **ottuso**

17. **ottuso**

18. **ottuso**

19. **retto**

20. **ottuso**