



Determina se ogni angolo mostrato è 'minore', 'maggiore' o 'uguale' a 90°.

Risposte

Es)



1)



2)



Es. **minore**

1. _____

2. _____

3)



4)



5)



3. _____

4. _____

5. _____

6)



7)



8)



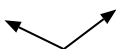
6. _____

7. _____

9)



10)



11)



8. _____

9. _____

10. _____

12)



13)



14)



11. _____

12. _____

13. _____

15)



16)



17)



14. _____

15. _____

16. _____

18)



19)



20)



17. _____



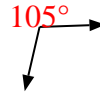



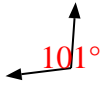

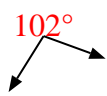

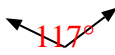










18. _____

19. _____

20. _____



Determina se ogni angolo mostrato è 'minore', 'maggiore' o 'uguale' a 90° .

Es) 	1) 	2) 
3) 	4) 	5) 
6) 	7) 	8) 
9) 	10) 	11) 
12) 	13) 	14) 
15) 	16) 	17) 
18) 	19) 	20) 

Risposte

- Es. minore
1. uguale
2. maggiore
3. minore
4. uguale
5. minore
6. maggiore
7. uguale
8. maggiore
9. minore
10. maggiore
11. uguale
12. maggiore
13. minore
14. minore
15. uguale
16. maggiore
17. maggiore
18. uguale
19. uguale
20. uguale