



Determina se ogni angolo mostrato è 'minore', 'maggiore' o 'uguale' a 90°.

Es)



1)



2)



Risposte

Es. minore

1. _____

2. _____

3. _____

4. _____

5. _____

6. _____

7. _____

8. _____

9. _____

10. _____

11. _____

12. _____

13. _____

14. _____

15. _____

16. _____

17. _____

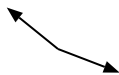
18. _____

19. _____

20. _____

20. _____

3)



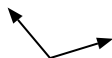
4)



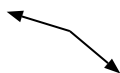
5)



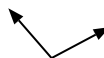
6)



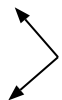
7)



8)



9)



10)



11)



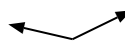
12)



13)



14)



15)



16)



17)



18)



19)



20)





Determina se ogni angolo mostrato è 'minore', 'maggiore' o 'uguale' a 90° .

Es)



1)



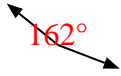
2)



Risposte

Es. minore

3)



4)



5)



1. minore

2. minore

3. maggiore

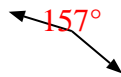
4. uguale

5. minore

6)



7)



8)

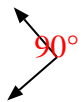


6. maggiore

7. maggiore

8. maggiore

9)



10)



11)

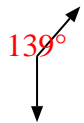


9. uguale

10. minore

11. minore

12)



13)



14)



12. maggiore

13. uguale

14. maggiore

15)



16)



17)



15. uguale

16. uguale

17. maggiore

18)



19)



20)



18. uguale

19. uguale

20. minore