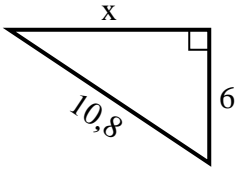




Trova il valore di X.

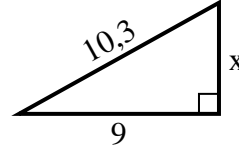
1) Perimetro = 25,8 u



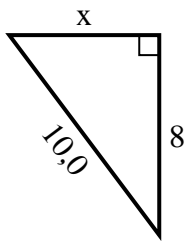
2) Perimetro = 19,5 u



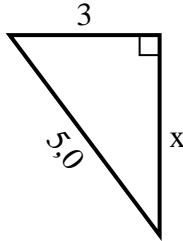
3) Perimetro = 24,3 u



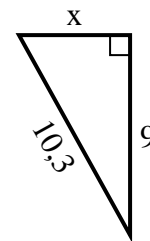
4) Perimetro = 24 u



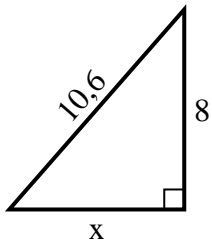
5) Perimetro = 12 u



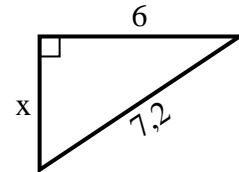
6) Perimetro = 24,3 u



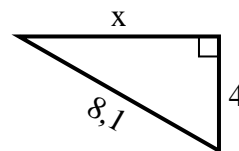
7) Perimetro = 25,6 u



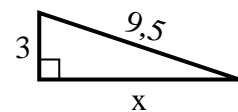
8) Perimetro = 17,2 u



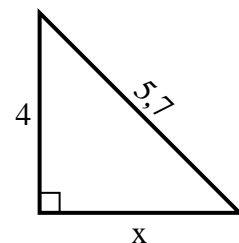
9) Perimetro = 19,1 u



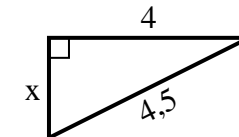
10) Perimetro = 21,5 u



11) Perimetro = 13,7 u



12) Perimetro = 10,5 u



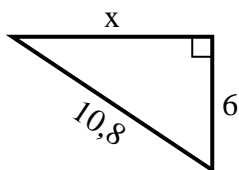
Risposte

1. _____
2. _____
3. _____
4. _____
5. _____
6. _____
7. _____
8. _____
9. _____
10. _____
11. _____
12. _____

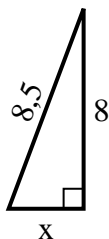


Trova il valore di X.

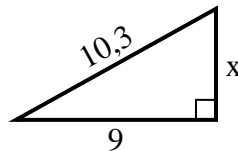
1) Perimetro = 25,8 u



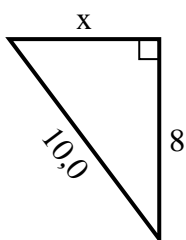
2) Perimetro = 19,5 u



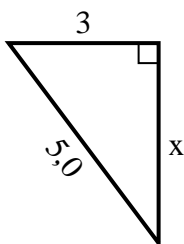
3) Perimetro = 24,3 u



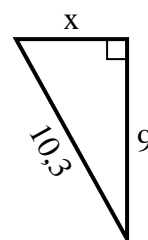
4) Perimetro = 24 u



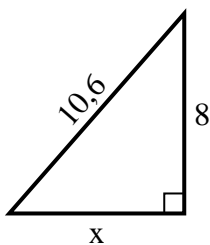
5) Perimetro = 12 u



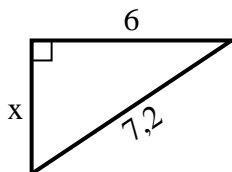
6) Perimetro = 24,3 u



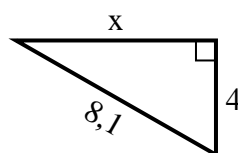
7) Perimetro = 25,6 u



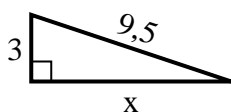
8) Perimetro = 17,2 u



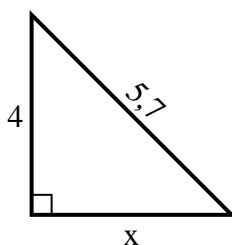
9) Perimetro = 19,1 u



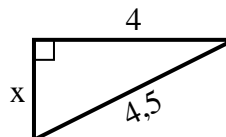
10) Perimetro = 21,5 u



11) Perimetro = 13,7 u



12) Perimetro = 10,5 u



Risposte

1. 9
2. 3
3. 5
4. 6
5. 4
6. 5
7. 7
8. 4
9. 7
10. 9
11. 4
12. 2