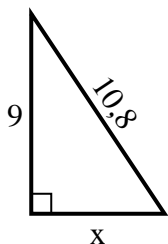


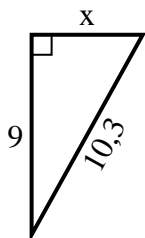


**Trova il valore di X.**

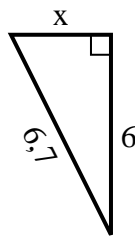
1) Perimetro = 25,8 u



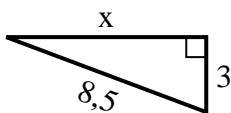
2) Perimetro = 24,3 u



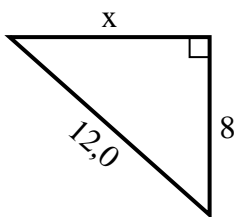
3) Perimetro = 15,7 u



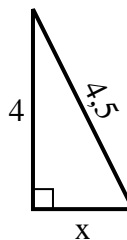
4) Perimetro = 19,5 u



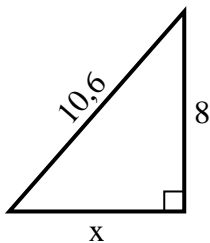
5) Perimetro = 29 u



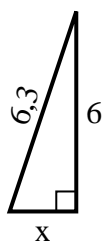
6) Perimetro = 10,5 u



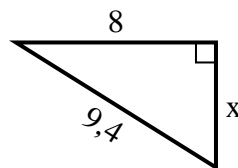
7) Perimetro = 25,6 u



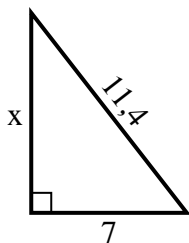
8) Perimetro = 14,3 u



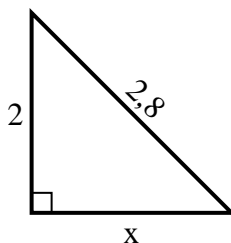
9) Perimetro = 22,4 u



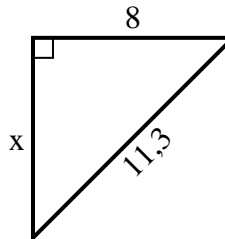
10) Perimetro = 27,4 u



11) Perimetro = 6,8 u



12) Perimetro = 27,3 u



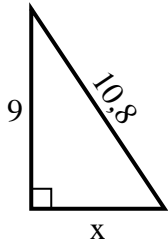
**Risposte**

1. \_\_\_\_\_
2. \_\_\_\_\_
3. \_\_\_\_\_
4. \_\_\_\_\_
5. \_\_\_\_\_
6. \_\_\_\_\_
7. \_\_\_\_\_
8. \_\_\_\_\_
9. \_\_\_\_\_
10. \_\_\_\_\_
11. \_\_\_\_\_
12. \_\_\_\_\_

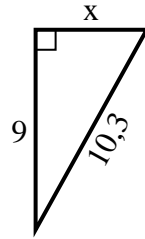


Trova il valore di X.

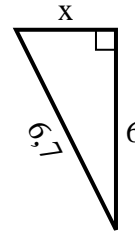
1) Perimetro = 25,8 u



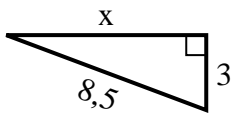
2) Perimetro = 24,3 u



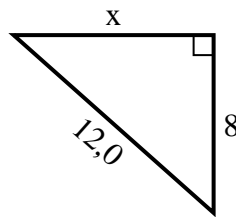
3) Perimetro = 15,7 u



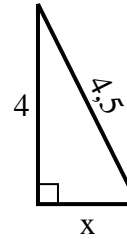
4) Perimetro = 19,5 u



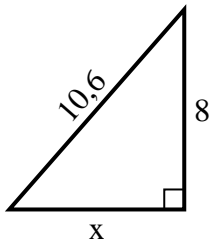
5) Perimetro = 29 u



6) Perimetro = 10,5 u



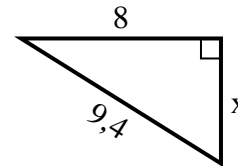
7) Perimetro = 25,6 u



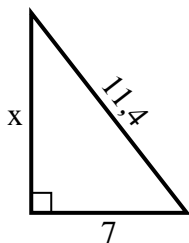
8) Perimetro = 14,3 u



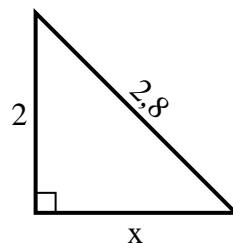
9) Perimetro = 22,4 u



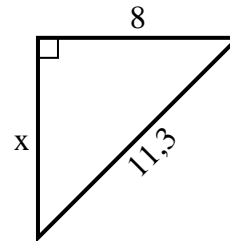
10) Perimetro = 27,4 u



11) Perimetro = 6,8 u



12) Perimetro = 27,3 u



**Risposte**

1. 6

2. 5

3. 3

4. 8

5. 9

6. 2

7. 7

8. 2

9. 5

10. 9

11. 2

12. 8