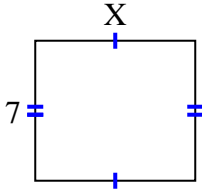


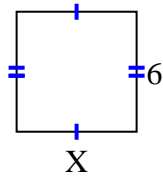


Trova il valore di X per ogni cifra. Ogni cifra è in centimetri (cm). Non in scala.

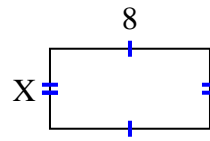
1) area = 56 cm^2



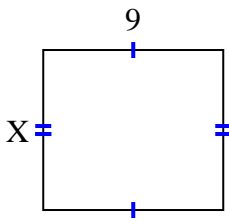
2) area = 36 cm^2



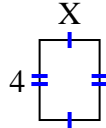
3) area = 32 cm^2



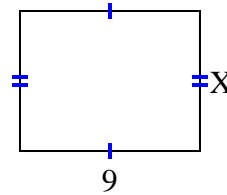
4) area = 72 cm^2



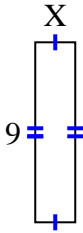
5) area = 12 cm^2



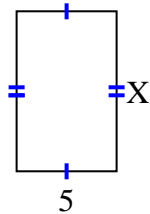
6) area = 63 cm^2



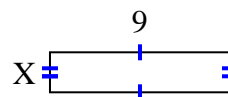
7) area = 18 cm^2



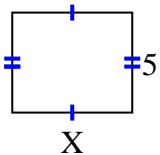
8) area = 40 cm^2



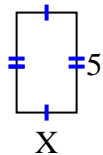
9) area = 18 cm^2



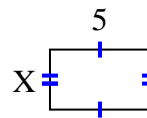
10) area = 30 cm^2



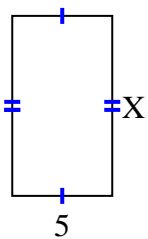
11) area = 15 cm^2



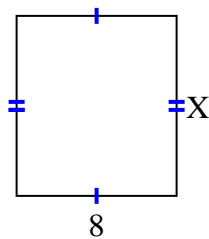
12) area = 15 cm^2



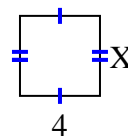
13) area = 45 cm^2



14) area = 72 cm^2



15) area = 16 cm^2



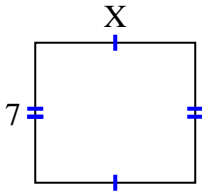
Risposte

1. _____
2. _____
3. _____
4. _____
5. _____
6. _____
7. _____
8. _____
9. _____
10. _____
11. _____
12. _____
13. _____
14. _____
15. _____

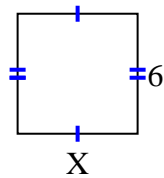


Trova il valore di X per ogni cifra. Ogni cifra è in centimetri (cm). Non in scala.

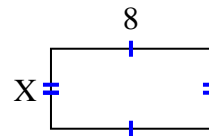
1) area = 56 cm^2



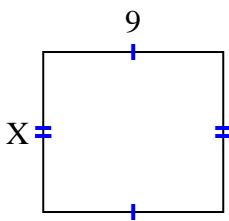
2) area = 36 cm^2



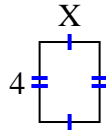
3) area = 32 cm^2



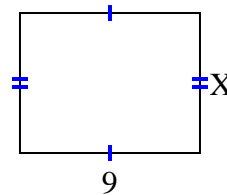
4) area = 72 cm^2



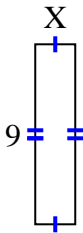
5) area = 12 cm^2



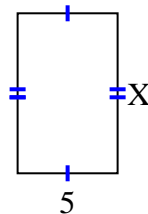
6) area = 63 cm^2



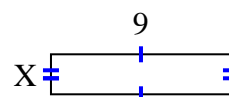
7) area = 18 cm^2



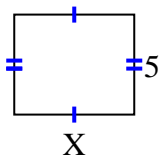
8) area = 40 cm^2



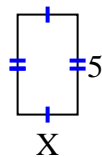
9) area = 18 cm^2



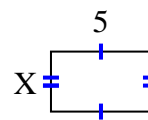
10) area = 30 cm^2



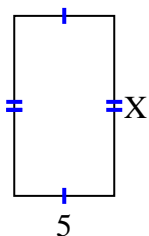
11) area = 15 cm^2



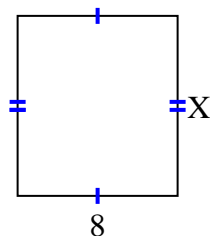
12) area = 15 cm^2



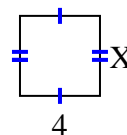
13) area = 45 cm^2



14) area = 72 cm^2



15) area = 16 cm^2



Risposte

1. 8

2. 6

3. 4

4. 8

5. 3

6. 7

7. 2

8. 8

9. 2

10. 6

11. 3

12. 3

13. 9

14. 9

15. 4