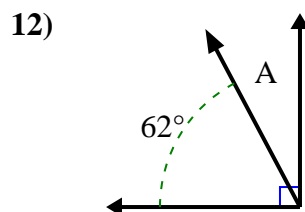
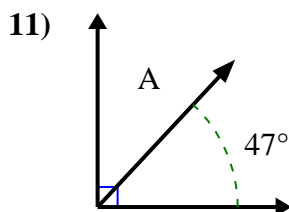
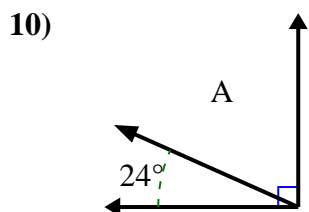
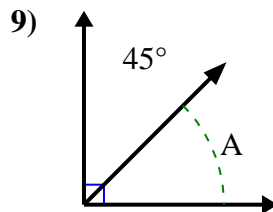
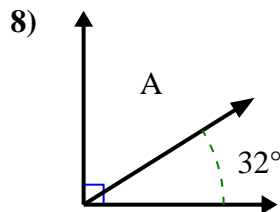
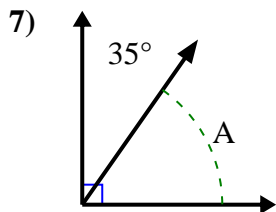
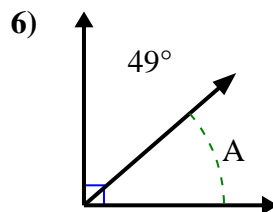
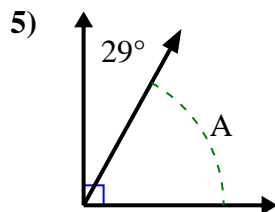
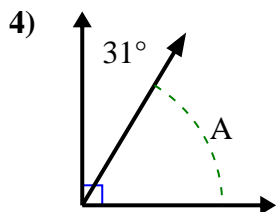
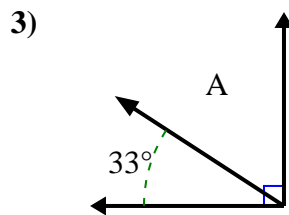
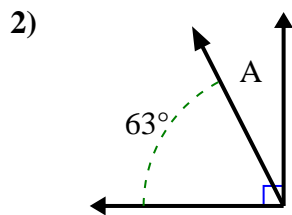
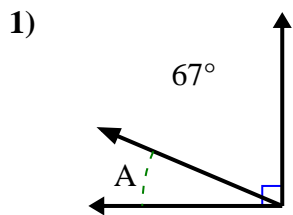




Trova il valore di 'A' nell'insieme degli angoli complementari.

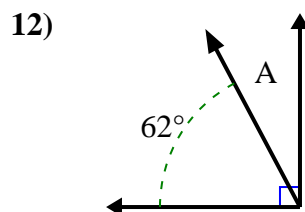
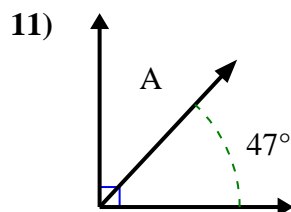
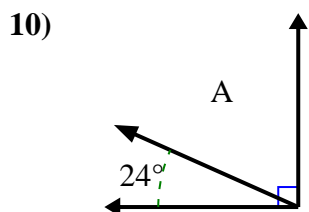
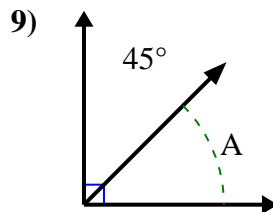
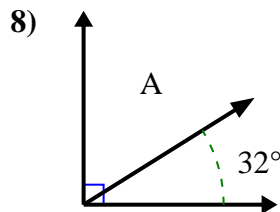
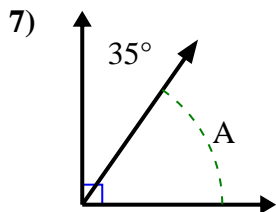
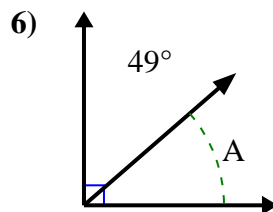
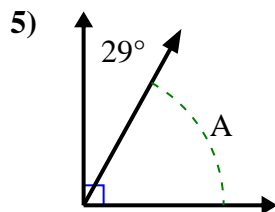
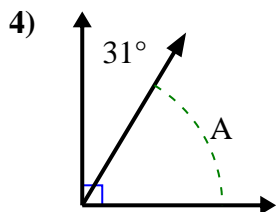
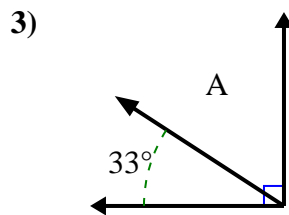
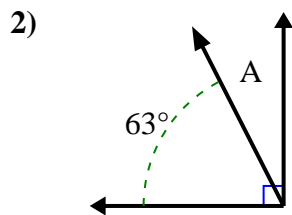
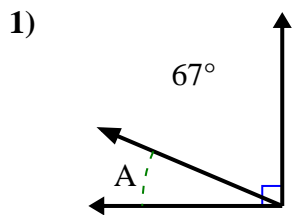
**Risposte**



1. \_\_\_\_\_
2. \_\_\_\_\_
3. \_\_\_\_\_
4. \_\_\_\_\_
5. \_\_\_\_\_
6. \_\_\_\_\_
7. \_\_\_\_\_
8. \_\_\_\_\_
9. \_\_\_\_\_
10. \_\_\_\_\_
11. \_\_\_\_\_
12. \_\_\_\_\_



Trova il valore di 'A' nell'insieme degli angoli complementari.



**Risposte**

1. 23°

2. 27°

3. 57°

4. 59°

5. 61°

6. 41°

7. 55°

8. 58°

9. 45°

10. 66°

11. 43°

12. 28°