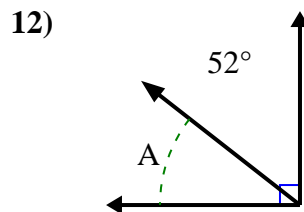
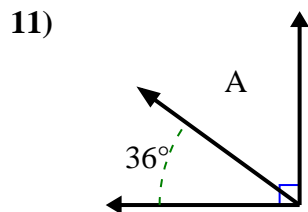
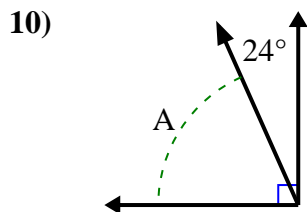
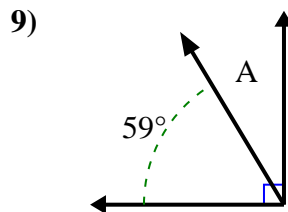
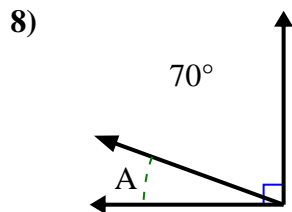
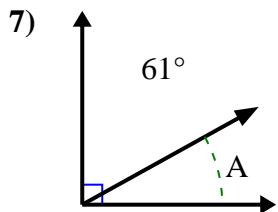
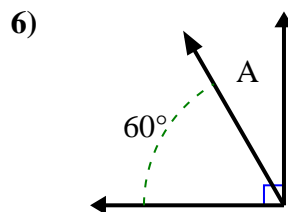
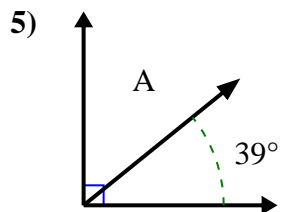
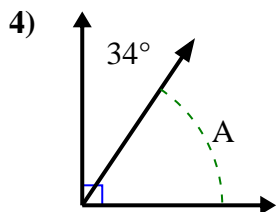
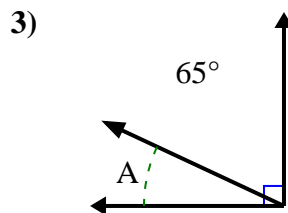
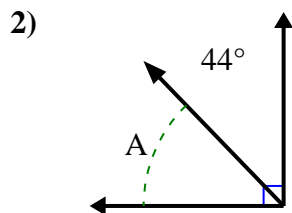
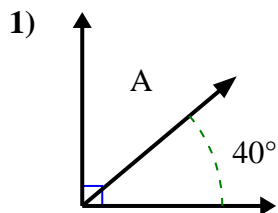




Trova il valore di 'A' nell'insieme degli angoli complementari.

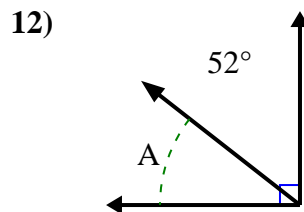
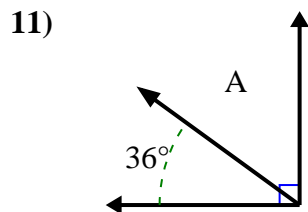
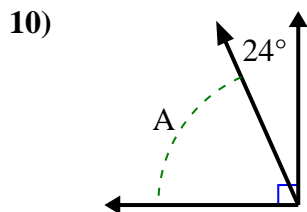
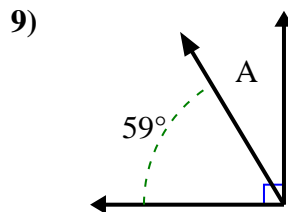
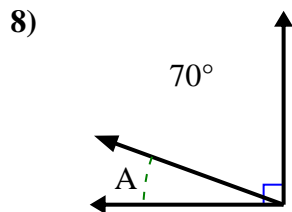
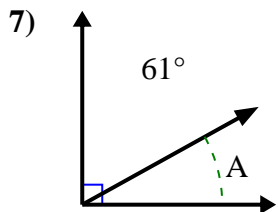
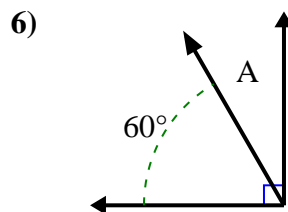
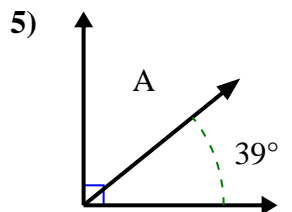
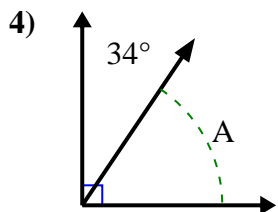
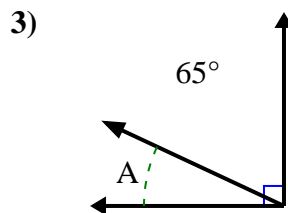
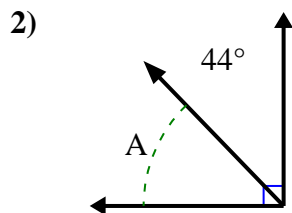
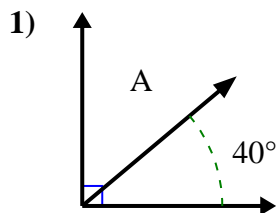
**Risposte**



1. \_\_\_\_\_
2. \_\_\_\_\_
3. \_\_\_\_\_
4. \_\_\_\_\_
5. \_\_\_\_\_
6. \_\_\_\_\_
7. \_\_\_\_\_
8. \_\_\_\_\_
9. \_\_\_\_\_
10. \_\_\_\_\_
11. \_\_\_\_\_
12. \_\_\_\_\_



Trova il valore di 'A' nell'insieme degli angoli complementari.



**Risposte**

1. 50°

2. 46°

3. 25°

4. 56°

5. 51°

6. 30°

7. 29°

8. 20°

9. 31°

10. 66°

11. 54°

12. 38°