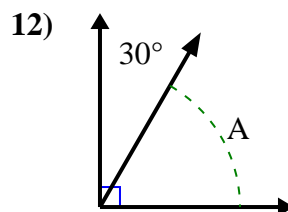
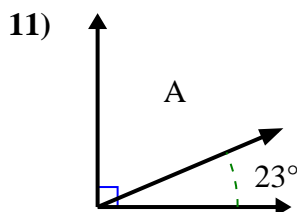
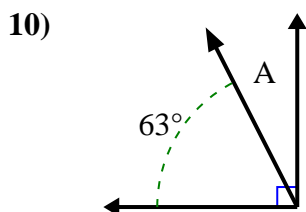
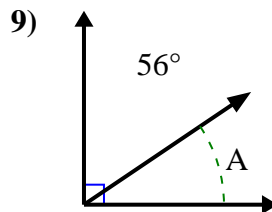
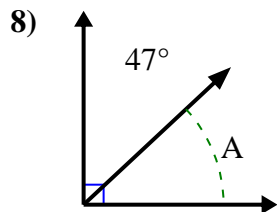
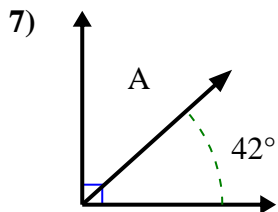
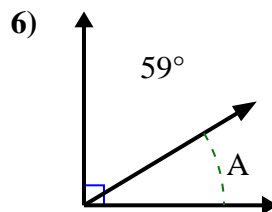
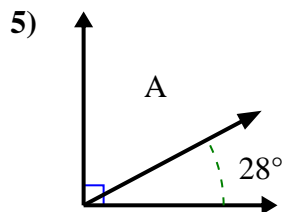
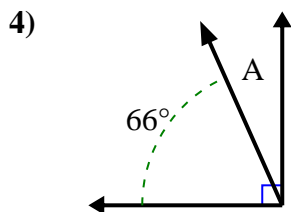
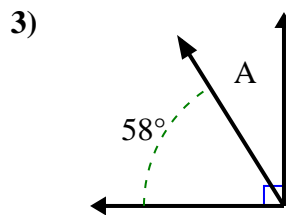
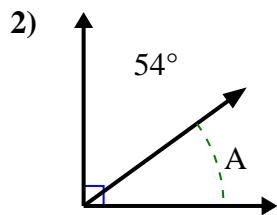
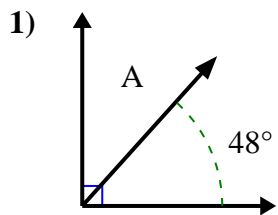




Trova il valore di 'A' nell'insieme degli angoli complementari.

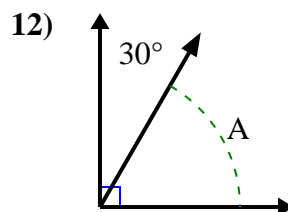
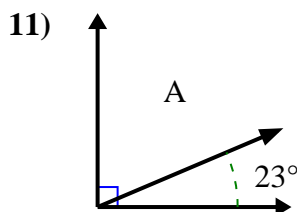
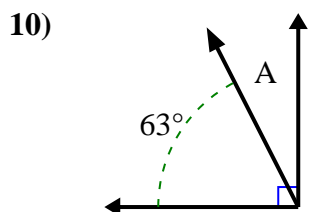
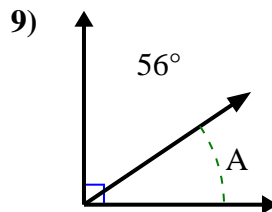
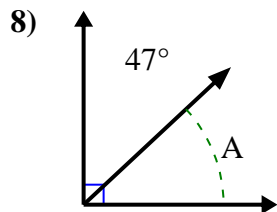
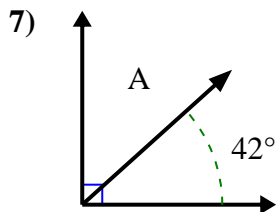
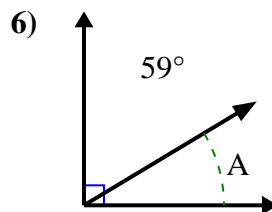
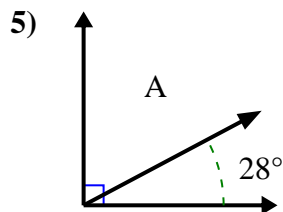
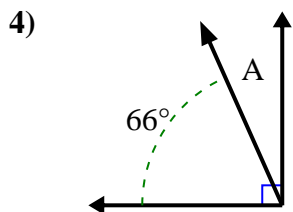
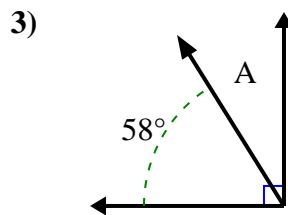
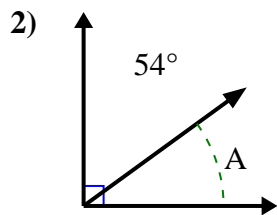
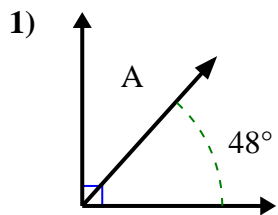
**Risposte**



1. \_\_\_\_\_
2. \_\_\_\_\_
3. \_\_\_\_\_
4. \_\_\_\_\_
5. \_\_\_\_\_
6. \_\_\_\_\_
7. \_\_\_\_\_
8. \_\_\_\_\_
9. \_\_\_\_\_
10. \_\_\_\_\_
11. \_\_\_\_\_
12. \_\_\_\_\_



Trova il valore di 'A' nell'insieme degli angoli complementari.



**Risposte**

1. 42°

2. 36°

3. 32°

4. 24°

5. 62°

6. 31°

7. 48°

8. 43°

9. 34°

10. 27°

11. 67°

12. 60°