
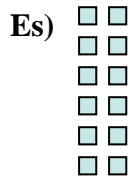




Scrivi ogni blocco sotto forma di moltiplicazione e calcola il risultato.



Risposte

Es. 6 x 2 = 12

1. _____

2. _____

3. _____

4. _____

5. _____

6. _____

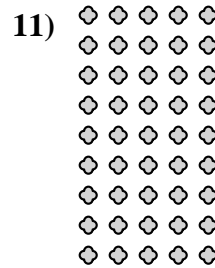
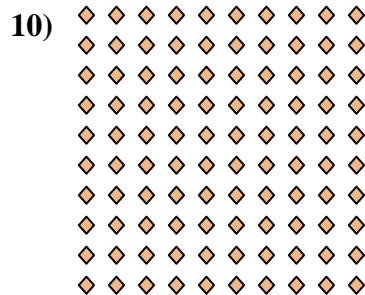


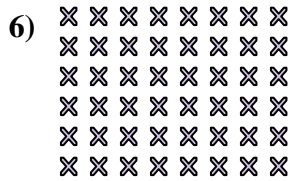


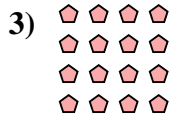
7. _____

8. _____

9. _____


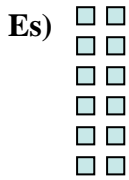
10. _____

11. _____





Scrivi ogni blocco sotto forma di moltiplicazione e calcola il risultato.



Risposte

Es. 6 × 2 = 12

1. 3 × 6 = 18

2. 7 × 2 = 14

3. 4 × 4 = 16

4. 7 × 5 = 35

5. 8 × 5 = 40

6. 6 × 8 = 48

7. 2 × 9 = 18

8. 7 × 8 = 56

9. 3 × 7 = 21

10. 10 × 10 = 100

11. 9 × 5 = 45

