


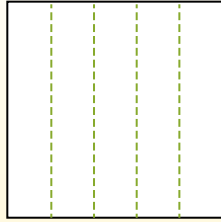


Dividi i rettangoli come descritto e poi conta per trovare il numero delle divisioni.

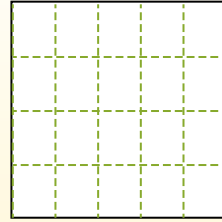
Le righe vanno da destra a sinistra.



Le colonne vanno dall'alto in basso.




Questo ha 4 righe e 5 colonne. E' stato diviso in 20 quadrati in tutto.




Risposte

- 1. _____
- 2. _____
- 3. _____
- 4. _____
- 5. _____
- 6. _____
- 7. _____
- 8. _____
- 9. _____


1) 3 righe
5 colonne




2) 2 righe
2 colonne




3) 4 righe
3 colonne



4) 2 righe
4 colonne




5) 5 righe
2 colonne




6) 3 righe
4 colonne



7) 3 righe
2 colonne



8) 3 righe
3 colonne



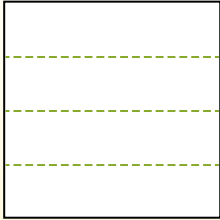
9) 5 righe
5 colonne



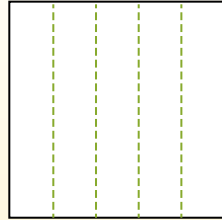


Dividi i rettangoli come descritto e poi conta per trovare il numero delle divisioni.

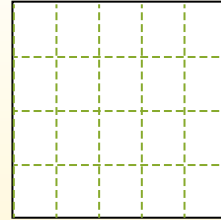
Le righe vanno da destra a sinistra.



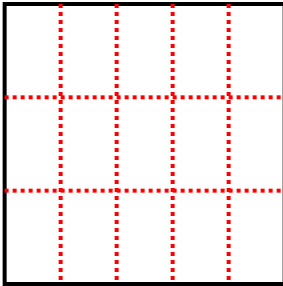
Le colonne vanno dall'alto in basso.



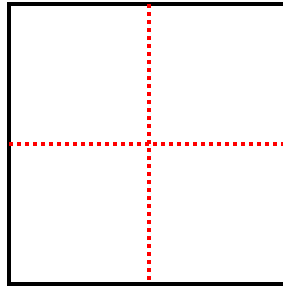
Questo ha 4 righe e 5 colonne.
E' stato diviso in 20 quadrati in tutto.



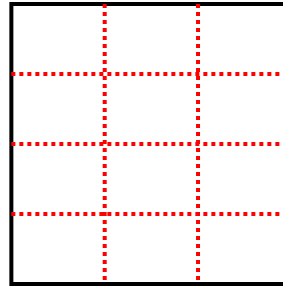
1) 3 righe
5 colonne



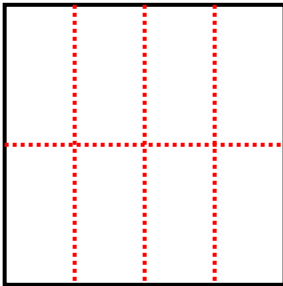
2) 2 righe
2 colonne



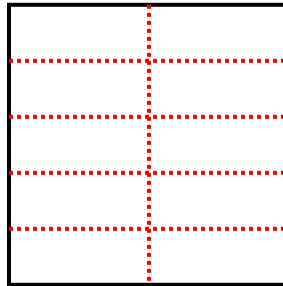
3) 4 righe
3 colonne



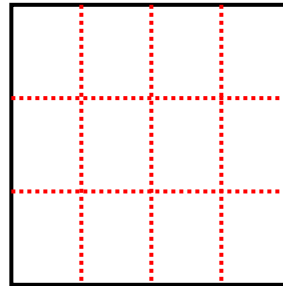
4) 2 righe
4 colonne



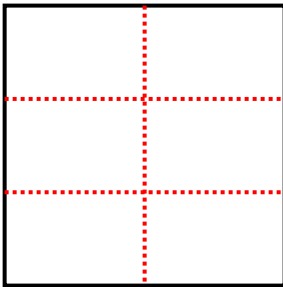
5) 5 righe
2 colonne



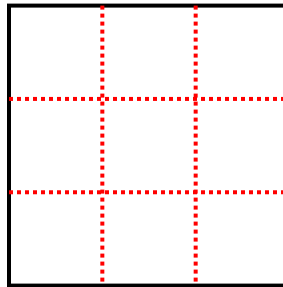
6) 3 righe
4 colonne



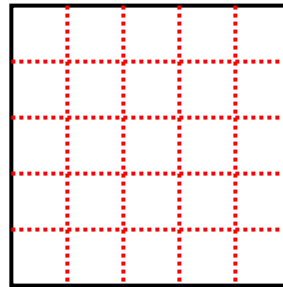
7) 3 righe
2 colonne



8) 3 righe
3 colonne



9) 5 righe
5 colonne



Risposte

1. 15

2. 4

3. 12

4. 8

5. 10

6. 12

7. 6

8. 9

9. 25