





Usa le griglie per risolvere ogni operazione.

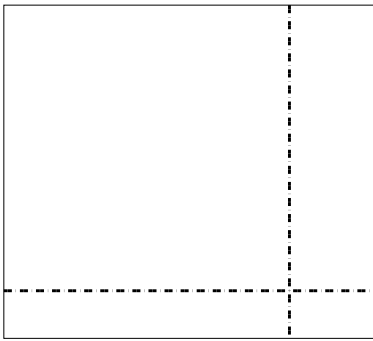
1) $48 \times 39 =$




2) $38 \times 23 =$




3) $35 \times 39 =$




4) $33 \times 13 =$



5) $32 \times 27 =$



6) $35 \times 13 =$



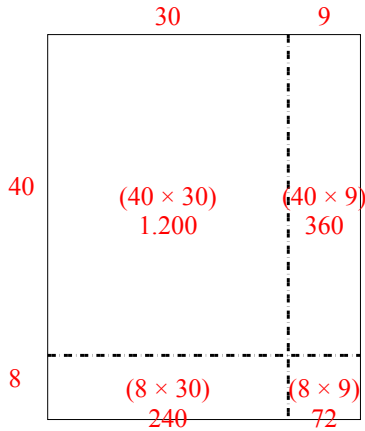
Risposte

- 1. _____
- 2. _____
- 3. _____
- 4. _____
- 5. _____
- 6. _____

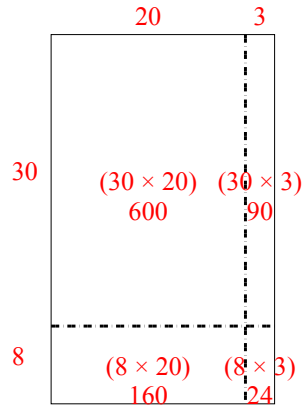


Usa le griglie per risolvere ogni operazione.

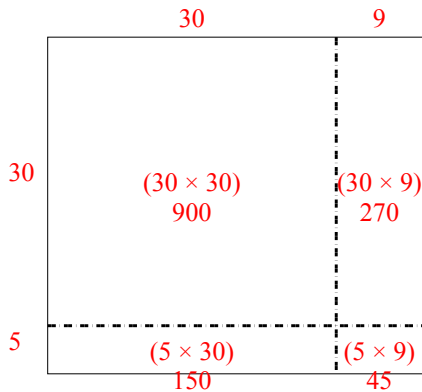
1) $48 \times 39 =$



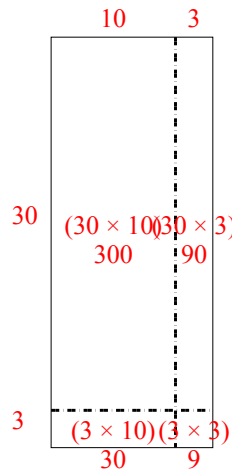
2) $38 \times 23 =$



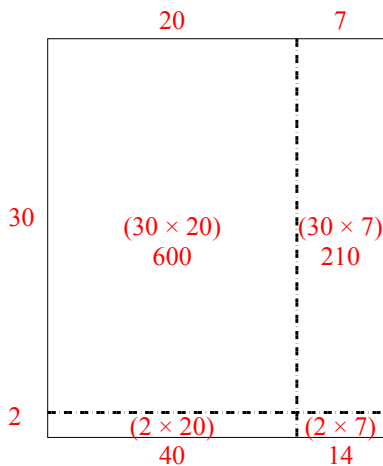
3) $35 \times 39 =$



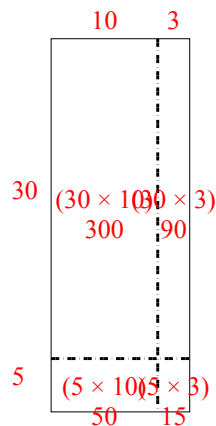
4) $33 \times 13 =$



5) $32 \times 27 =$



6) $35 \times 13 =$



Risposte

1. 1.872
2. 874
3. 1.365
4. 429
5. 864
6. 455