



Usa le griglie fornite per risolvere ogni operazione.

1) $21 \times 20 =$

2) $26 \times 20 =$

3) $29 \times 20 =$

4) $25 \times 20 =$

5) $28 \times 20 =$

6) $27 \times 20 =$

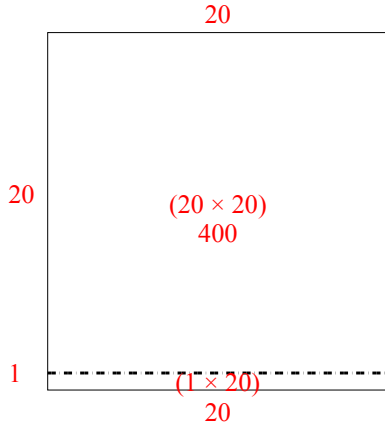
Risposte

- 1. _____
- 2. _____
- 3. _____
- 4. _____
- 5. _____
- 6. _____

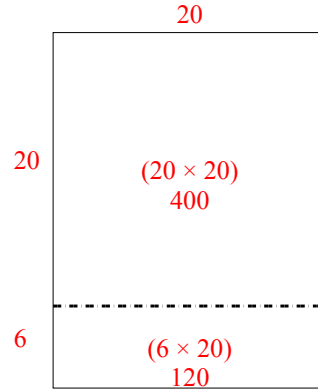


Usa le griglie fornite per risolvere ogni operazione.

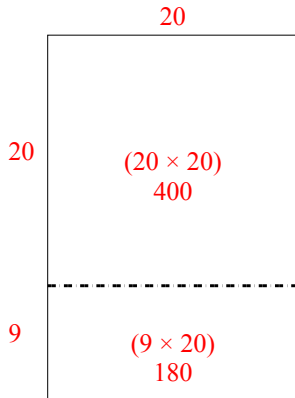
1) $21 \times 20 =$



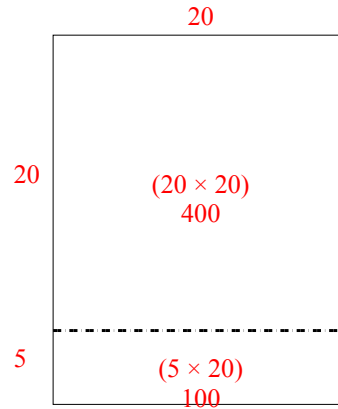
2) $26 \times 20 =$



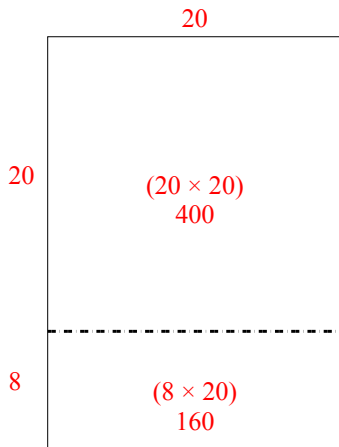
3) $29 \times 20 =$



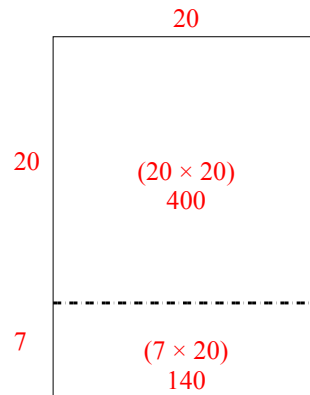
4) $25 \times 20 =$



5) $28 \times 20 =$



6) $27 \times 20 =$



Risposte

1. 420
2. 520
3. 580
4. 500
5. 560
6. 540