





Usa le griglie fornite per calcolare i risultati.

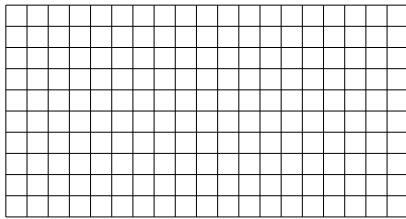
1) $11 \times 10 =$




2) $15 \times 10 =$




3) $10 \times 19 =$




4) $19 \times 10 =$



5) $18 \times 10 =$



6) $16 \times 10 =$



Risposte

1. _____

2. _____

3. _____

4. _____

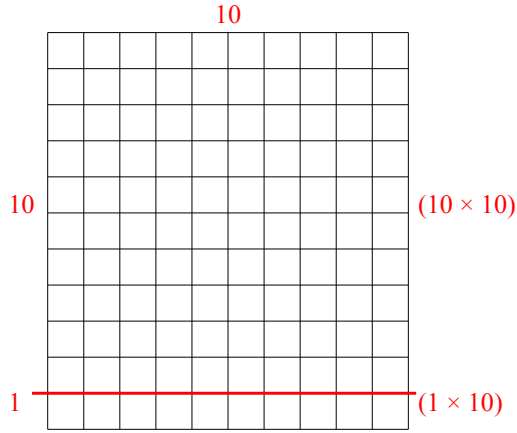
5. _____

6. _____

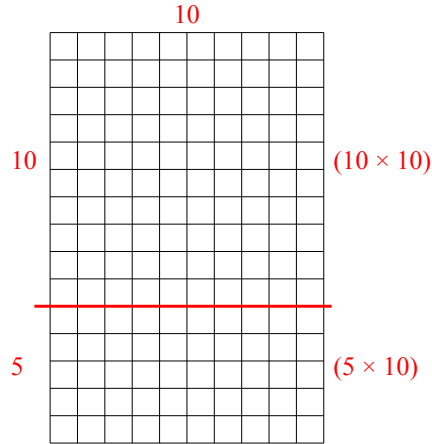


Usa le griglie fornite per calcolare i risultati.

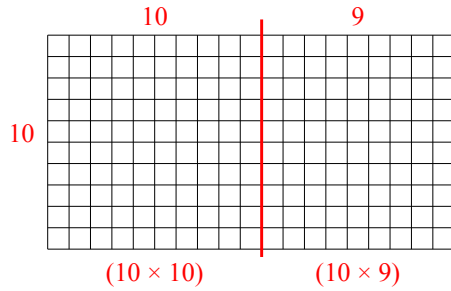
1) $11 \times 10 =$



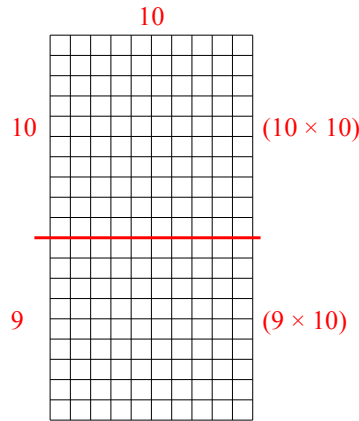
2) $15 \times 10 =$



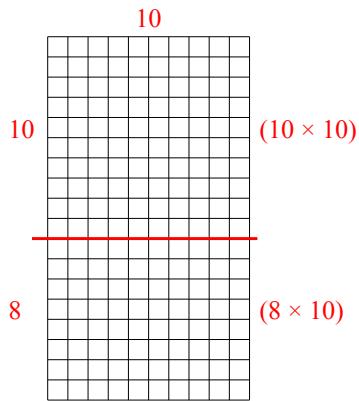
3) $10 \times 19 =$



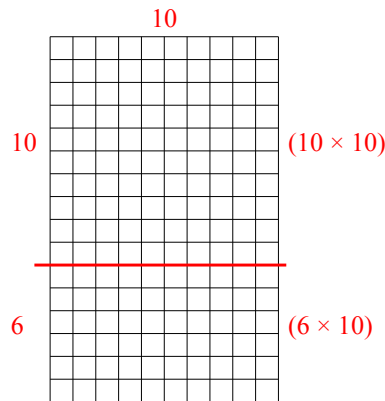
4) $19 \times 10 =$



5) $18 \times 10 =$



6) $16 \times 10 =$



Risposte

1. 110
2. 150
3. 190
4. 190
5. 180
6. 160