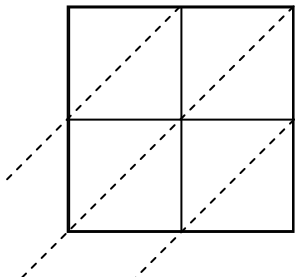


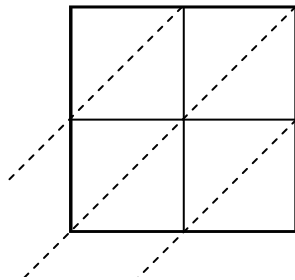


Usa la moltiplicazione del reticolo per risolvere ogni problema.

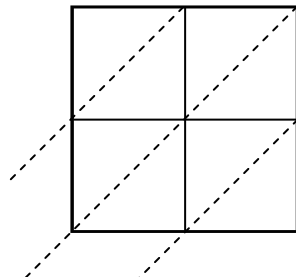
1) $70 \times 76 =$



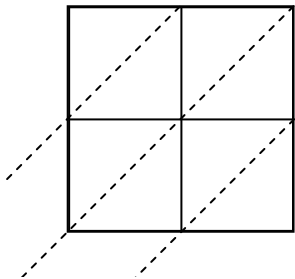
2) $62 \times 84 =$



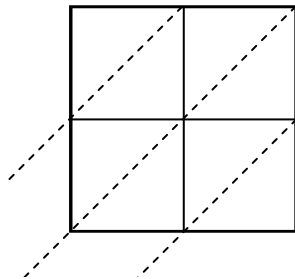
3) $63 \times 85 =$



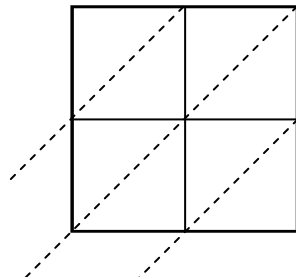
4) $10 \times 99 =$



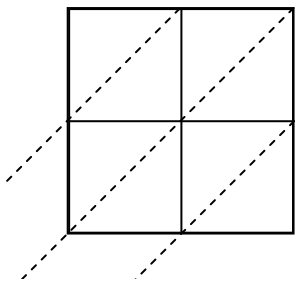
5) $84 \times 14 =$



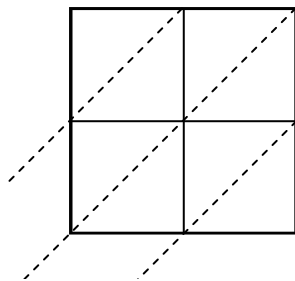
6) $19 \times 40 =$



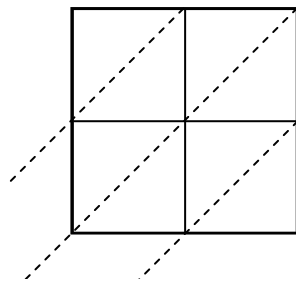
7) $94 \times 52 =$



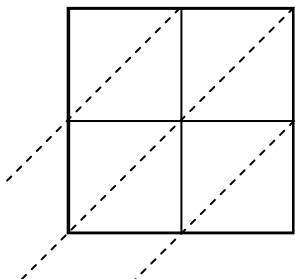
8) $84 \times 37 =$



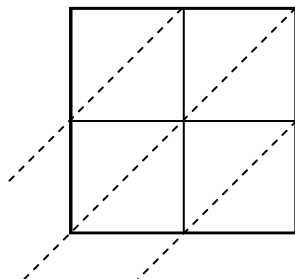
9) $63 \times 70 =$



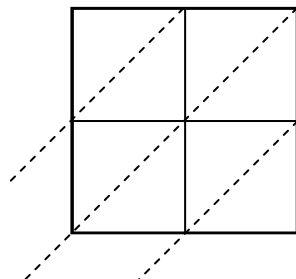
10) $28 \times 58 =$



11) $11 \times 29 =$



12) $76 \times 22 =$



Risposte

1. _____

2. _____

3. _____

4. _____

5. _____

6. _____

7. _____

8. _____

9. _____

10. _____

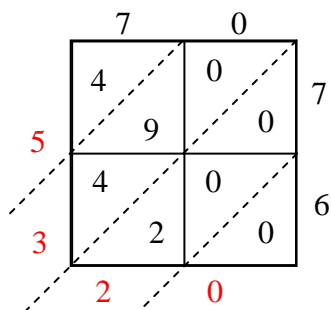
11. _____

12. _____

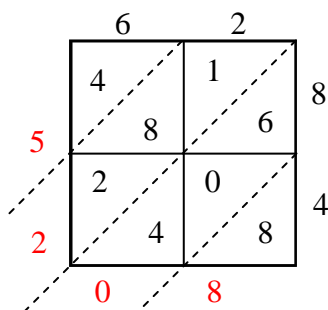


Usa la moltiplicazione del reticolo per risolvere ogni problema.

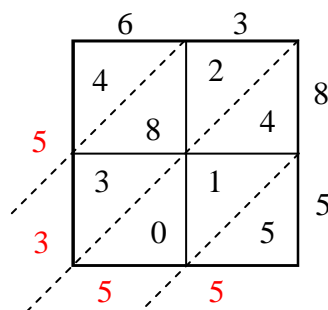
1) $70 \times 76 =$



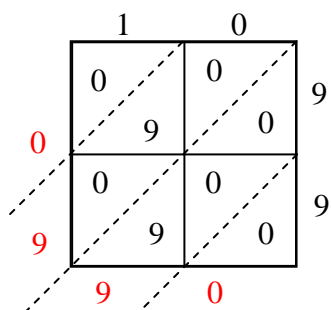
2) $62 \times 84 =$



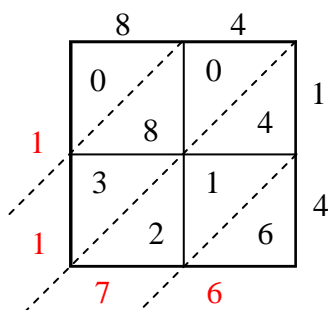
3) $63 \times 85 =$



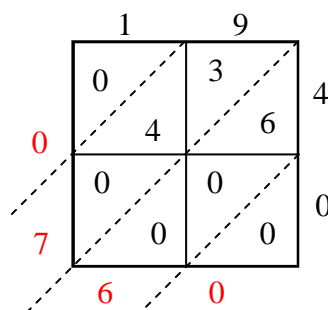
4) $10 \times 99 =$



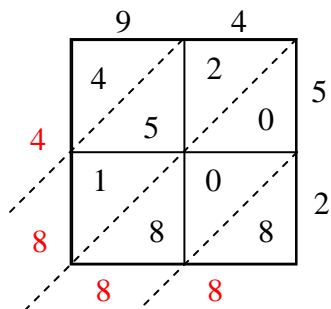
5) $84 \times 14 =$



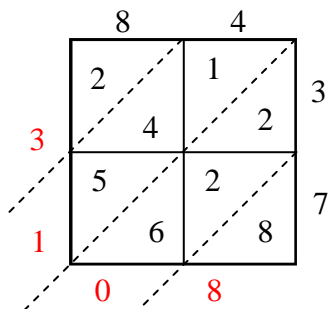
6) $19 \times 40 =$



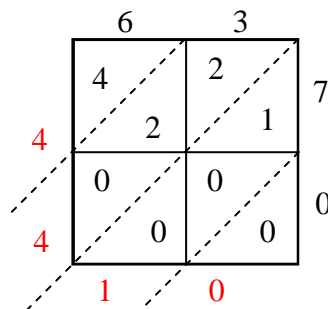
7) $94 \times 52 =$



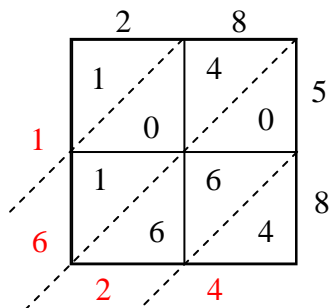
8) $84 \times 37 =$



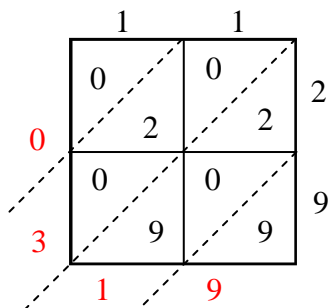
9) $63 \times 70 =$



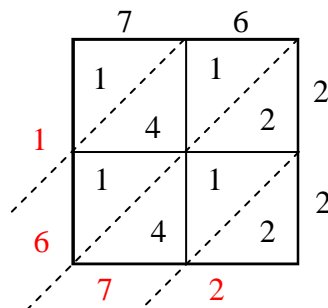
10) $28 \times 58 =$



11) $11 \times 29 =$



12) $76 \times 22 =$

**Risposte**1. **5.320**2. **5.208**3. **5.355**4. **990**5. **1.176**6. **760**7. **4.888**8. **3.108**9. **4.410**10. **1.624**11. **319**12. **1.672**