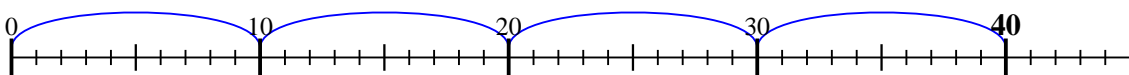




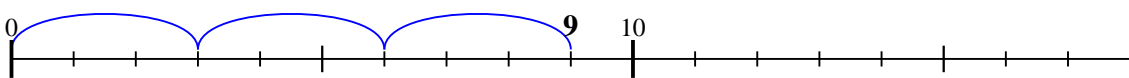


Usa la linea numerata per risolvere ogni problema.

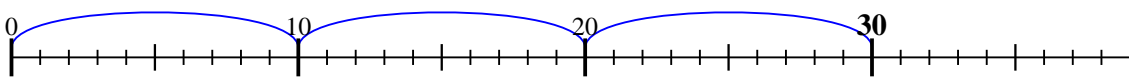
1)  $40 : 10 =$



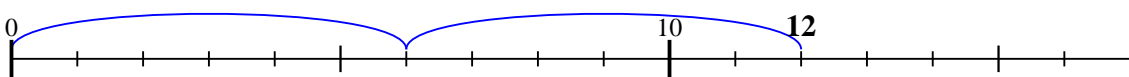
2)  $9 : 3 =$



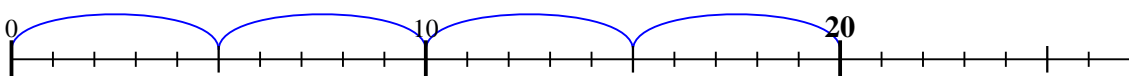
3)  $30 : 10 =$



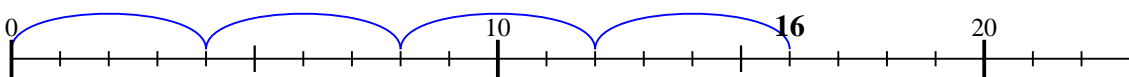
4)  $12 : 6 =$



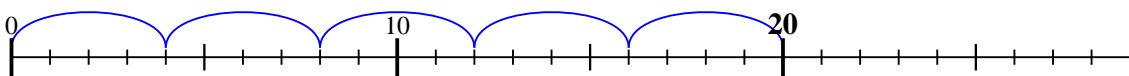
5)  $20 : 5 =$



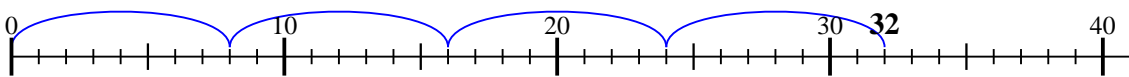
6)  $16 : 4 =$



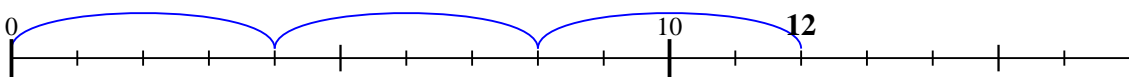
7)  $20 : 4 =$



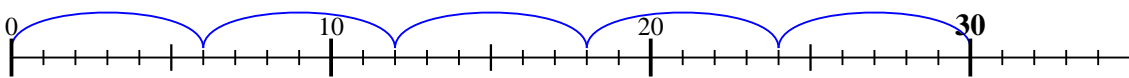
8)  $32 : 8 =$



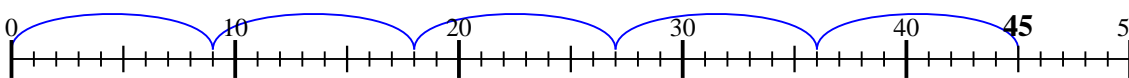
9)  $12 : 4 =$



10)  $30 : 6 =$



11)  $45 : 9 =$

**Risposte**1. 42. 33. 34. 25. 46. 47. 58. 49. 310. 511. 5