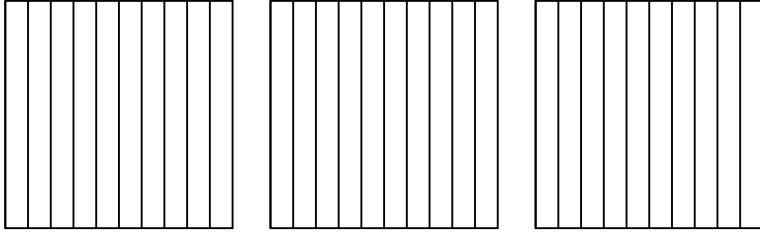


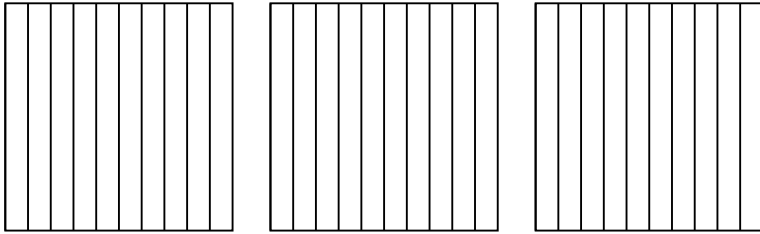


Usa il modello visivo per risolvere ogni problema.

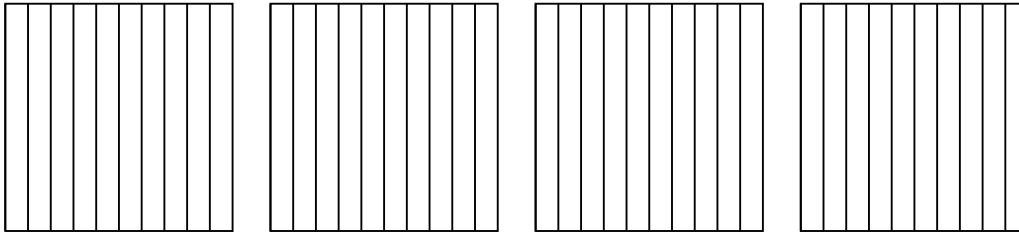
1) $3 \times 0,4 =$




2) $3 \times 0,5 =$



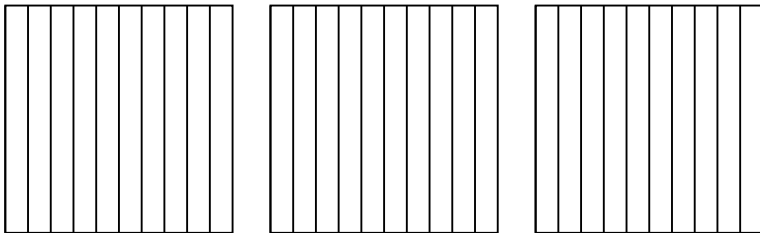
3) $4 \times 0,1 =$




4) $3 \times 0,46 =$



5) $3 \times 0,3 =$



6) $2 \times 0,56 =$



Risposte

1. _____

2. _____

3. _____

4. _____

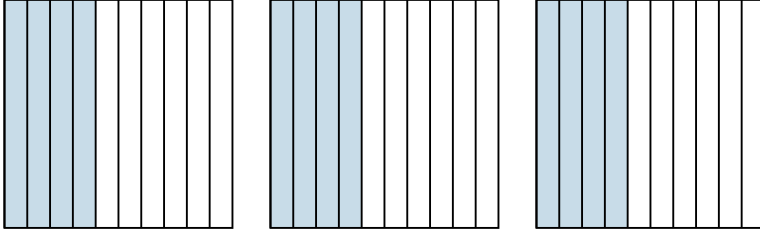
5. _____

6. _____

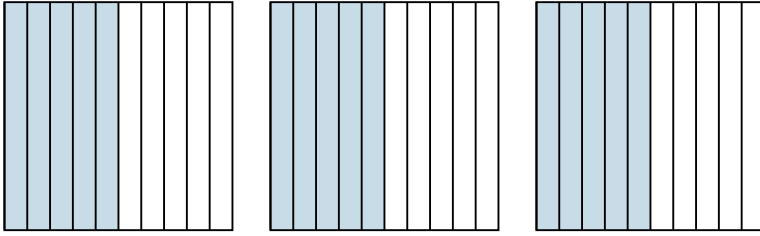


Usa il modello visivo per risolvere ogni problema.

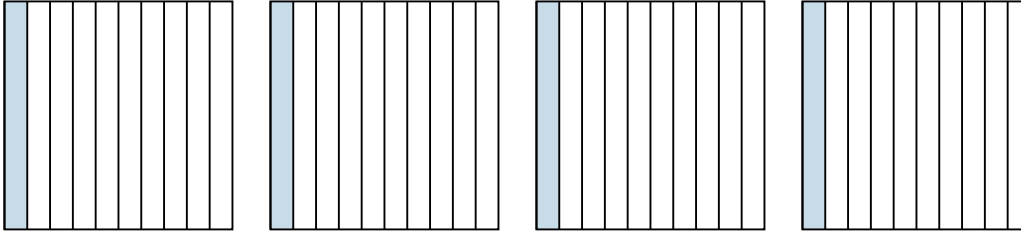
1) $3 \times 0,4 =$



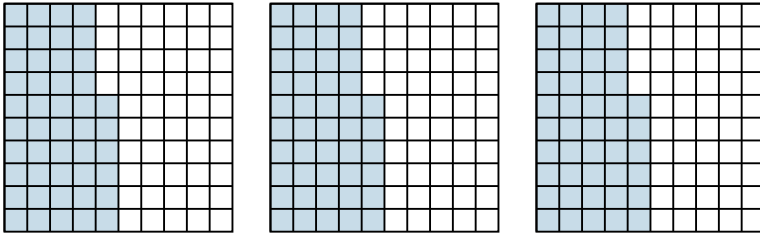
2) $3 \times 0,5 =$



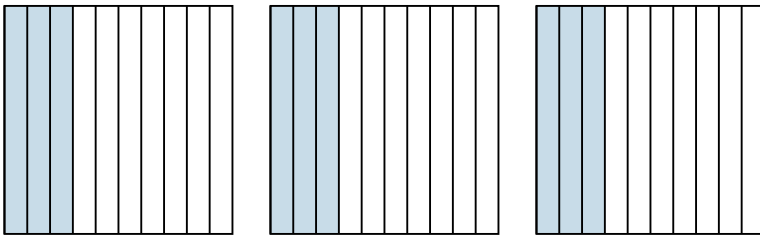
3) $4 \times 0,1 =$



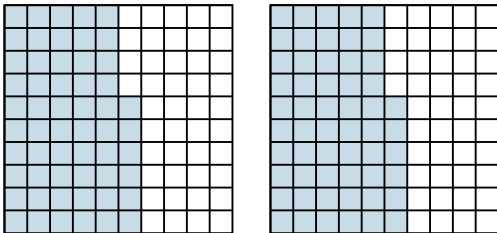
4) $3 \times 0,46 =$



5) $3 \times 0,3 =$



6) $2 \times 0,56 =$



Risposte

1. $\frac{12}{10} = 1,2$

2. $\frac{15}{10} = 1,5$

3. $\frac{4}{10} = 0,4$

4. $\frac{138}{100} = 1,38$

5. $\frac{9}{10} = 0,9$

6. $\frac{112}{100} = 1,12$