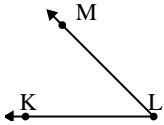




Risolvi ogni problema.

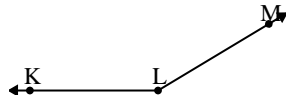
1)



Quale risposta  
corrisponde a  $\angle KLM$ ?

- A.  $16^\circ$
- B.  $138^\circ$
- C.  $78^\circ$
- D.  $45^\circ$

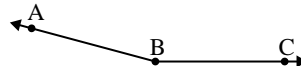
2)



Quale risposta  
corrisponde a  $\angle KLM$ ?

- A.  $149^\circ$
- B.  $127^\circ$
- C.  $95^\circ$
- D.  $1^\circ$

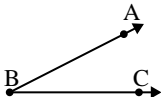
3)



Quale risposta  
corrisponde a  $\angle ABC$ ?

- A.  $8^\circ$
- B.  $38^\circ$
- C.  $165^\circ$
- D.  $124^\circ$

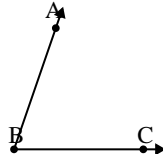
4)



Quale risposta  
corrisponde a  $\angle ABC$ ?

- A.  $80^\circ$
- B.  $50^\circ$
- C.  $27^\circ$
- D.  $136^\circ$

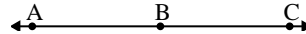
5)



Quale risposta  
corrisponde a  $\angle ABC$ ?

- A.  $71^\circ$
- B.  $95^\circ$
- C.  $9^\circ$
- D.  $33^\circ$

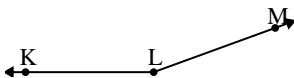
6)



Quale risposta  
corrisponde a  $\angle ABC$ ?

- A.  $88^\circ$
- B.  $180^\circ$
- C.  $133^\circ$
- D.  $18^\circ$

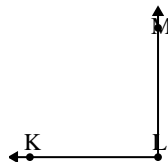
7)



Quale risposta  
corrisponde a  $\angle KLM$ ?

- A.  $131^\circ$
- B.  $28^\circ$
- C.  $72^\circ$
- D.  $160^\circ$

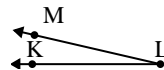
8)



Quale risposta  
corrisponde a  $\angle KLM$ ?

- A.  $162^\circ$
- B.  $141^\circ$
- C.  $56^\circ$
- D.  $90^\circ$

9)



Quale risposta  
corrisponde a  $\angle KLM$ ?

- A.  $44^\circ$
- B.  $170^\circ$
- C.  $147^\circ$
- D.  $13^\circ$

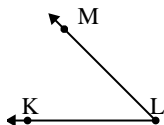
**Risposte**

1. \_\_\_\_\_
2. \_\_\_\_\_
3. \_\_\_\_\_
4. \_\_\_\_\_
5. \_\_\_\_\_
6. \_\_\_\_\_
7. \_\_\_\_\_
8. \_\_\_\_\_
9. \_\_\_\_\_



Risolvi ogni problema.

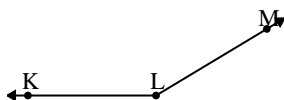
1)



Quale risposta  
corrisponde a  $\angle KLM$ ?

- A.  $16^\circ$
- B.  $138^\circ$
- C.  $78^\circ$
- D.  $45^\circ$

2)



Quale risposta  
corrisponde a  $\angle KLM$ ?

- A.  $149^\circ$
- B.  $127^\circ$
- C.  $95^\circ$
- D.  $1^\circ$

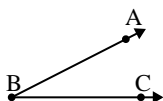
3)



Quale risposta  
corrisponde a  $\angle ABC$ ?

- A.  $8^\circ$
- B.  $38^\circ$
- C.  $165^\circ$
- D.  $124^\circ$

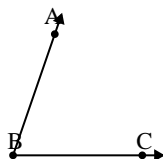
4)



Quale risposta  
corrisponde a  $\angle ABC$ ?

- A.  $80^\circ$
- B.  $50^\circ$
- C.  $27^\circ$
- D.  $136^\circ$

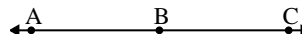
5)



Quale risposta  
corrisponde a  $\angle ABC$ ?

- A.  $71^\circ$
- B.  $95^\circ$
- C.  $9^\circ$
- D.  $33^\circ$

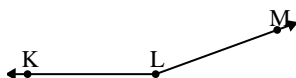
6)



Quale risposta  
corrisponde a  $\angle ABC$ ?

- A.  $88^\circ$
- B.  $180^\circ$
- C.  $133^\circ$
- D.  $18^\circ$

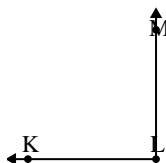
7)



Quale risposta  
corrisponde a  $\angle KLM$ ?

- A.  $131^\circ$
- B.  $28^\circ$
- C.  $72^\circ$
- D.  $160^\circ$

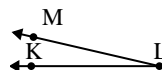
8)



Quale risposta  
corrisponde a  $\angle KLM$ ?

- A.  $162^\circ$
- B.  $141^\circ$
- C.  $56^\circ$
- D.  $90^\circ$

9)



Quale risposta  
corrisponde a  $\angle KLM$ ?

- A.  $44^\circ$
- B.  $170^\circ$
- C.  $147^\circ$
- D.  $13^\circ$

**Risposte**

1. **D**
2. **A**
3. **C**
4. **C**
5. **A**
6. **B**
7. **D**
8. **D**
9. **D**