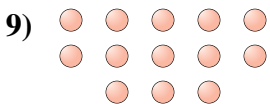
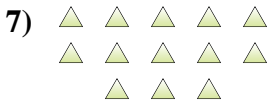

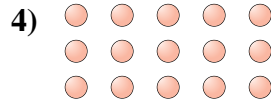




Determina se il numero delle figure all'interno di ogni rettangolo è pari o dispari.



**Risposte**

1. \_\_\_\_\_
2. \_\_\_\_\_
3. \_\_\_\_\_
4. \_\_\_\_\_
5. \_\_\_\_\_
6. \_\_\_\_\_
7. \_\_\_\_\_
8. \_\_\_\_\_
9. \_\_\_\_\_
10. \_\_\_\_\_



Determina se il numero delle figure all'interno di ogni rettangolo è pari o dispari.



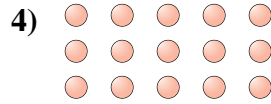
6




14



10



15



17



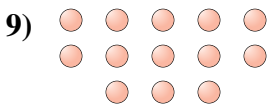
7



13



10



13



8

**Risposte**

1. **Pari**

2. **Pari**

3. **Pari**

4. **Dispari**

5. **Dispari**

6. **Dispari**

7. **Dispari**

8. **Pari**

9. **Dispari**

10. **Pari**