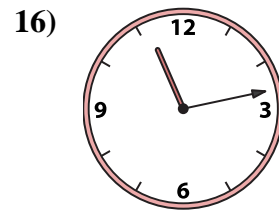
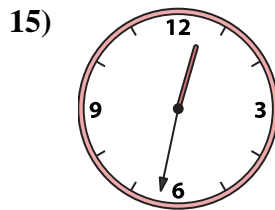
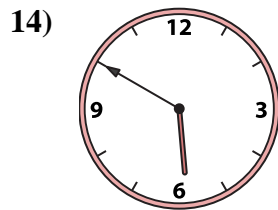
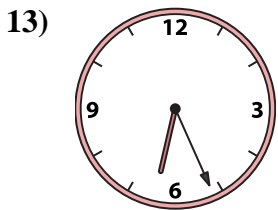
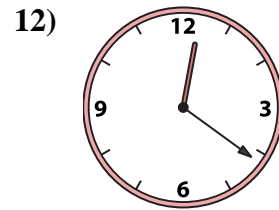
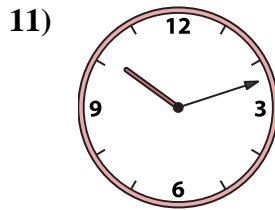
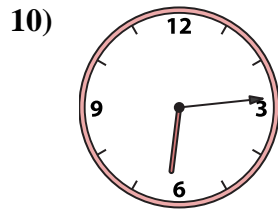
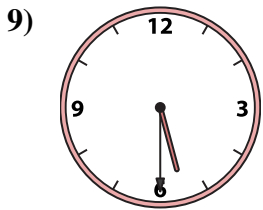
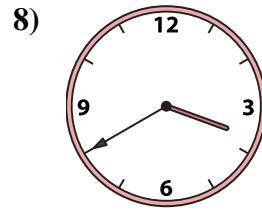
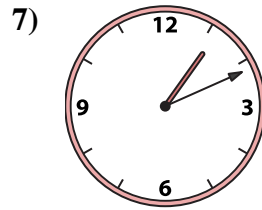
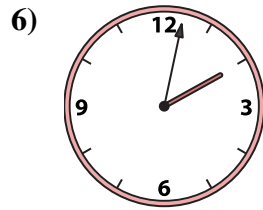
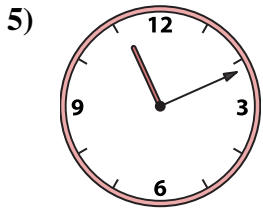
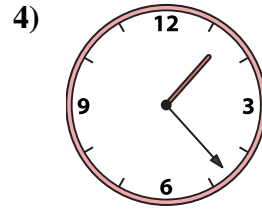
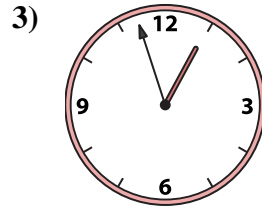
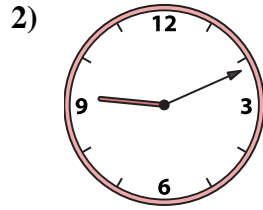
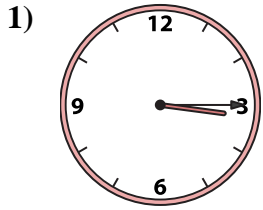




Abbina l'orologio analogico all'orologio digitale.

Risposte



1. _____
2. _____
3. _____
4. _____
5. _____
6. _____
7. _____
8. _____
9. _____
10. _____
11. _____
12. _____
13. _____
14. _____
15. _____
16. _____

A. 10:12

B. 3:40

C. 1:23

D. 12:32

E. 12:21

F. 3:15

G. 1:11

H. 6:14

I. 5:50

J. 2:02

K. 5:30

L. 6:26

M. 12:57

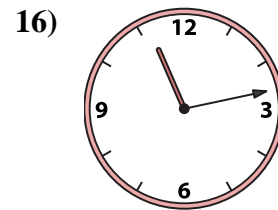
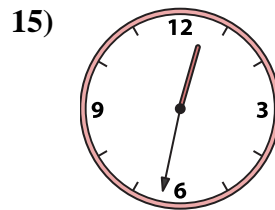
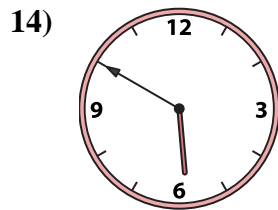
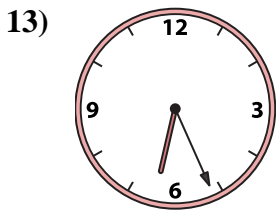
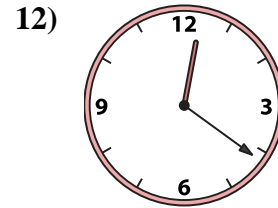
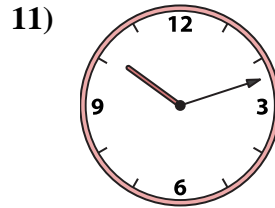
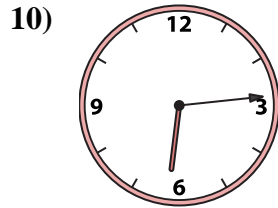
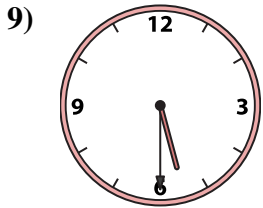
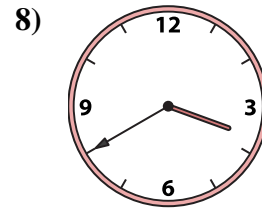
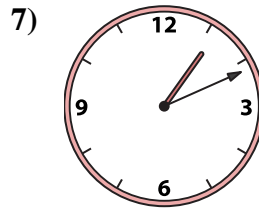
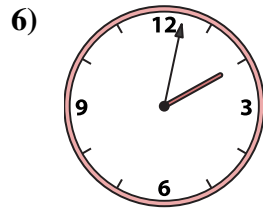
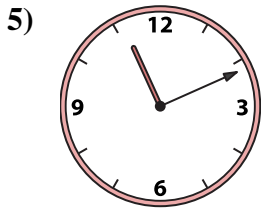
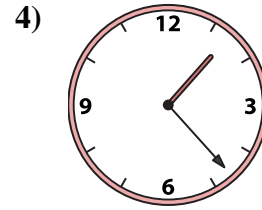
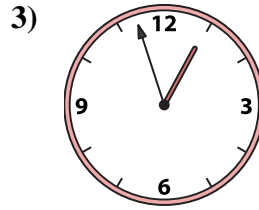
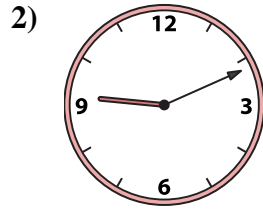
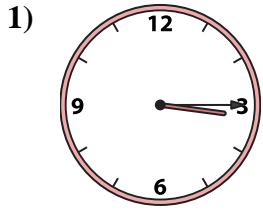
N. 11:11

O. 11:13

P. 9:11



Abbina l'orologio analogico all'orologio digitale.

A. B. C. D. E. F. G. H. I. J. K. L. M. N. O. P. **Risposte**1. **F** 2. **P** 3. **M** 4. **C** 5. **N** 6. **J** 7. **G** 8. **B** 9. **K** 10. **H** 11. **A** 12. **E** 13. **L** 14. **I** 15. **D** 16. **O**