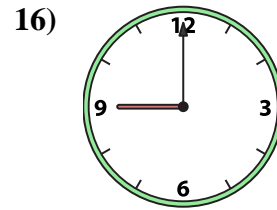
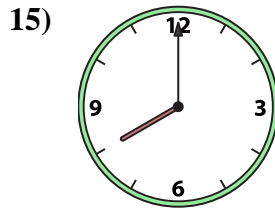
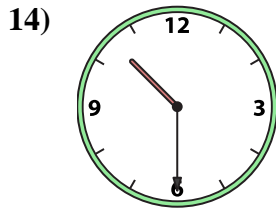
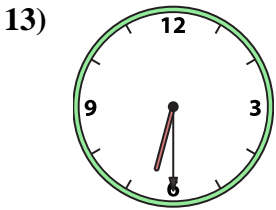
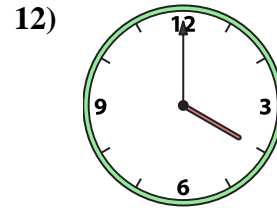
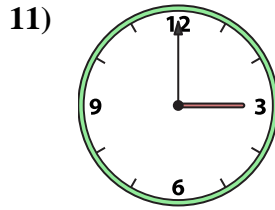
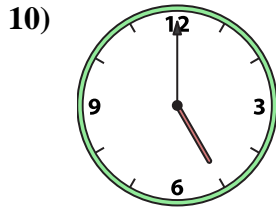
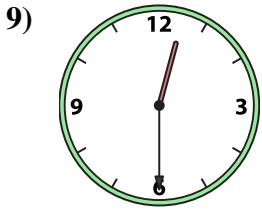
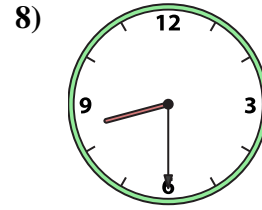
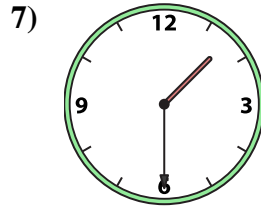
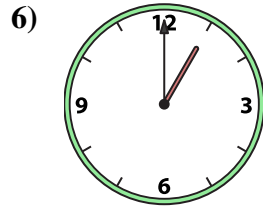
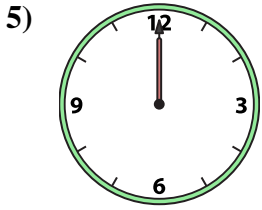
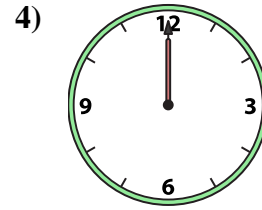
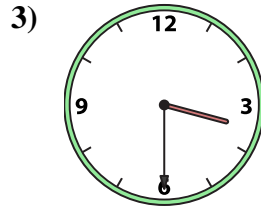
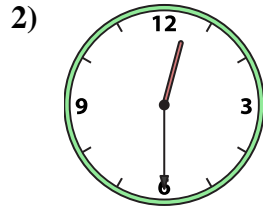





Abbina l'orologio analogico all'orologio digitale.

Risposte



A. 3:30

B. 9:00

C. 12:00

D. 12:00

E. 10:30

F. 12:30

G. 8:00

H. 11:00

I. 5:00

J. 1:30

K. 12:30

L. 4:00

M. 3:00

N. 6:30

O. 8:30

P. 1:00

1. _____

2. _____

3. _____

4. _____

5. _____

6. _____

7. _____

8. _____

9. _____

10. _____

11. _____

12. _____

13. _____

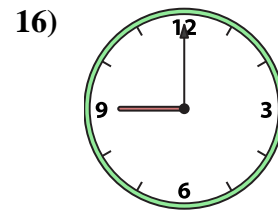
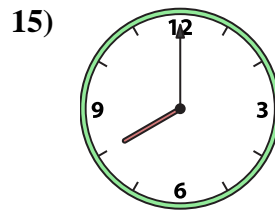
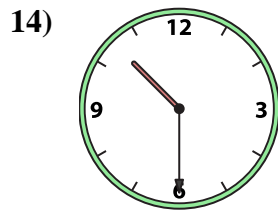
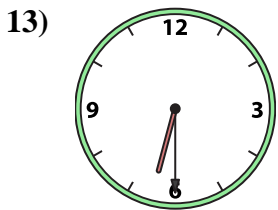
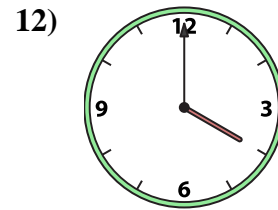
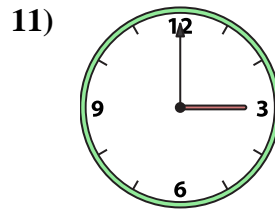
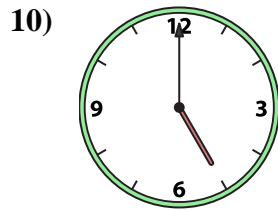
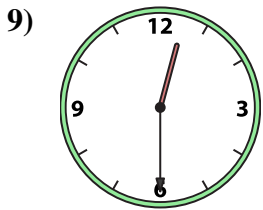
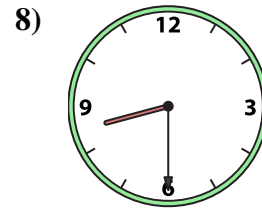
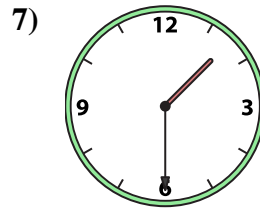
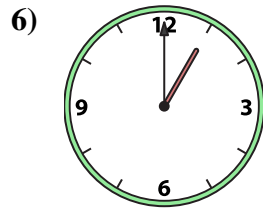
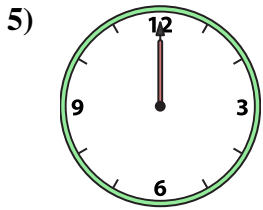
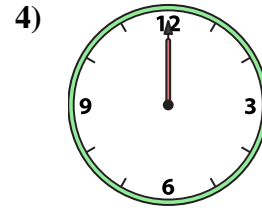
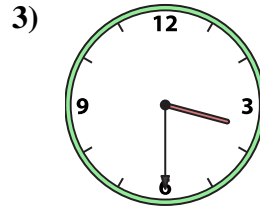
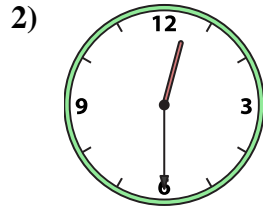

14. _____

15. _____

16. _____



Abbina l'orologio analogico all'orologio digitale.

A. B. C. D. E. F. G. H. I. J. K. L. M. N. O. P. **Risposte**1. **H** 2. **F** 3. **A** 4. **C** 5. **D** 6. **P** 7. **J** 8. **O** 9. **K** 10. **I** 11. **M** 12. **L** 13. **N** 14. **E** 15. **G** 16. **B**