

**Risolvi ogni problema.****Risposte**

1) Inizio: 12:10

Elapsed: 1 ora e 25 minuti

Fine: _____

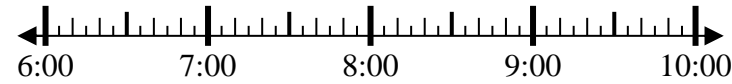


1. _____

2) Inizio: 6:40

Elapsed: 2 ore e 10 minuti

Fine: _____

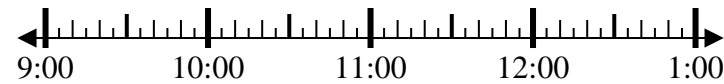


2. _____

3) Inizio: 9:05

Elapsed: 2 ore e 50 minuti

Fine: _____

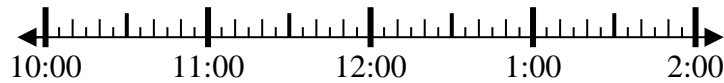


3. _____

4) Inizio: 10:45

Elapsed: 2 ore e 40 minuti

Fine: _____

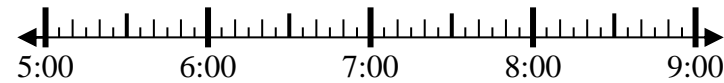


4. _____

5) Inizio: 5:35

Elapsed: 1 ora e 30 minuti

Fine: _____



5. _____

6) Inizio: 8:15

Elapsed: 2 ore e 25 minuti

Fine: _____



6. _____

7) Inizio: 4:10

Elapsed: 2 ore e 55 minuti

Fine: _____



7. _____

8) Inizio: 4:00

Elapsed: 2 ore e 20 minuti

Fine: _____



8. _____

**Risolvi ogni problema.**

1) Inizio: 12:10

Elapsed: 1 ora e 25 minuti

Fine: 1:35

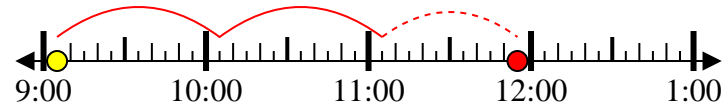
2) Inizio: 6:40

Elapsed: 2 ore e 10 minuti

Fine: 8:50

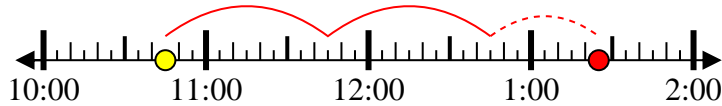
3) Inizio: 9:05

Elapsed: 2 ore e 50 minuti

Fine: 11:55

4) Inizio: 10:45

Elapsed: 2 ore e 40 minuti

Fine: 1:25

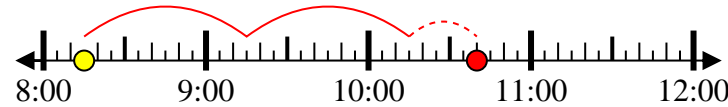
5) Inizio: 5:35

Elapsed: 1 ora e 30 minuti

Fine: 7:05

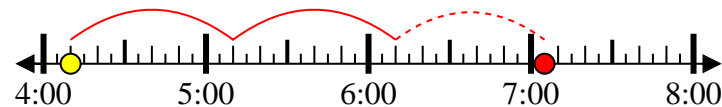
6) Inizio: 8:15

Elapsed: 2 ore e 25 minuti

Fine: 10:40

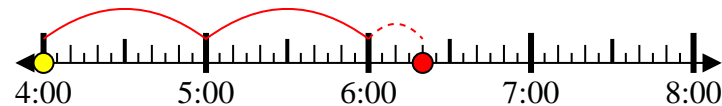
7) Inizio: 4:10

Elapsed: 2 ore e 55 minuti

Fine: 7:05

8) Inizio: 4:00

Elapsed: 2 ore e 20 minuti

Fine: 6:20**Risposte**1. 1:352. 8:503. 11:554. 1:255. 7:056. 10:407. 7:058. 6:20