



Risolvi ogni problema.

Risposte

1) Inizio: 2:50

Elapsed: _____

Fine: 5:40

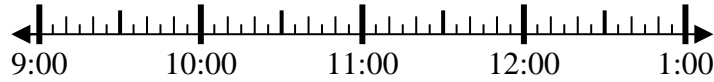


1. _____

2) Inizio: 9:10

Elapsed: _____

Fine: 10:20

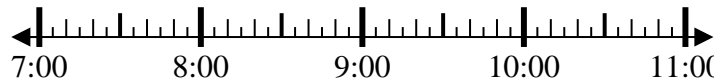


2. _____

3) Inizio: 7:05

Elapsed: _____

Fine: 8:20

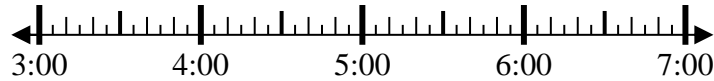


3. _____

4) Inizio: 3:00

Elapsed: _____

Fine: 4:15



4. _____

5) Inizio: 7:15

Elapsed: _____

Fine: 8:55

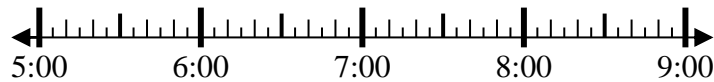


5. _____

6) Inizio: 5:00

Elapsed: _____

Fine: 7:15

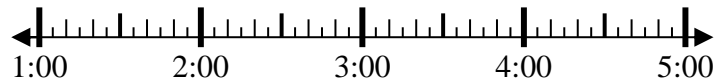


6. _____

7) Inizio: 1:00

Elapsed: _____

Fine: 3:45

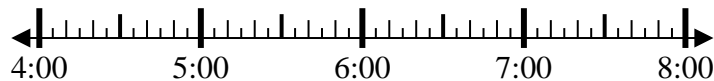


7. _____

8) Inizio: 4:35

Elapsed: _____

Fine: 5:55



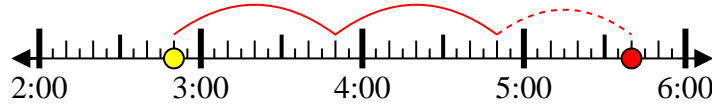
8. _____

**Risolvi ogni problema.**

1) Inizio: 2:50

Elapsed: 2 ore e 50 minuti

Fine: 5:40



2) Inizio: 9:10

Elapsed: 1 ora e 10 minuti

Fine: 10:20



3) Inizio: 7:05

Elapsed: 1 ora e 15 minuti

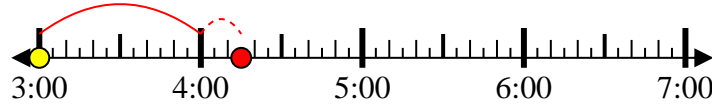
Fine: 8:20



4) Inizio: 3:00

Elapsed: 1 ora e 15 minuti

Fine: 4:15



5) Inizio: 7:15

Elapsed: 1 ora e 40 minuti

Fine: 8:55



6) Inizio: 5:00

Elapsed: 2 ore e 15 minuti

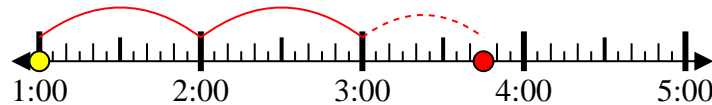
Fine: 7:15



7) Inizio: 1:00

Elapsed: 2 ore e 45 minuti

Fine: 3:45



8) Inizio: 4:35

Elapsed: 1 ora e 20 minuti

Fine: 5:55

**Risposte**1. 2 ore e 50 minuti2. 1 ora e 10 minuti3. 1 ora e 15 minuti4. 1 ora e 15 minuti5. 1 ora e 40 minuti6. 2 ore e 15 minuti7. 2 ore e 45 minuti8. 1 ora e 20 minuti