



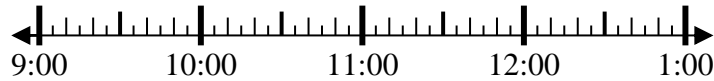
Risolvi ogni problema.

Risposte

1) Inizio: 9:20

Elapsed: _____

Fine: 10:45



1. _____

2) Inizio: 2:00

Elapsed: _____

Fine: 4:55

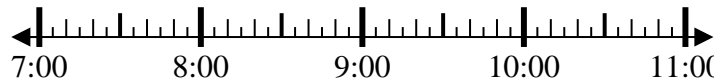


2. _____

3) Inizio: 7:40

Elapsed: _____

Fine: 9:55

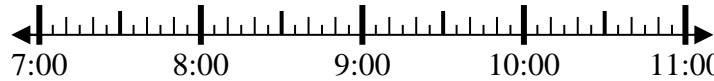


3. _____

4) Inizio: 7:15

Elapsed: _____

Fine: 8:25



4. _____

5) Inizio: 11:15

Elapsed: _____

Fine: 1:40

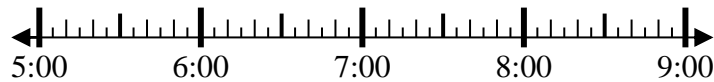


5. _____

6) Inizio: 5:30

Elapsed: _____

Fine: 6:55



6. _____

7) Inizio: 12:00

Elapsed: _____

Fine: 2:40

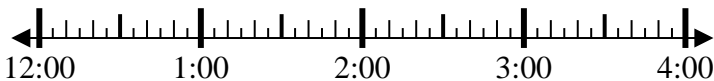


7. _____

8) Inizio: 12:15

Elapsed: _____

Fine: 1:35



8. _____



Risolvi ogni problema.

1) Inizio: 9:20

Elapsed: 1 ora e 25 minuti

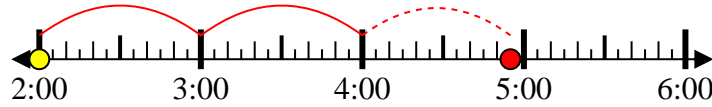
Fine: 10:45



2) Inizio: 2:00

Elapsed: 2 ore e 55 minuti

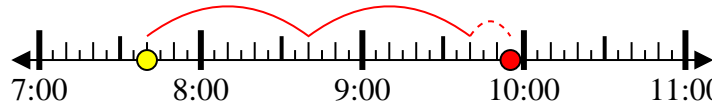
Fine: 4:55



3) Inizio: 7:40

Elapsed: 2 ore e 15 minuti

Fine: 9:55



4) Inizio: 7:15

Elapsed: 1 ora e 10 minuti

Fine: 8:25



5) Inizio: 11:15

Elapsed: 2 ore e 25 minuti

Fine: 1:40



6) Inizio: 5:30

Elapsed: 1 ora e 25 minuti

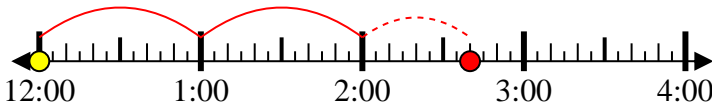
Fine: 6:55



7) Inizio: 12:00

Elapsed: 2 ore e 40 minuti

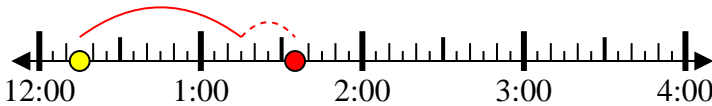
Fine: 2:40



8) Inizio: 12:15

Elapsed: 1 ora e 20 minuti

Fine: 1:35



Risposte

1. 1 ora e 25 minuti

2. 2 ore e 55 minuti

3. 2 ore e 15 minuti

4. 1 ora e 10 minuti

5. 2 ore e 25 minuti

6. 1 ora e 25 minuti

7. 2 ore e 40 minuti

8. 1 ora e 20 minuti