



Abbinare ogni tabella al grafico appropriato.

Risposte

1)

Nome	Lattine Riciclate
Allen	10
Beth	3
Rick	5
Andrea	1
Dale	10

2)

Nome	Lattine Riciclate
Allen	3
Beth	2
Rick	4
Andrea	8
Dale	1

3)

Nome	Lattine Riciclate
Allen	3
Beth	2
Rick	4
Andrea	8
Dale	1

4)

Nome	Lattine Riciclate
Allen	3
Beth	2
Rick	4
Andrea	8
Dale	1

5)

Nome	Lattine Riciclate
Allen	3
Beth	2
Rick	4
Andrea	8
Dale	1

6)

Nome	Lattine Riciclate
Allen	3
Beth	2
Rick	4
Andrea	8
Dale	1

1. _____

2. _____

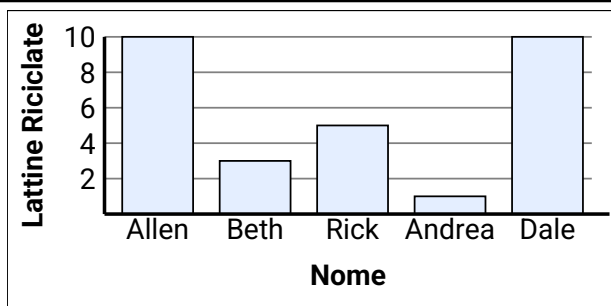
3. _____

4. _____

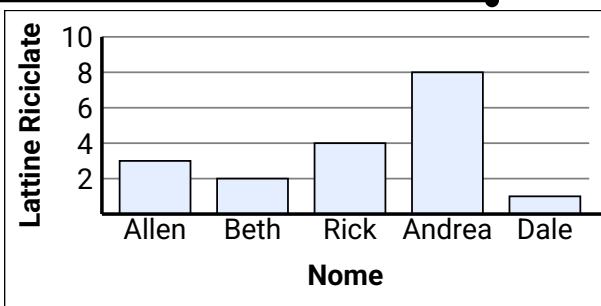
5. _____

6. _____

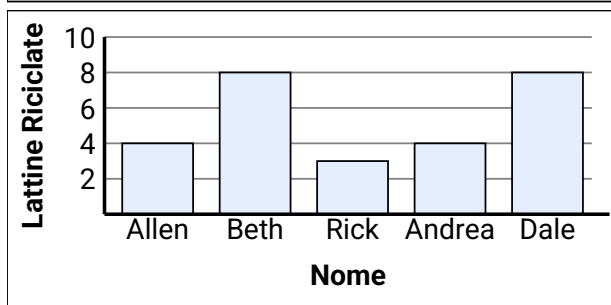
A.



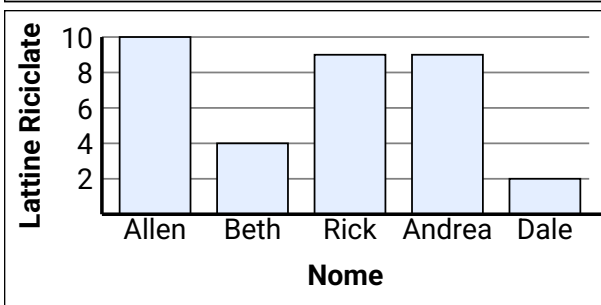
B.



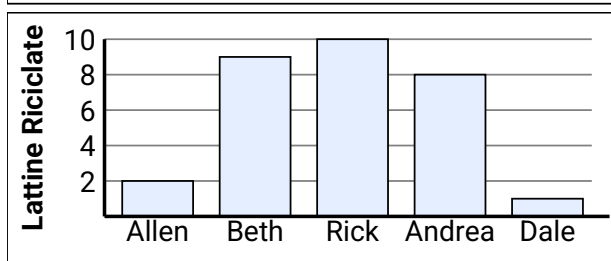
C.



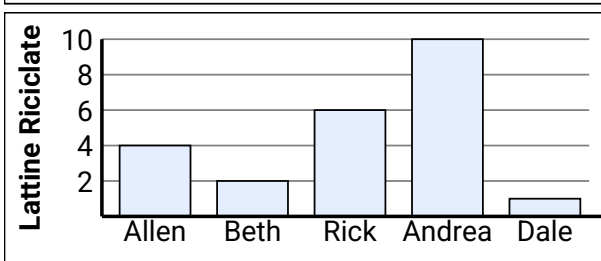
D.



E.



F.





Abbina ogni tabella al grafico appropriato.

Risposte

1)

Nome	Lattine Riciclate
Allen	10
Beth	3
Rick	5
Andrea	3
Dale	1

2)

Nome	Lattine Riciclate
Allen	4
Beth	2
Rick	4
Andrea	8
Dale	1

3)

Nome	Lattine Riciclate
Allen	10
Beth	3
Rick	10
Andrea	3
Dale	3

4)

Nome	Lattine Riciclate
Allen	4
Beth	8
Rick	3
Andrea	4
Dale	8

5)

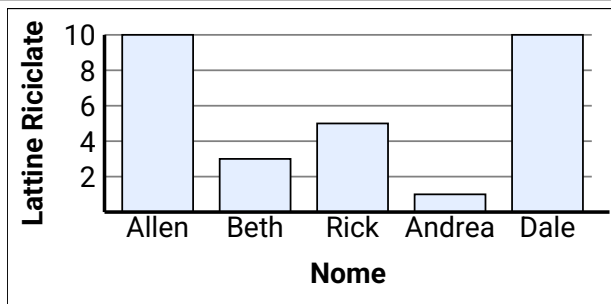
Nome	Lattine Riciclate
Allen	10
Beth	2
Rick	4
Andrea	6
Dale	1

6)

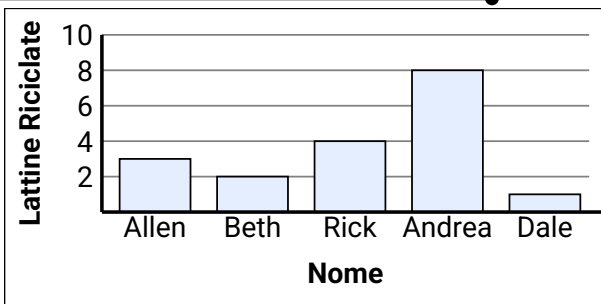
Nome	Lattine Riciclate
Allen	3
Beth	2
Rick	4
Andrea	8
Dale	1

1. **E**2. **A**3. **C**4. **D**5. **F**6. **B**

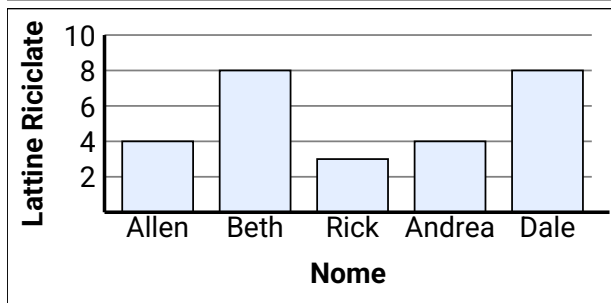
A.



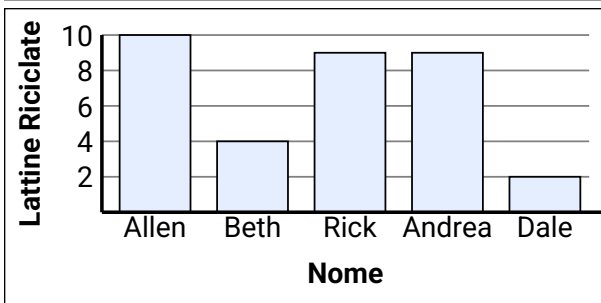
B.



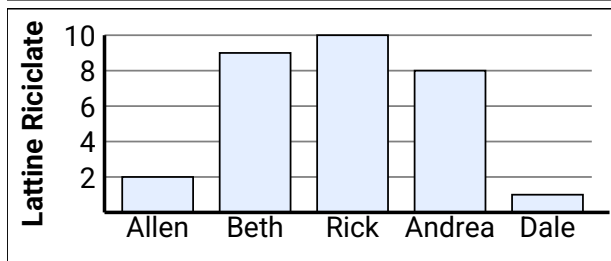
C.



D.



E.



F.

