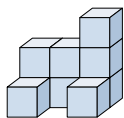




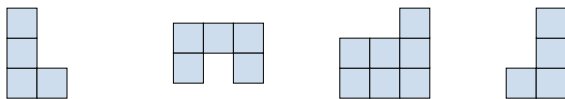
Risolvi ogni problema.

Risposte

1) Guardando la figura in 3d dall'alto, cosa vedresti?

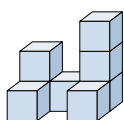


- A.
- B.
- C.
- D.



1. _____

2) Guardando la figura in 3d dal lato sinistro, cosa vedresti?

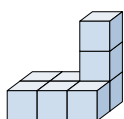


- A.
- B.
- C.
- D.

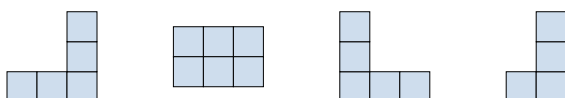


2. _____

3) Guardando la figura in 3d dall'alto, cosa vedresti?

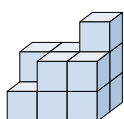


- A.
- B.
- C.
- D.

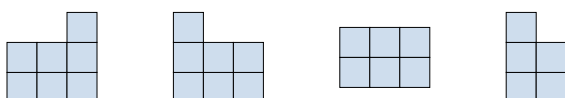


3. _____

4) Guardando la figura in 3d dal lato sinistro, cosa vedresti?

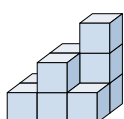


- A.
- B.
- C.
- D.



4. _____

5) Guardando la figura in 3d dal lato destro, cosa vedresti?



- A.
- B.
- C.
- D.



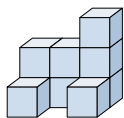
5. _____



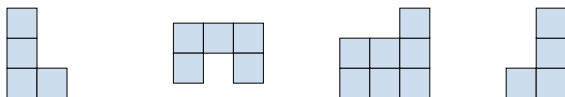
Risolvi ogni problema.

Risposte

1) Guardando la figura in 3d dall'alto, cosa vedresti?

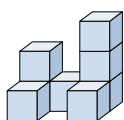


A. B. C. D.



1. **B**

2) Guardando la figura in 3d dal lato sinistro, cosa vedresti?

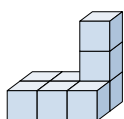


A. B. C. D.

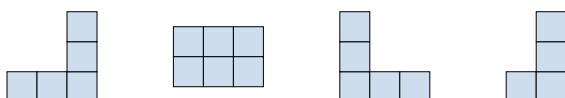


2. **A**

3) Guardando la figura in 3d dall'alto, cosa vedresti?

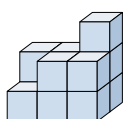


A. B. C. D.

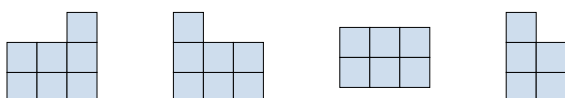


3. **B**

4) Guardando la figura in 3d dal lato sinistro, cosa vedresti?

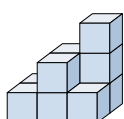


A. B. C. D.



4. **D**

5) Guardando la figura in 3d dal lato destro, cosa vedresti?



A. B. C. D.



5. **D**