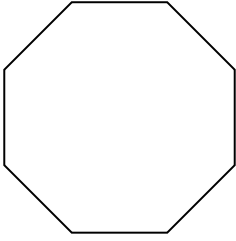


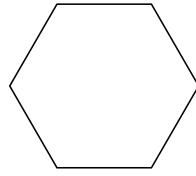


Identifica il tipo di forma rappresentata.


1)



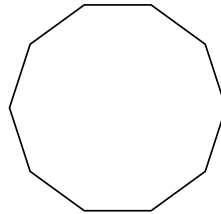
2)



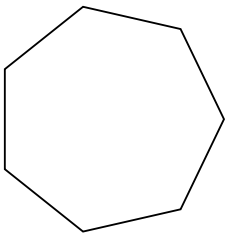
3)



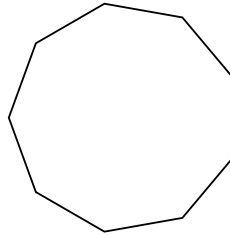
4)



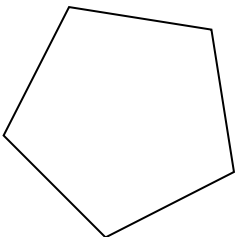
5)



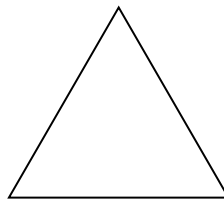
6)



7)



8)



**Risposte**

1. \_\_\_\_\_

2. \_\_\_\_\_

3. \_\_\_\_\_

4. \_\_\_\_\_

5. \_\_\_\_\_

6. \_\_\_\_\_

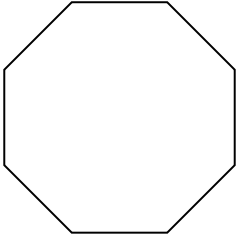
7. \_\_\_\_\_

8. \_\_\_\_\_

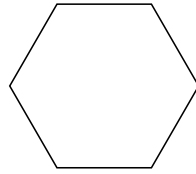


Identifica il tipo di forma rappresentata.


1)



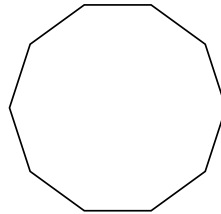
2)



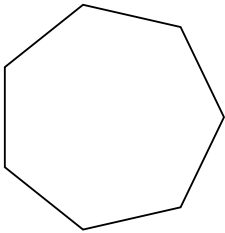
3)



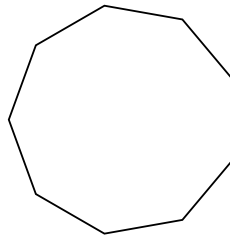
4)



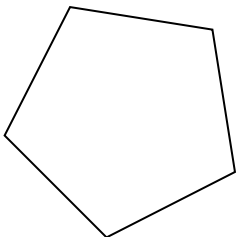
5)



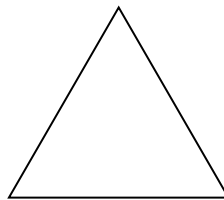
6)



7)



8)



**Risposte**

1. **Ottagono**

2. **Esagono**

3. **Quadrilatero**

4. **Decagono**

5. **Ettagono**

6. **Ennagono**

7. **Pentagono**

8. **triangle**