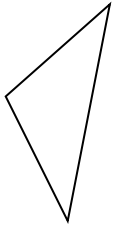




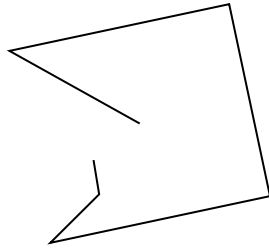
Determina se le figure rappresentate sono 'Triangolo', 'Quadrato', 'Rettangolo', 'Esagono' o 'Altro'.

Risposte

1)



2)



3)



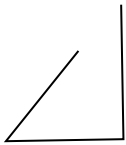
1. _____

2. _____

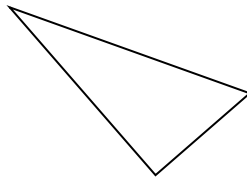
3. _____

4. _____

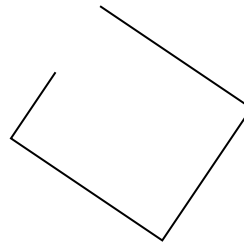
4)



5)



6)



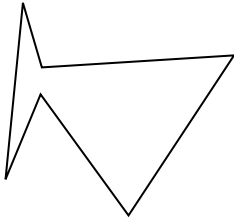
5. _____

6. _____

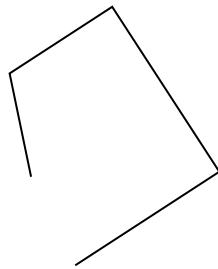
7. _____

8. _____


7)



8)



9)




9. _____

10. _____

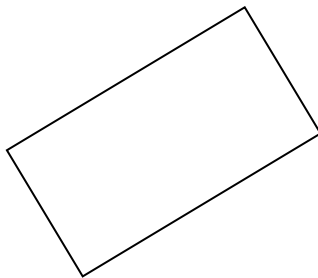
11. _____

12. _____


10)



11)



12)

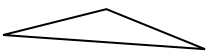


13. _____


14. _____

15. _____

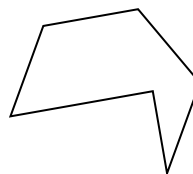
13)



14)



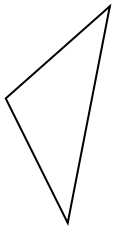
15)



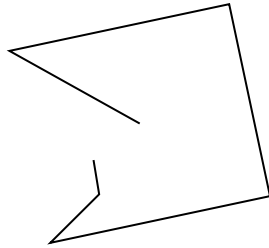


Determina se le figure rappresentate sono 'Triangolo', 'Quadrato', 'Rettangolo', 'Esagono' o 'Altro'.

1)



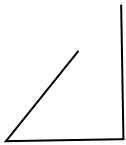
2)



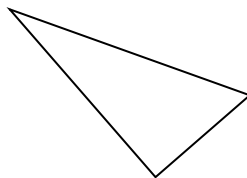
3)



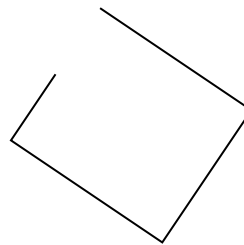
4)



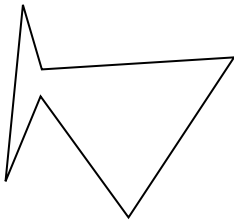
5)



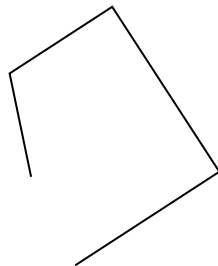
6)



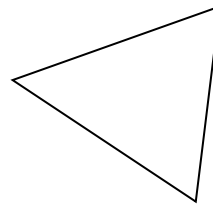
7)




8)



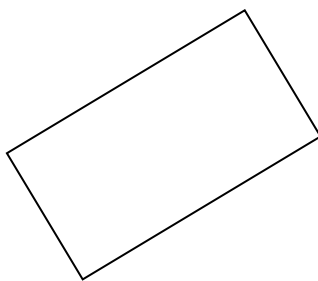
9)




10)



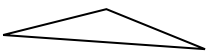
11)




12)



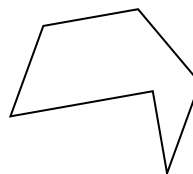
13)



14)



15)



Risposte

1. triangle

2. Altro

3. Altro

4. Altro

5. triangle

6. Altro

7. Esagono

8. Altro

9. triangle

10. Altro

11. rectangle

12. Esagono

13. triangle

14. Altro

15. Esagono