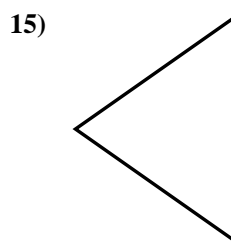
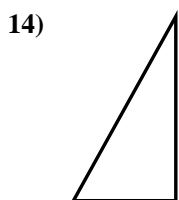
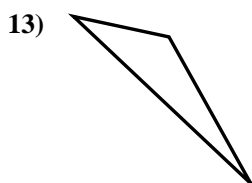
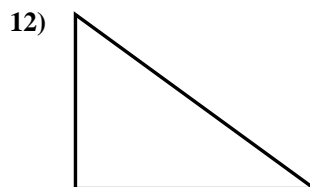
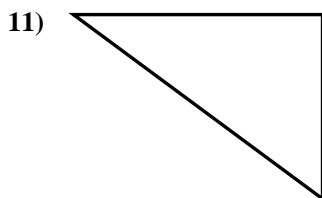
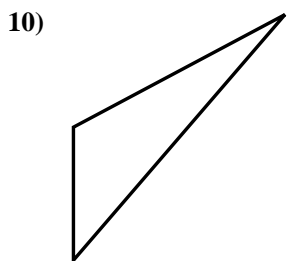
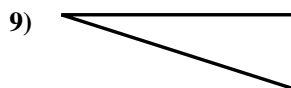
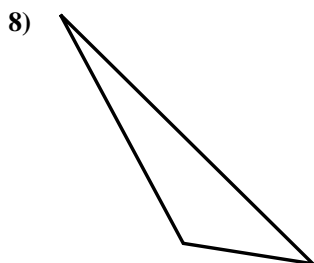
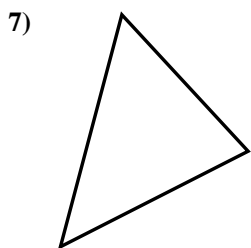
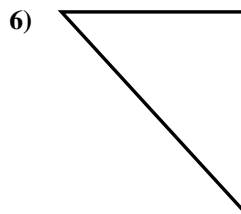
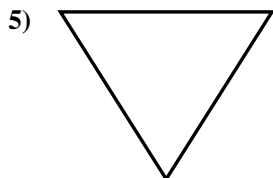
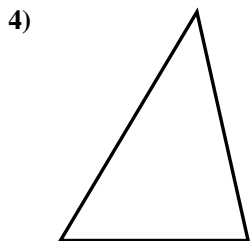
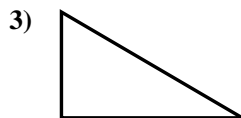
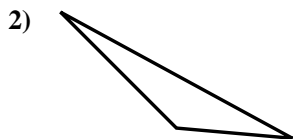
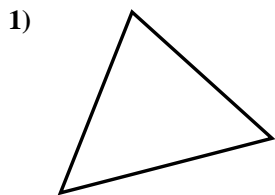




Determina se i triangoli mostrati sono rettangoli oppure no.

Risposte

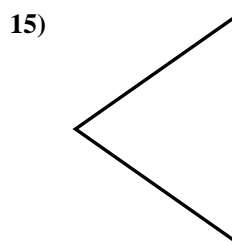
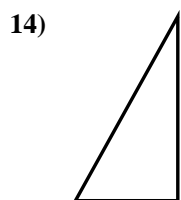
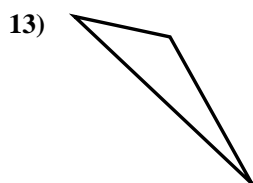
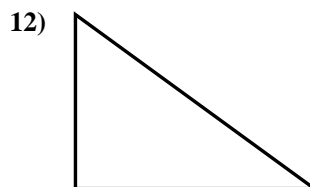
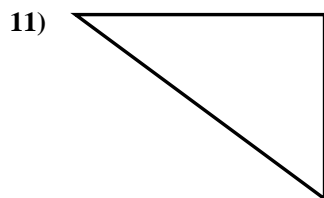
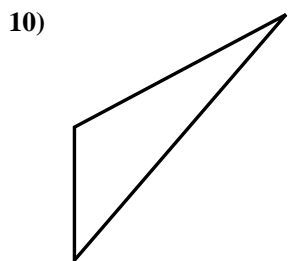
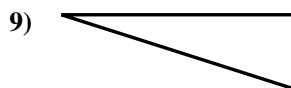
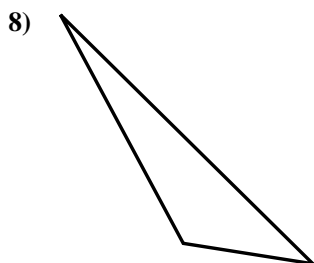
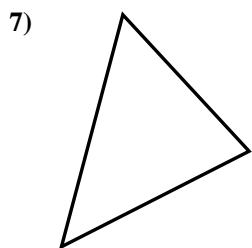
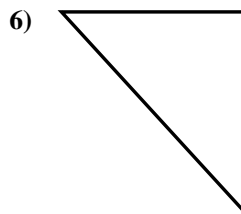
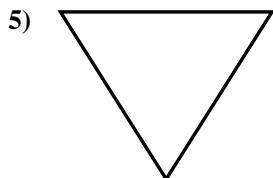
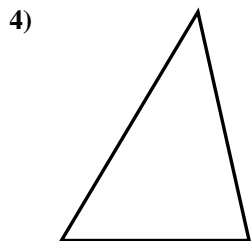
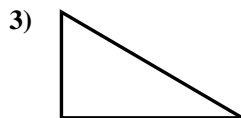
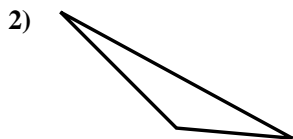
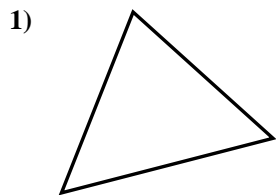


- 1. _____
- 2. _____
- 3. _____
- 4. _____
- 5. _____
- 6. _____
- 7. _____
- 8. _____
- 9. _____
- 10. _____
- 11. _____
- 12. _____
- 13. _____
- 14. _____
- 15. _____



Determina se i triangoli mostrati sono rettangoli oppure no.

Risposte



1. no

2. no

3. si

4. no

5. no

6. si

7. no

8. no

9. si

10. no

11. si

12. si

13. no

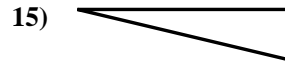
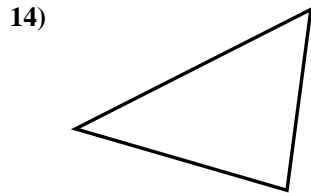
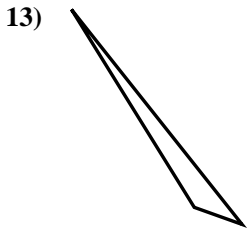
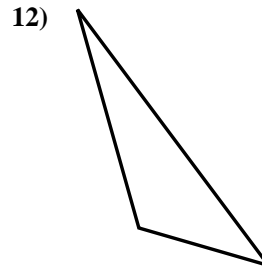
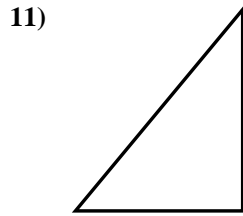
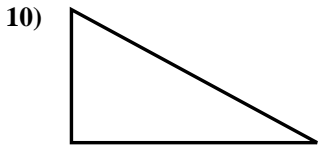
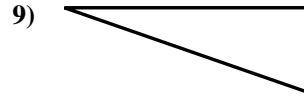
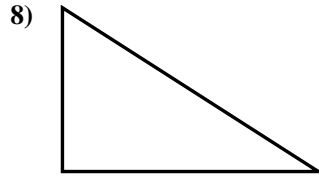
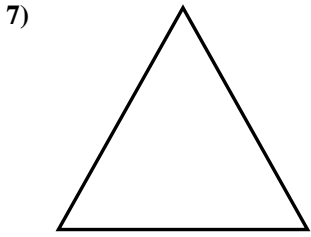
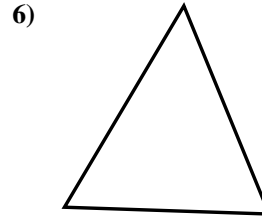


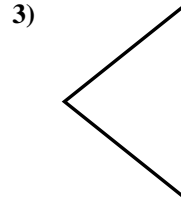
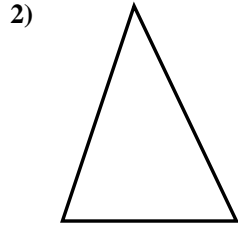
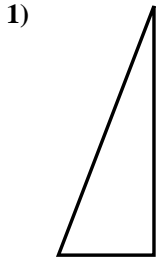
14. si

15. no



Determina se i triangoli mostrati sono rettangoli oppure no.

Risposte

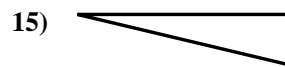
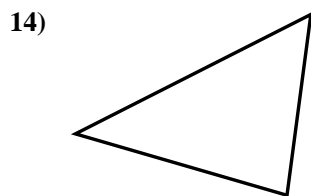
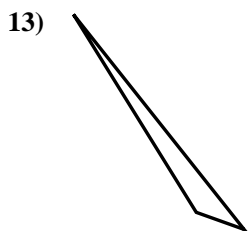
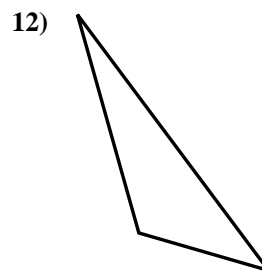
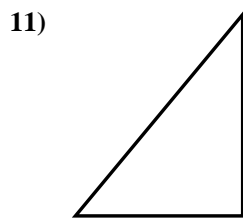
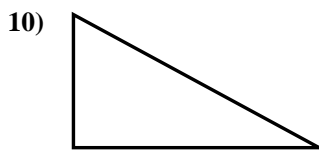
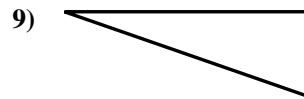
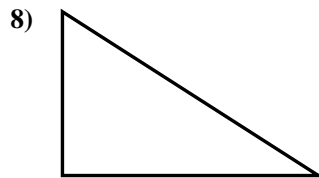
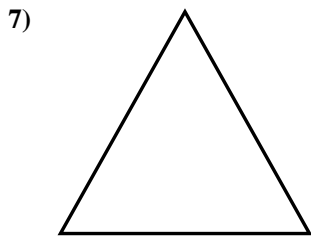
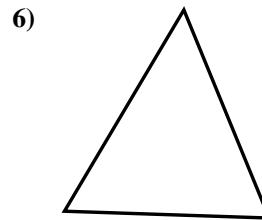
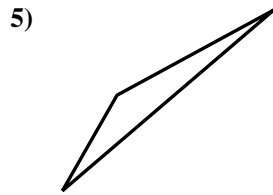

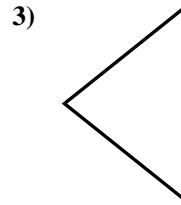
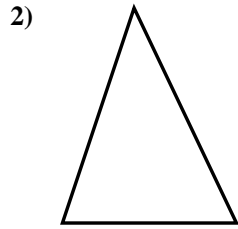
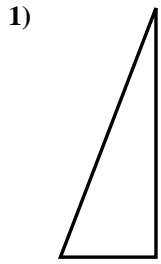


- 1. _____
- 2. _____
- 3. _____
- 4. _____
- 5. _____
- 6. _____
- 7. _____
- 8. _____
- 9. _____
- 10. _____
- 11. _____
- 12. _____
- 13. _____
- 14. _____
- 15. _____



Determina se i triangoli mostrati sono rettangoli oppure no.

Risposte



1. si

2. no

3. no

4. no

5. no

6. no

7. no

8. si

9. si

10. si

11. si

12. no

13. no

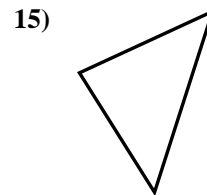

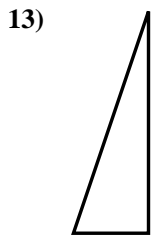
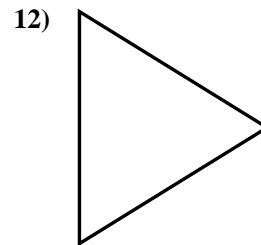
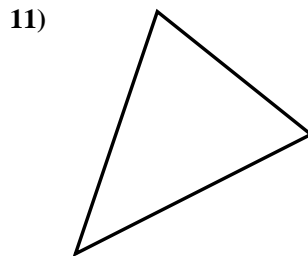
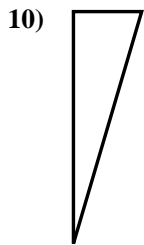
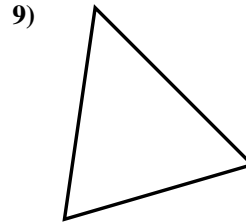
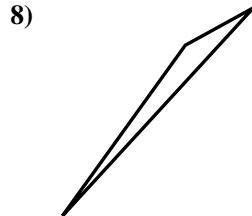
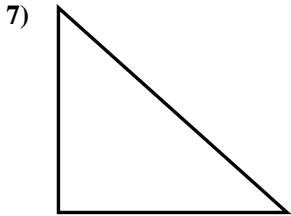
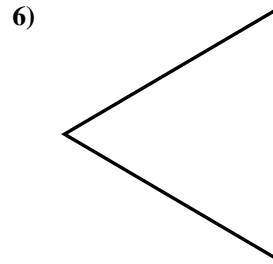
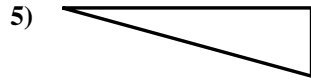
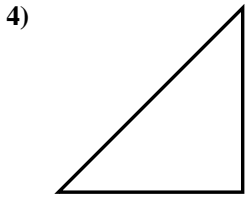
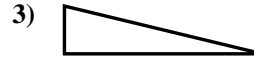
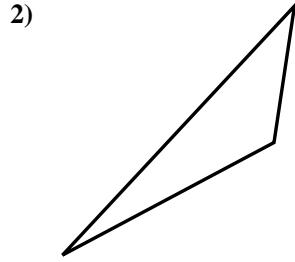
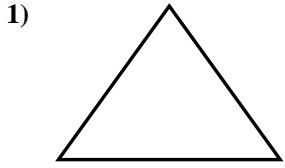
14. no

15. si



Determina se i triangoli mostrati sono rettangoli oppure no.

Risposte

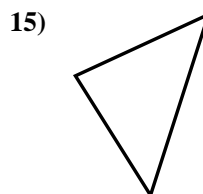

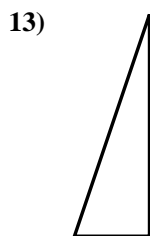
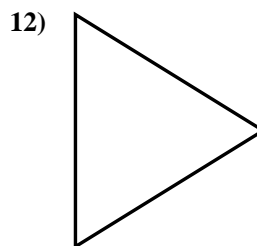
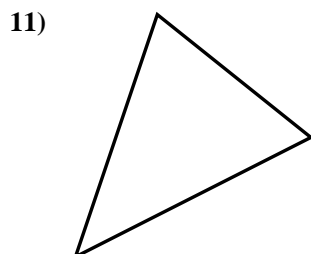
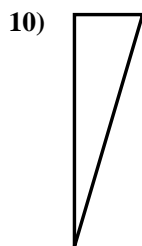
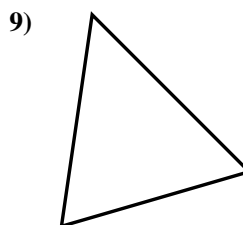
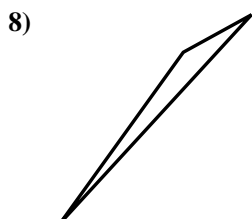
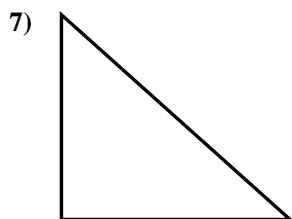
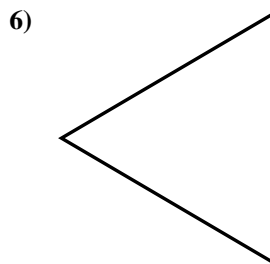
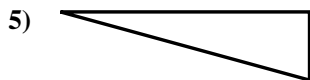
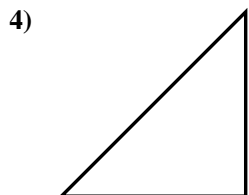
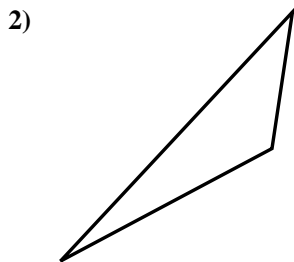
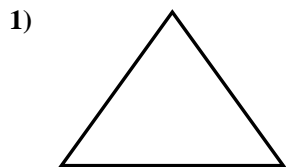


- 1. _____
- 2. _____
- 3. _____
- 4. _____
- 5. _____
- 6. _____
- 7. _____
- 8. _____
- 9. _____
- 10. _____
- 11. _____
- 12. _____
- 13. _____
- 14. _____
- 15. _____



Determina se i triangoli mostrati sono rettangoli oppure no.

Risposte



1. no

2. no

3. si

4. si

5. si

6. no

7. si

8. no

9. no

10. si

11. no

12. no

13. si

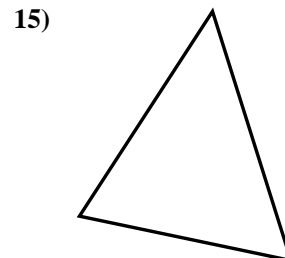
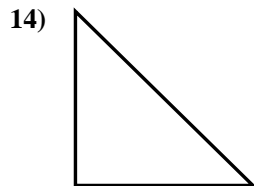
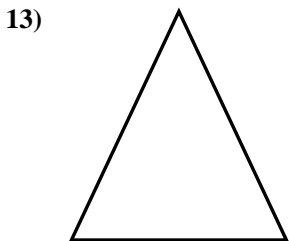
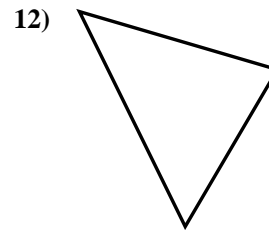
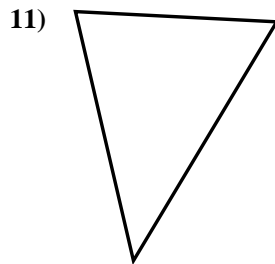
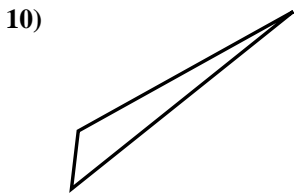
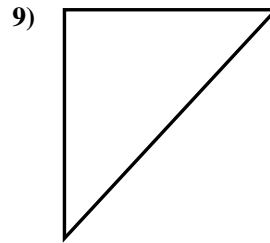
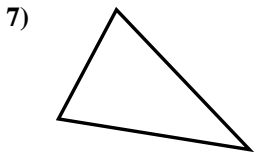
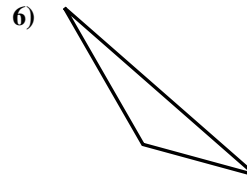
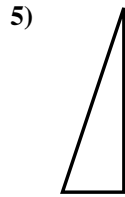
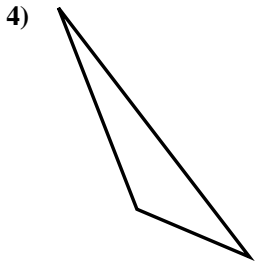
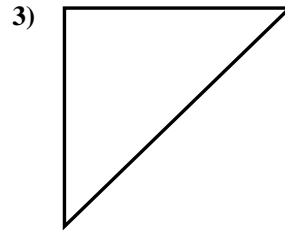
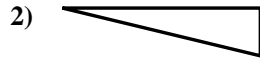
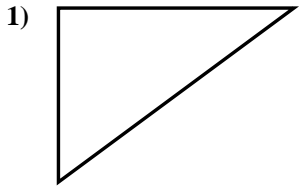
14. no

15. no



Determina se i triangoli mostrati sono rettangoli oppure no.

Risposte

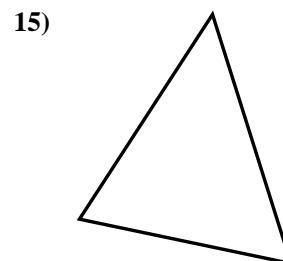
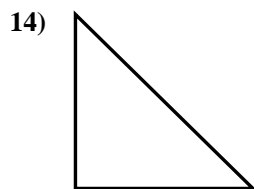
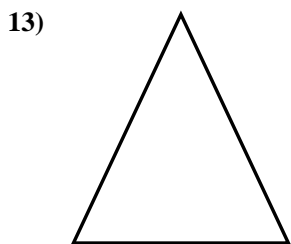
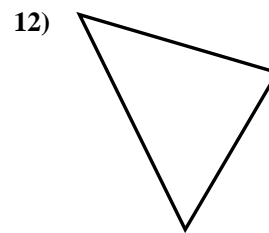
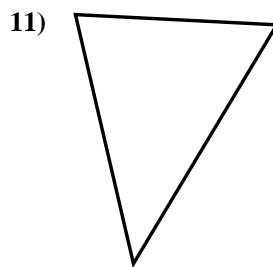
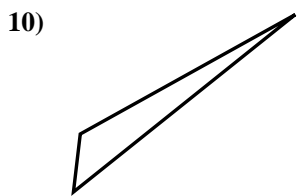
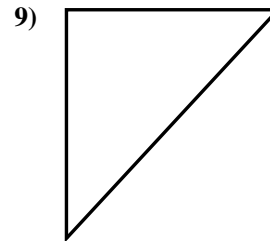
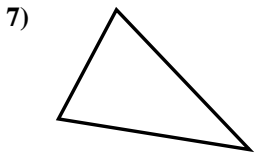
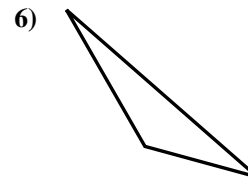
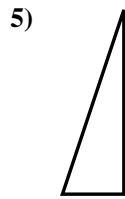
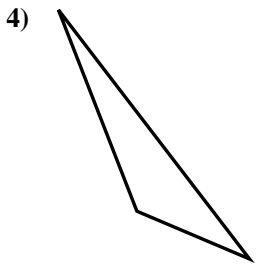
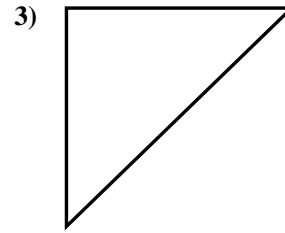
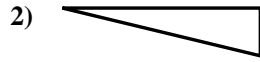
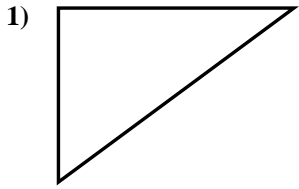


- 1. _____
- 2. _____
- 3. _____
- 4. _____
- 5. _____
- 6. _____
- 7. _____
- 8. _____
- 9. _____
- 10. _____
- 11. _____
- 12. _____
- 13. _____
- 14. _____
- 15. _____



Determina se i triangoli mostrati sono rettangoli oppure no.

Risposte



1. si

2. si

3. si

4. no

5. si

6. no

7. no

8. si

9. si

10. no

11. no

12. no

13. no

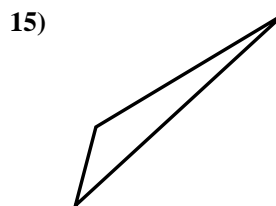
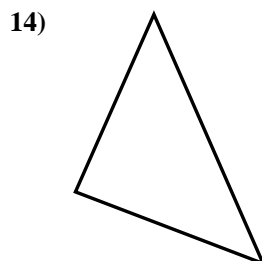
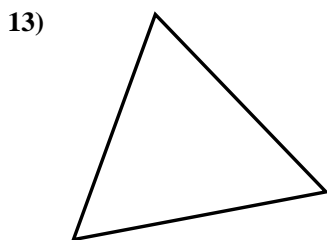
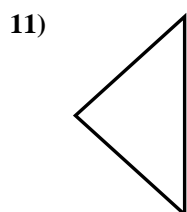
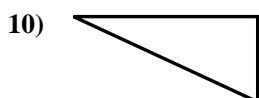
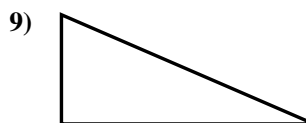
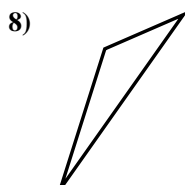

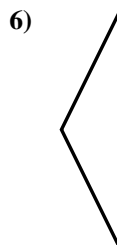

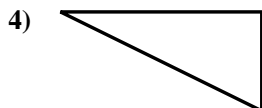
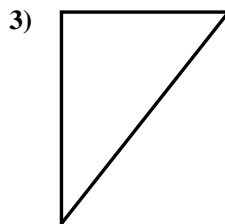
14. si

15. no



Determina se i triangoli mostrati sono rettangoli oppure no.

Risposte

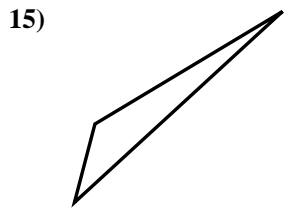
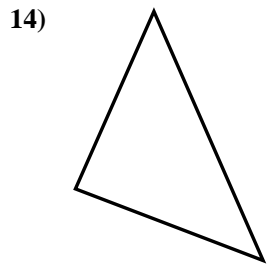
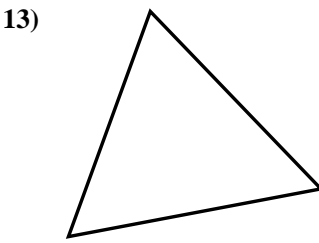

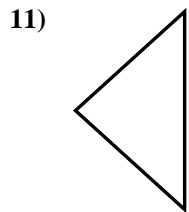
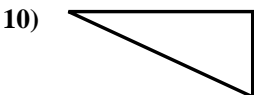
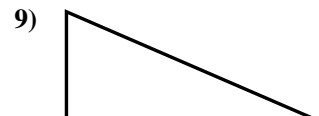
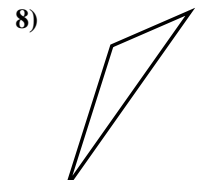

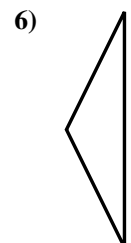

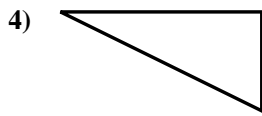
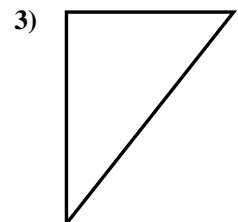
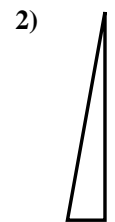


- 1. _____
- 2. _____
- 3. _____
- 4. _____
- 5. _____
- 6. _____
- 7. _____
- 8. _____
- 9. _____
- 10. _____
- 11. _____
- 12. _____
- 13. _____
- 14. _____
- 15. _____



Determina se i triangoli mostrati sono rettangoli oppure no.

Risposte



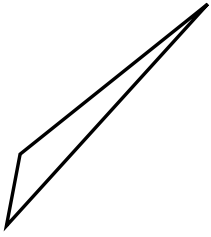
- 1. **si**
- 2. **si**
- 3. **si**
- 4. **si**
- 5. **no**
- 6. **no**
- 7. **no**
- 8. **no**
- 9. **si**
- 10. **si**
- 11. **no**
- 12. **si**
- 13. **no**
- 14. **si**
- 15. **no**



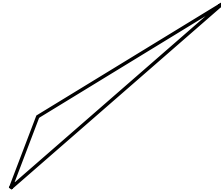
Determina se i triangoli mostrati sono rettangoli oppure no.

Risposte

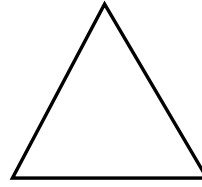
1)



2)



3)



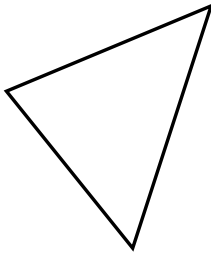
1. _____

2. _____

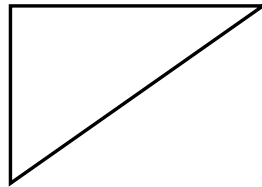
3. _____

4. _____


4)



5)



6)




5. _____

6. _____

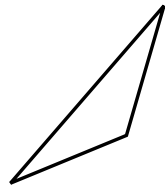
7. _____

8. _____

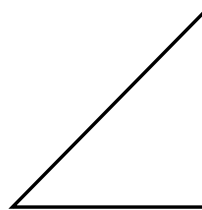
7)



8)



9)



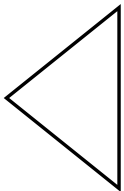
9. _____

10. _____

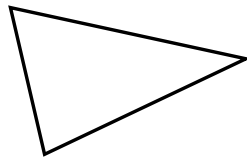
11. _____

12. _____

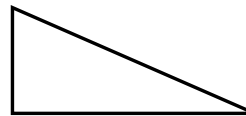
10)



11)



12)

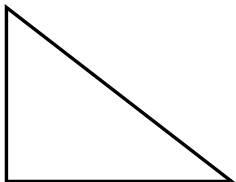


13. _____

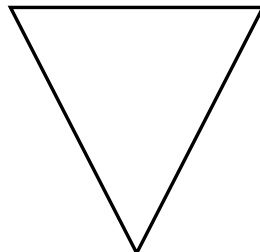
14. _____

15. _____

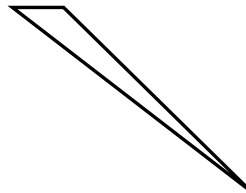
13)



14)



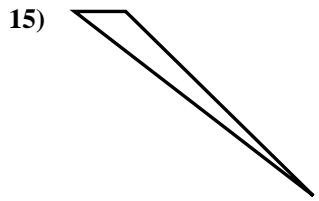
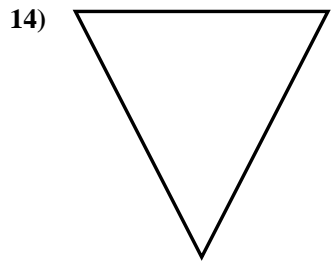
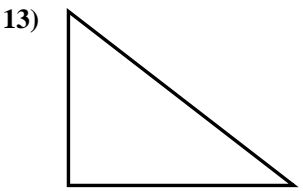
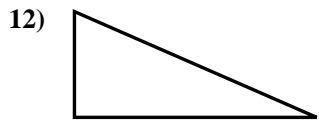
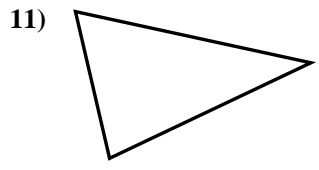
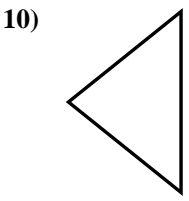
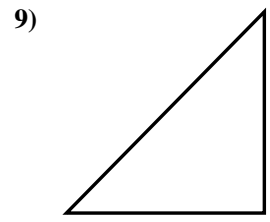
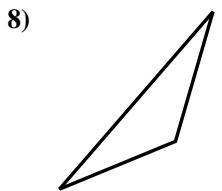
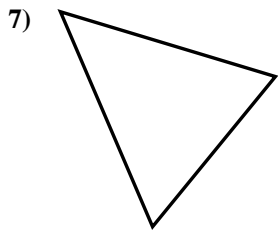
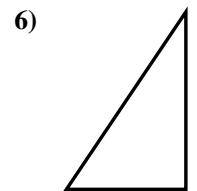
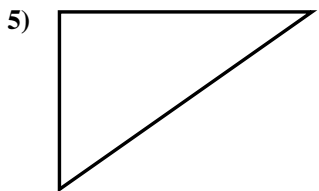
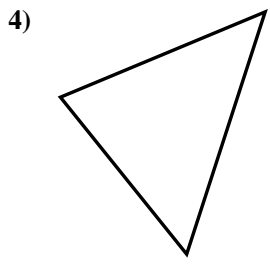
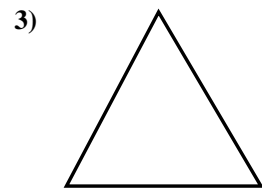
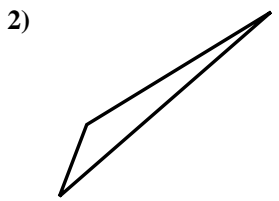
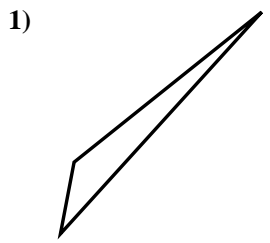
15)





Determina se i triangoli mostrati sono rettangoli oppure no.

Risposte

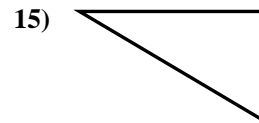
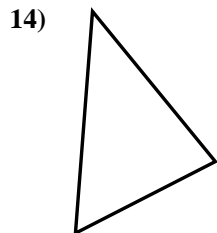
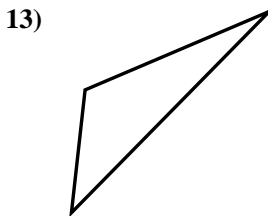
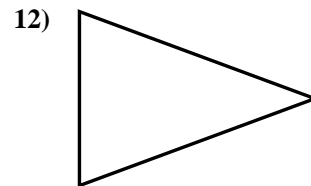
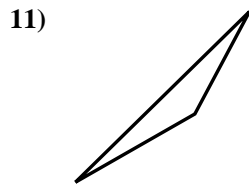
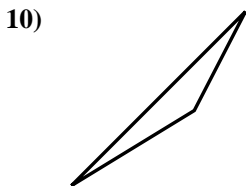
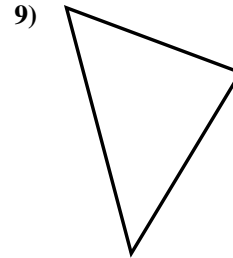
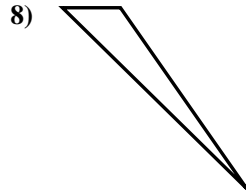
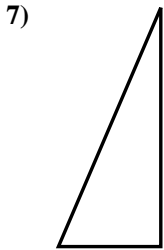
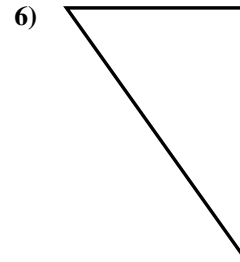
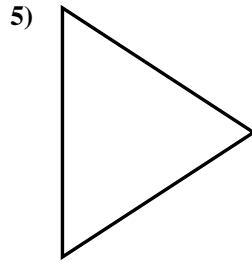
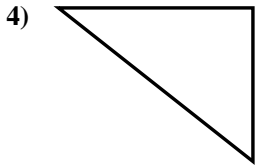
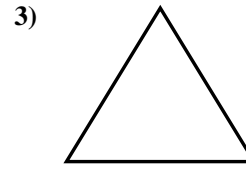
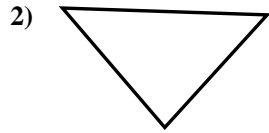
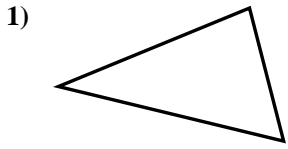


- 1. no
- 2. no
- 3. no
- 4. no
- 5. si
- 6. si
- 7. no
- 8. no
- 9. si
- 10. no
- 11. no
- 12. si
- 13. si
- 14. no
- 15. no



Determina se i triangoli mostrati sono rettangoli oppure no.

Risposte

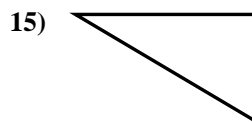
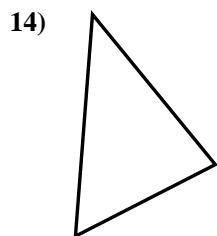
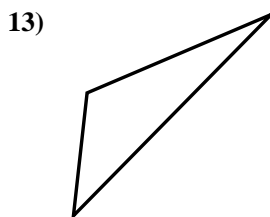
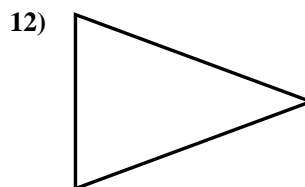
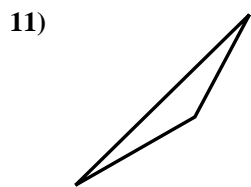
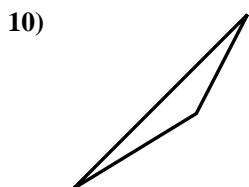
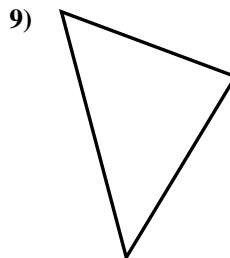
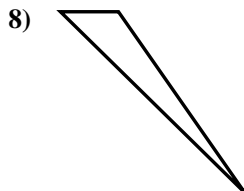
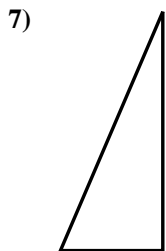
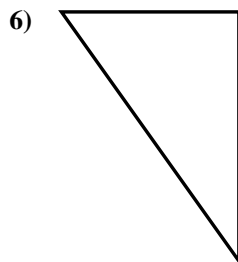
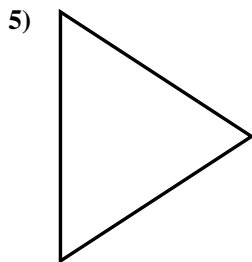
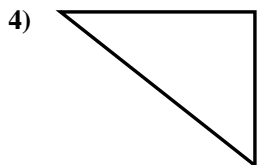
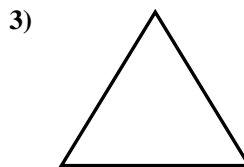
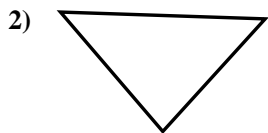
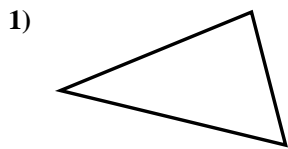


- 1. _____
- 2. _____
- 3. _____
- 4. _____
- 5. _____
- 6. _____
- 7. _____
- 8. _____
- 9. _____
- 10. _____
- 11. _____
- 12. _____
- 13. _____
- 14. _____
- 15. _____



Determina se i triangoli mostrati sono rettangoli oppure no.

Risposte



1. no

2. no

3. no

4. si

5. no

6. si

7. si

8. no

9. no

10. no

11. no

12. no

13. no

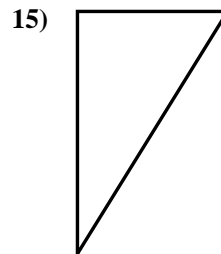
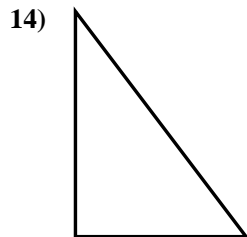
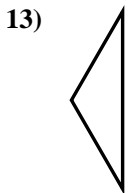
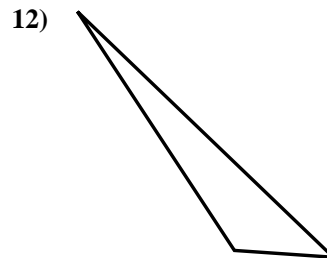
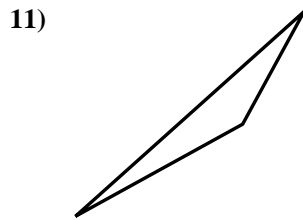
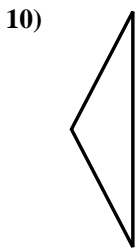
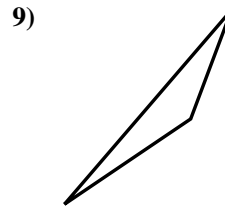
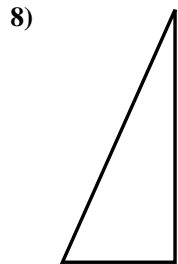

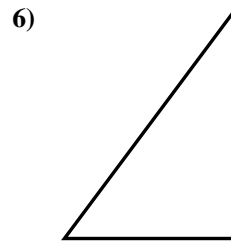
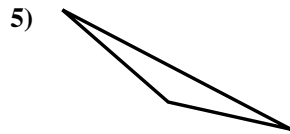
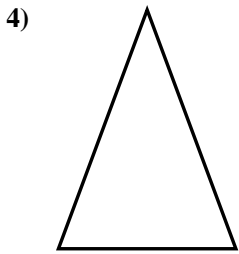
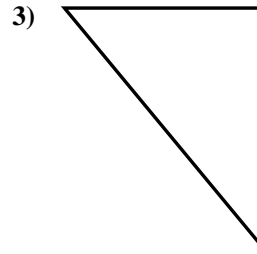
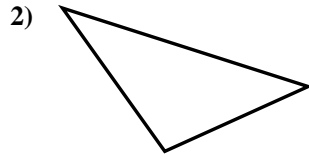
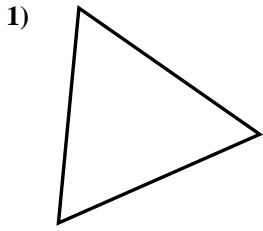
14. no

15. si



Determina se i triangoli mostrati sono rettangoli oppure no.

Risposte

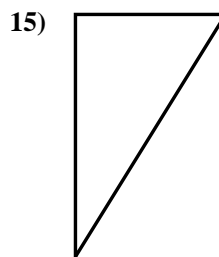
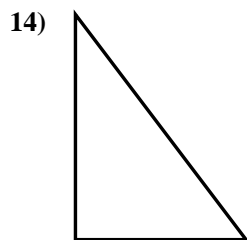
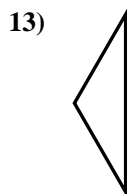
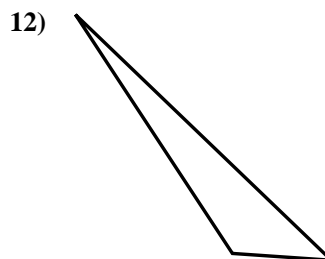

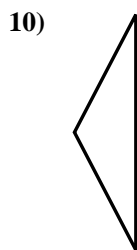
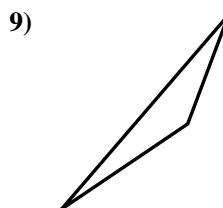
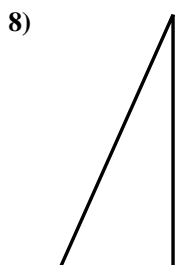

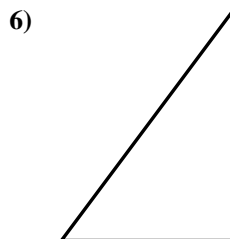
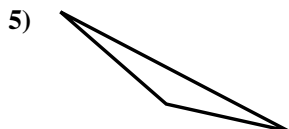
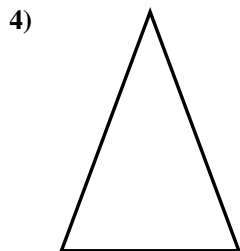
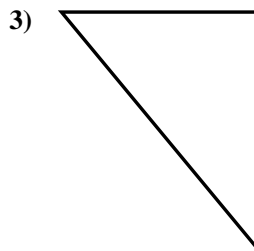
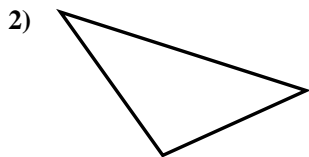
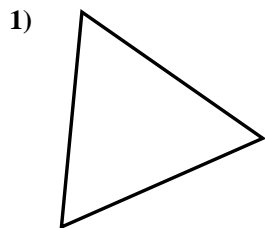


- 1. _____
- 2. _____
- 3. _____
- 4. _____
- 5. _____
- 6. _____
- 7. _____
- 8. _____
- 9. _____
- 10. _____
- 11. _____
- 12. _____
- 13. _____
- 14. _____
- 15. _____



Determina se i triangoli mostrati sono rettangoli oppure no.

Risposte



1. no

2. no

3. si

4. no

5. no

6. si

7. no

8. si

9. no

10. no

11. no

12. no

13. no

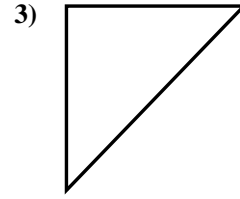
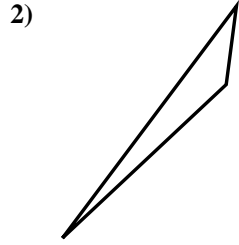
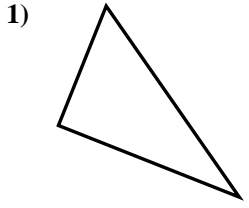
14. si

15. si



Determina se i triangoli mostrati sono rettangoli oppure no.

Risposte

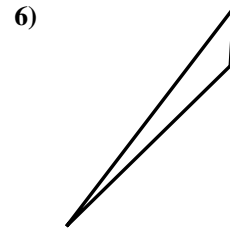
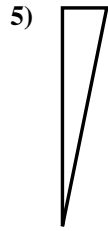
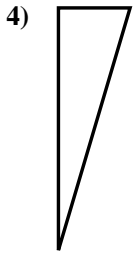


1. _____

2. _____

3. _____

4. _____

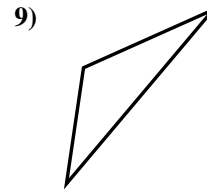
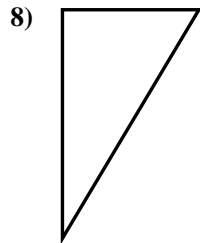
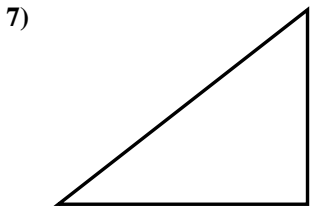


5. _____

6. _____

7. _____

8. _____

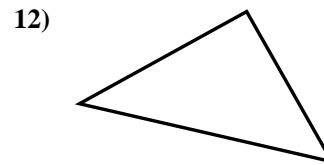
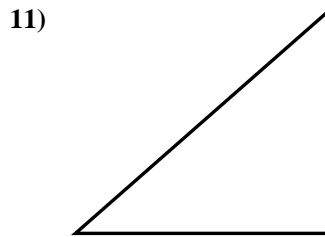
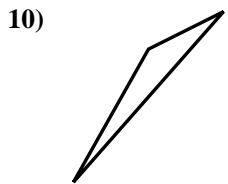


9. _____

10. _____

11. _____

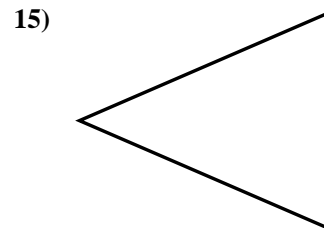
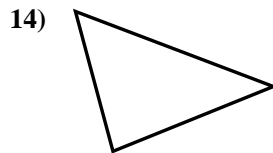
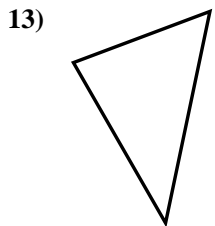
12. _____



13. _____

14. _____

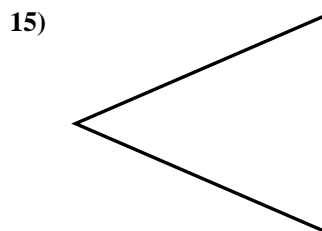
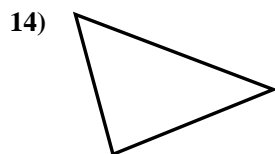
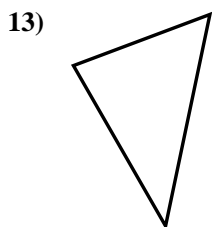
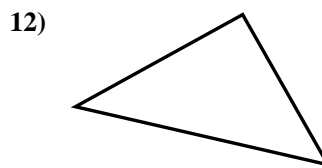
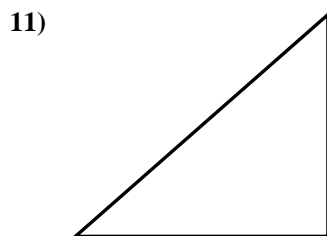
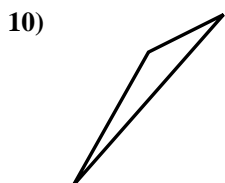
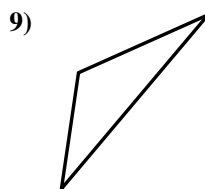
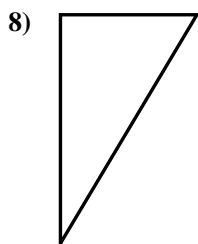
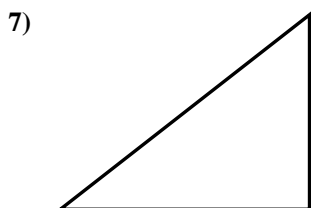
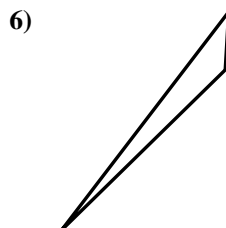
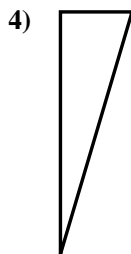
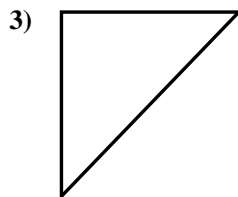
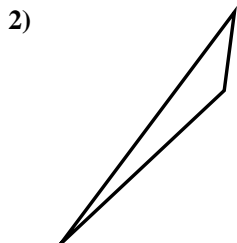
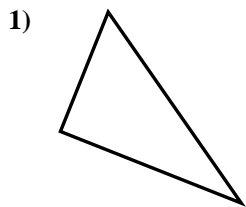
15. _____





Determina se i triangoli mostrati sono rettangoli oppure no.

Risposte



1. si

2. no

3. si

4. si

5. si

6. no

7. si

8. si

9. no

10. no

11. si

12. si

13. no

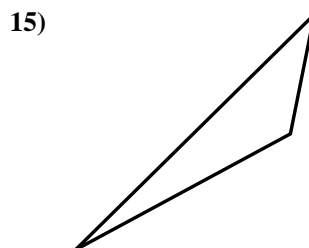
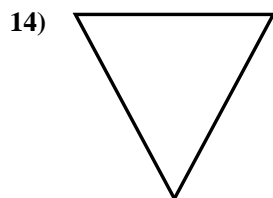
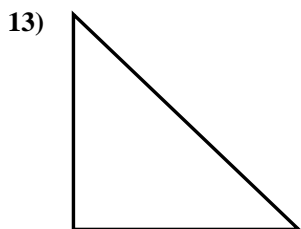
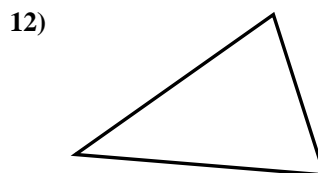
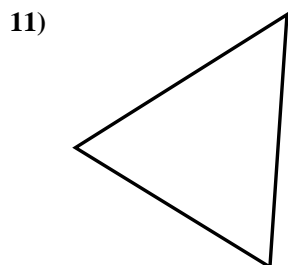
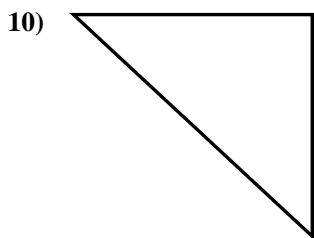
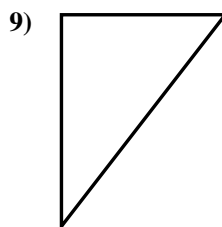
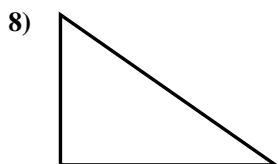
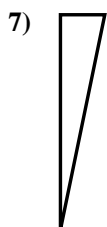
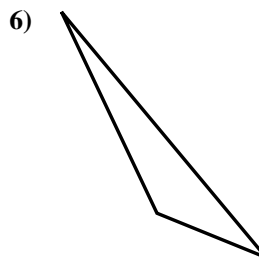
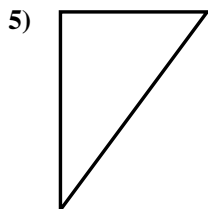
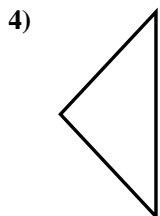
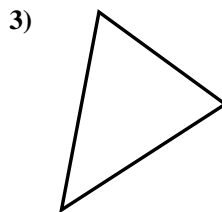
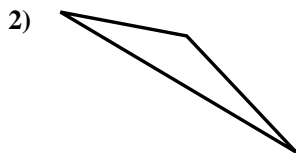
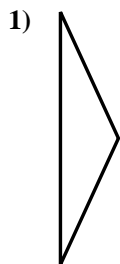
14. no

15. no



Determina se i triangoli mostrati sono rettangoli oppure no.

Risposte

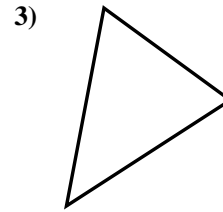
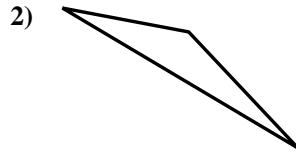
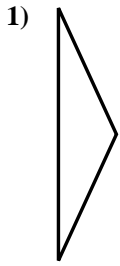


- 1. _____
- 2. _____
- 3. _____
- 4. _____
- 5. _____
- 6. _____
- 7. _____
- 8. _____
- 9. _____
- 10. _____
- 11. _____
- 12. _____
- 13. _____
- 14. _____
- 15. _____

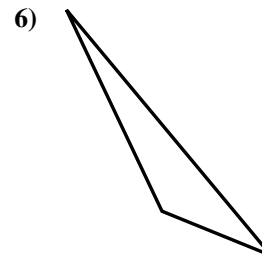
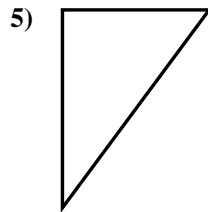
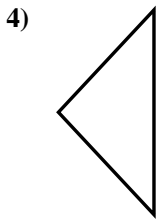


Determina se i triangoli mostrati sono rettangoli oppure no.

Risposte



1. no



2. no

3. no

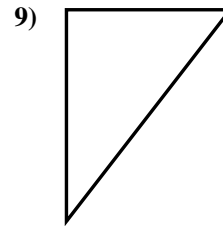
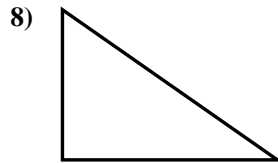
4. no

5. si

6. no

7. si

8. si

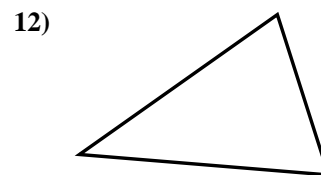
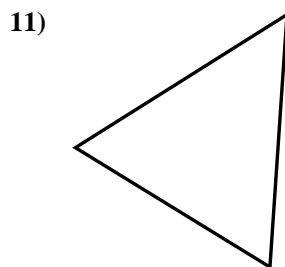
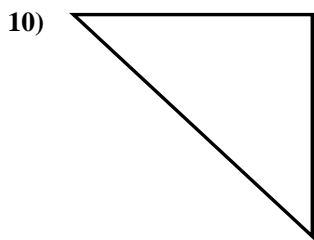


9. si

10. si

11. no

12. no



13. si

14. no

15. no

