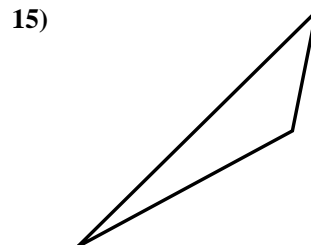
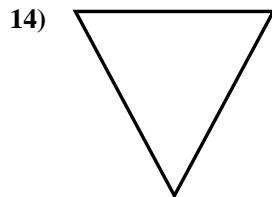
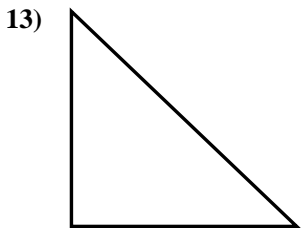
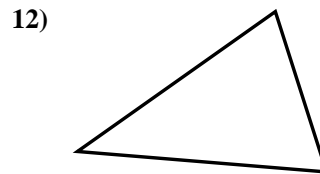
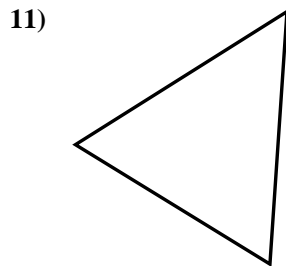
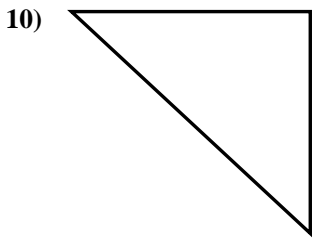
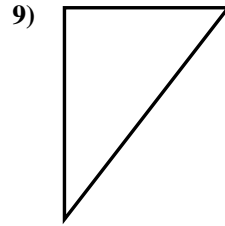
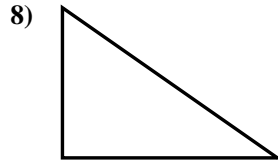
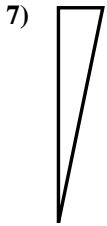
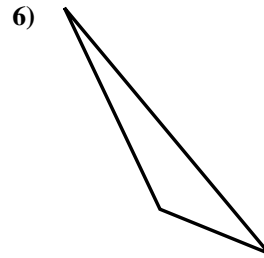
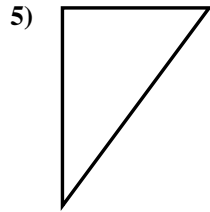
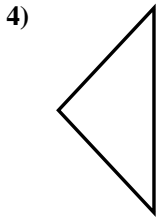
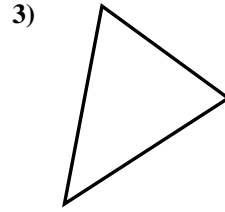
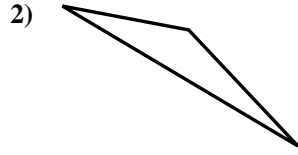
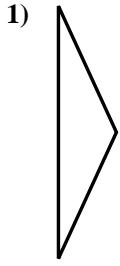




Determina se i triangoli mostrati sono rettangoli oppure no.

**Risposte**

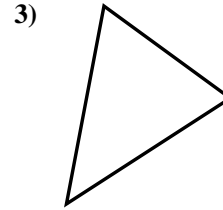
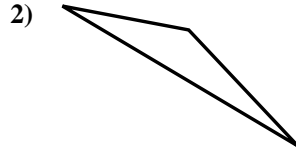
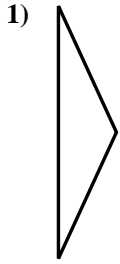


- 1. \_\_\_\_\_
- 2. \_\_\_\_\_
- 3. \_\_\_\_\_
- 4. \_\_\_\_\_
- 5. \_\_\_\_\_
- 6. \_\_\_\_\_
- 7. \_\_\_\_\_
- 8. \_\_\_\_\_
- 9. \_\_\_\_\_
- 10. \_\_\_\_\_
- 11. \_\_\_\_\_
- 12. \_\_\_\_\_
- 13. \_\_\_\_\_
- 14. \_\_\_\_\_
- 15. \_\_\_\_\_

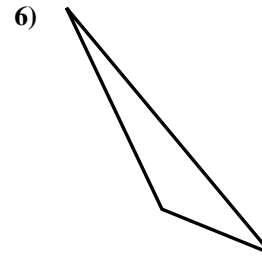
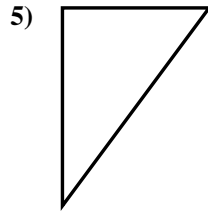
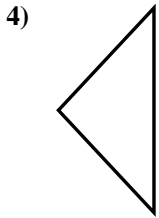


Determina se i triangoli mostrati sono rettangoli oppure no.

**Risposte**



1. no



2. no

3. no

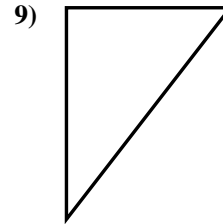
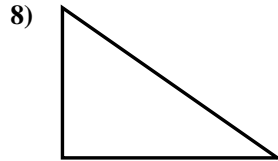
4. no

5. si

6. no

7. si

8. si

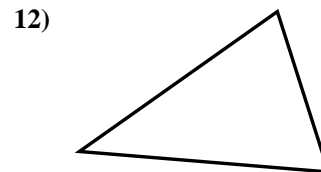
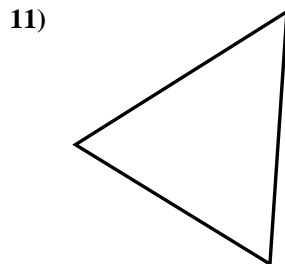
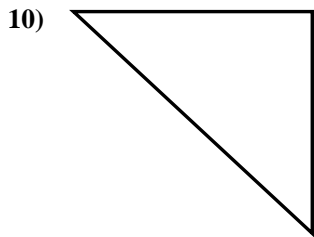


9. si

10. si

11. no

12. no



13. si

14. no

15. no

