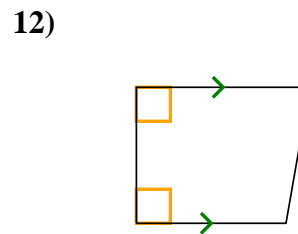
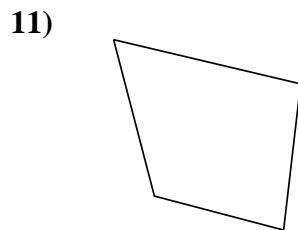
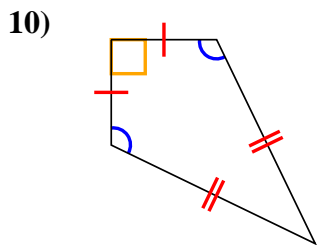
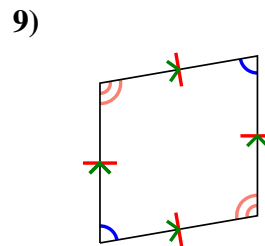
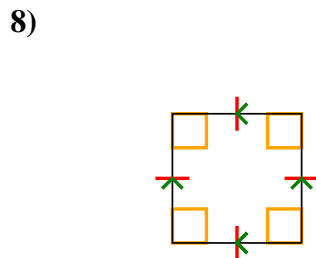
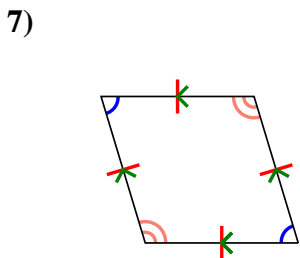
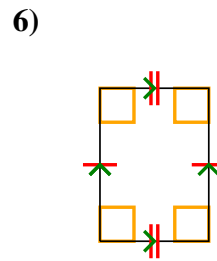
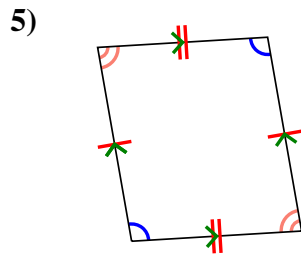
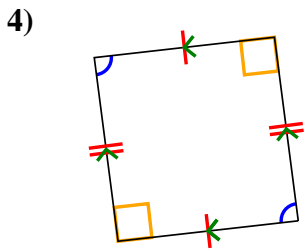
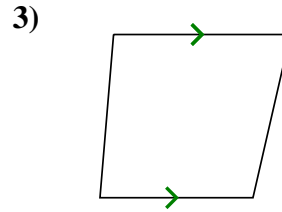
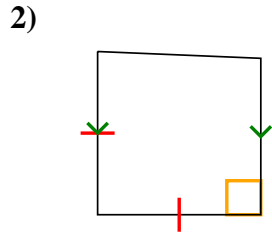
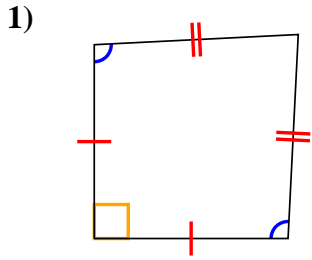




Determina se la forma è un Quadrilatero (Q), Deltoide (D), Trapezio (T), Parallelogramma (P), Rombo (O), Rettangolo (R) o Quadrato (Q). Possono essere più di uno

Risposte

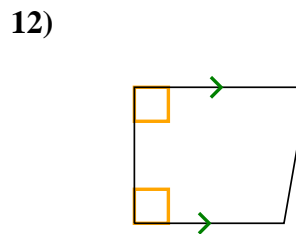
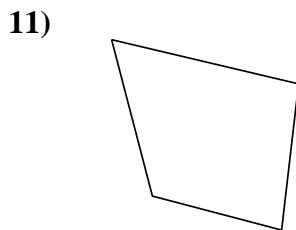
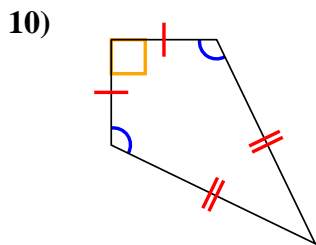
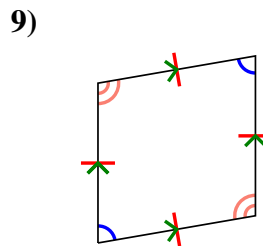
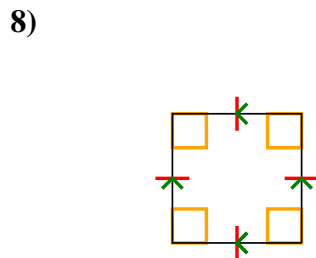
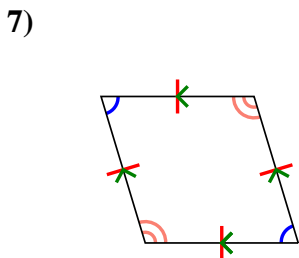
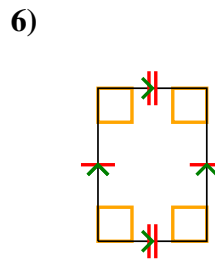
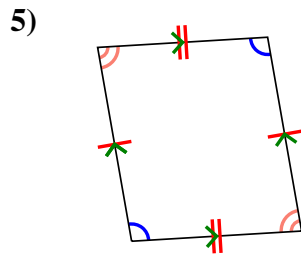
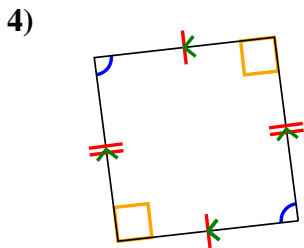
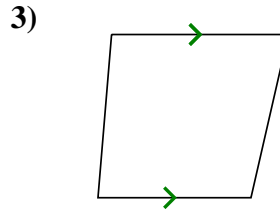
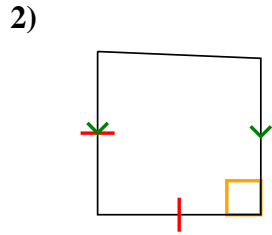
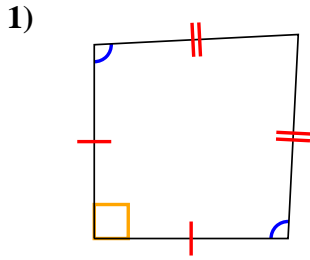


1. _____
2. _____
3. _____
4. _____
5. _____
6. _____
7. _____
8. _____
9. _____
10. _____
11. _____
12. _____



Determina se la forma è un Quadrilatero (Q), Deltoide (D), Trapezio (T), Parallelogramma (P), Rombo (O), Rettangolo (R) o Quadrato (Q). Possono essere più di uno

Risposte



1. Q,K
2. Q,T
3. Q,T
4. Q,P
5. Q,P
6. Q,P,R
7. Q,P,H
8. Q,P,H,R,S
9. Q,P,H
10. Q,K
11. Q
12. Q,T