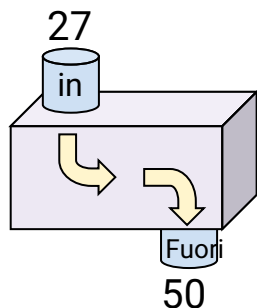
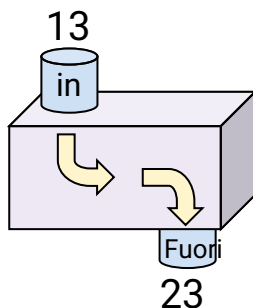


Determina quale regola viene usata nelle seguenti funzioni.

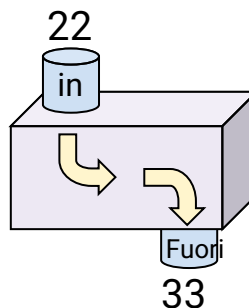
Es)



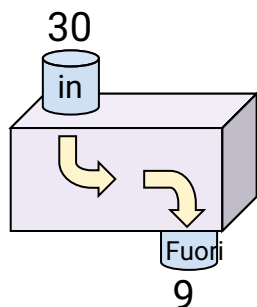
1)



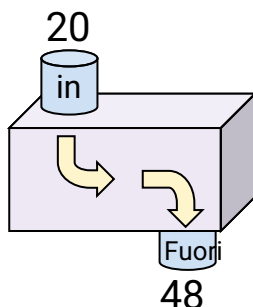
2)



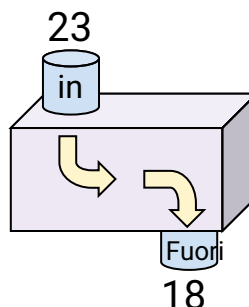
3)



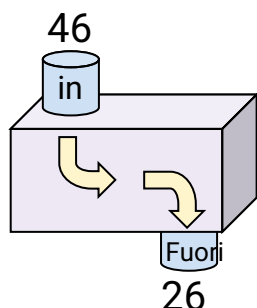
4)



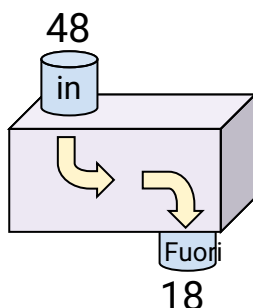
5)



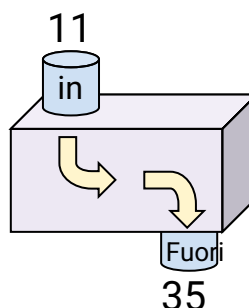
6)



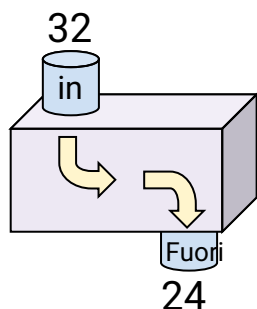
7)



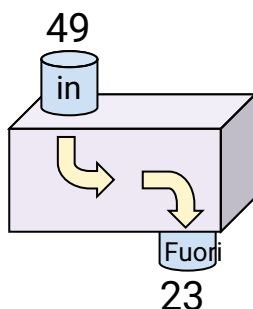
8)



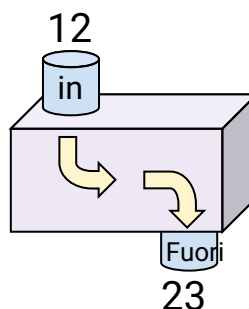
9)



10)



11)



Risposte

Es. **Aggiungi 23**

1. Aggiungi 10

2. Aggiungi 11

3. **Sottrai 21**

4. **Aggiungi 28**

5 **Sottrai 5**

6 **Sottrai 20**

7 **Sottrai 30**

8. **Aggiungi 24**

9 **Sottrai 8**

10 **Sottrai 26**

11. **Aggiungi 11**