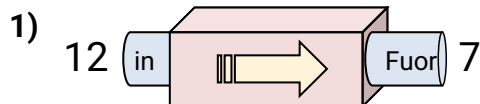
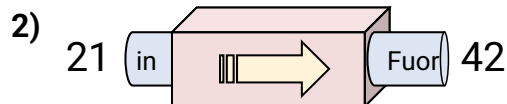
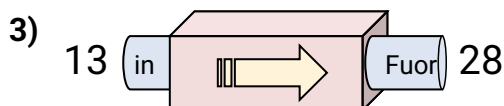


**Determina quale regola viene usata nelle seguenti funzioni.****Risposte**

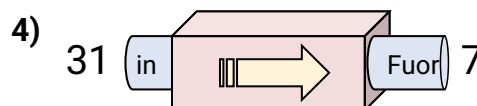
- A. Sottrai 3
- B. Sottrai 10
- C. Sottrai 5
- D. Aggiungi 6



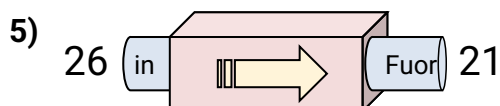
- A. Aggiungi 24
- B. Aggiungi 20
- C. Aggiungi 21
- D. Aggiungi 25



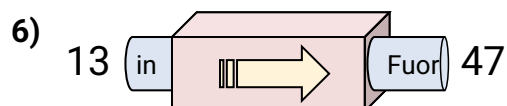
- A. Sottrai 11
- B. Aggiungi 15
- C. Aggiungi 16
- D. Aggiungi 13



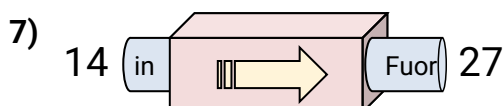
- A. Aggiungi 21
- B. Sottrai 24
- C. Sottrai 28
- D. Sottrai 20



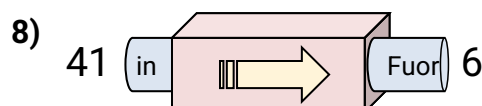
- A. Sottrai 5
- B. Sottrai 4
- C. Aggiungi 6
- D. Aggiungi 10



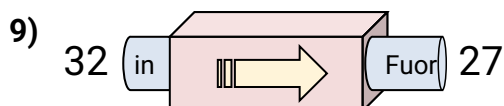
- A. Aggiungi 32
- B. Aggiungi 34
- C. Aggiungi 35
- D. Sottrai 39



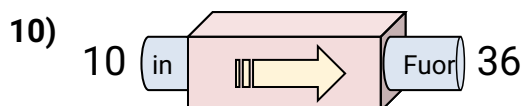
- A. Aggiungi 14
- B. Aggiungi 17
- C. Sottrai 14
- D. Aggiungi 13



- A. Sottrai 35
- B. Aggiungi 39
- C. Sottrai 38
- D. Aggiungi 35



- A. Sottrai 8
- B. Sottrai 5
- C. Sottrai 3
- D. Aggiungi 10

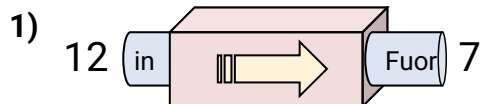


- A. Sottrai 21
- B. Aggiungi 25
- C. Aggiungi 26
- D. Aggiungi 22

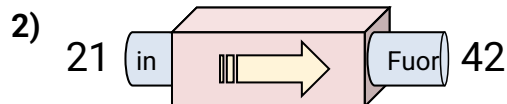
- 1. _____
- 2. _____
- 3. _____
- 4. _____
- 5. _____
- 6. _____
- 7. _____
- 8. _____
- 9. _____
- 10. _____



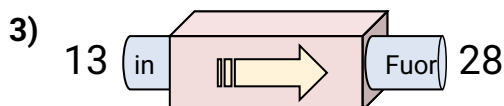
Determina quale regola viene usata nelle seguenti funzioni.

Risposte

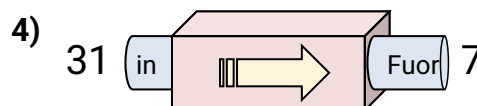
- A. Sottrai 3
- B. Sottrai 10
- C. Sottrai 5
- D. Aggiungi 6



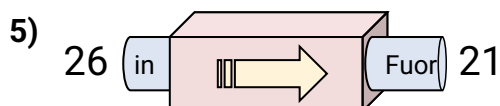
- A. Aggiungi 24
- B. Aggiungi 20
- C. Aggiungi 21
- D. Aggiungi 25



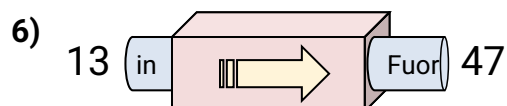
- A. Sottrai 11
- B. Aggiungi 15
- C. Aggiungi 16
- D. Aggiungi 13



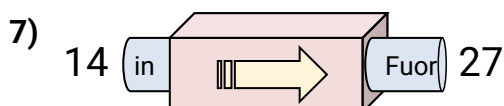
- A. Aggiungi 21
- B. Sottrai 24
- C. Sottrai 28
- D. Sottrai 20



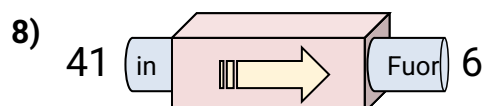
- A. Sottrai 5
- B. Sottrai 4
- C. Aggiungi 6
- D. Aggiungi 10



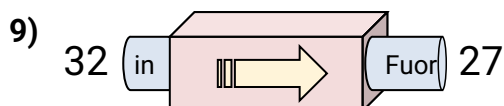
- A. Aggiungi 32
- B. Aggiungi 34
- C. Aggiungi 35
- D. Sottrai 39



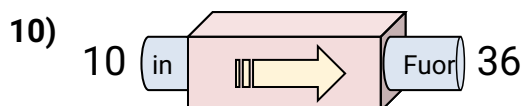
- A. Aggiungi 14
- B. Aggiungi 17
- C. Sottrai 14
- D. Aggiungi 13



- A. Sottrai 35
- B. Aggiungi 39
- C. Sottrai 38
- D. Aggiungi 35



- A. Sottrai 8
- B. Sottrai 5
- C. Sottrai 3
- D. Aggiungi 10



- A. Sottrai 21
- B. Aggiungi 25
- C. Aggiungi 26
- D. Aggiungi 22

- 1. **C**
- 2. **C**
- 3. **B**
- 4. **B**
- 5. **A**
- 6. **B**
- 7. **D**
- 8. **A**
- 9. **B**
- 10. **C**