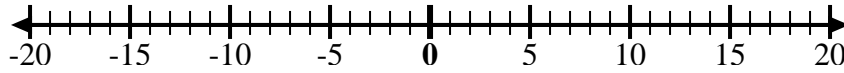
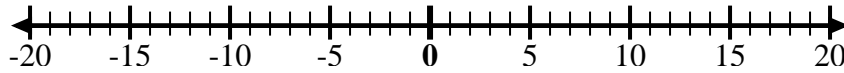
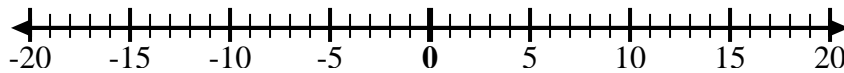
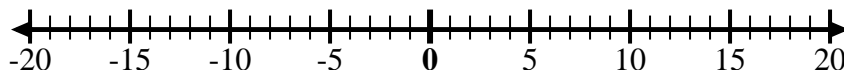
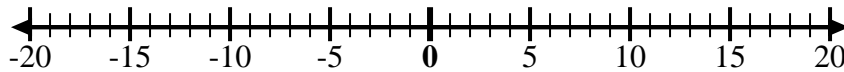
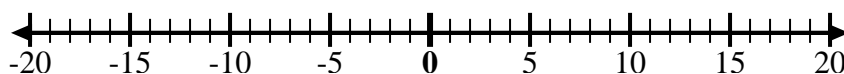
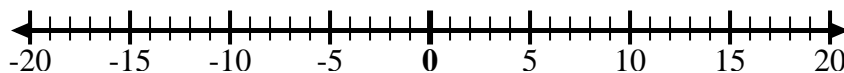
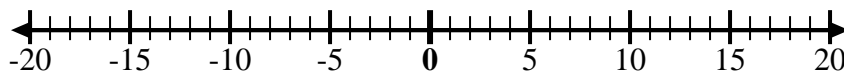
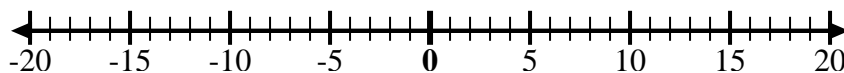
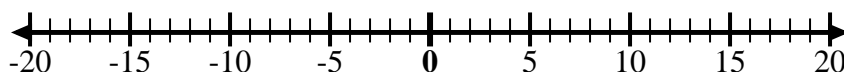
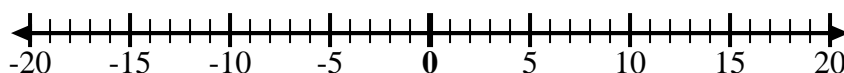




Usa le linee dei numeri per mostrare ogni espressione e risolvere.

Es) Inizia da 7 e  
aggiungi -121) Inizia da -2 e  
aggiungi 52) Inizia da 8 e  
aggiungi -133) Inizia da -7 e  
aggiungi -24) Inizia da -4 e  
aggiungi -35) Inizia da -3 e  
aggiungi -26) Inizia da -7 e  
aggiungi 57) Inizia da -6 e  
aggiungi -28) Inizia da 1 e  
aggiungi -119) Inizia da -7 e  
aggiungi 810) Inizia da 1 e  
aggiungi -911) Inizia da -3 e  
aggiungi -312) Inizia da 2 e  
aggiungi -11**Risposte**Es.  $7 + -12 = -5$ 

1. \_\_\_\_\_

2. \_\_\_\_\_

3. \_\_\_\_\_

4. \_\_\_\_\_

5. \_\_\_\_\_

6. \_\_\_\_\_

7. \_\_\_\_\_

8. \_\_\_\_\_

9. \_\_\_\_\_

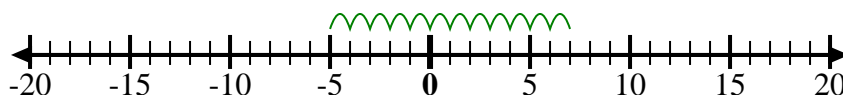
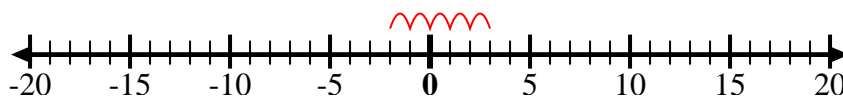
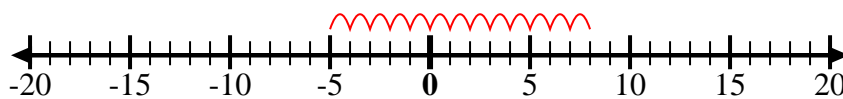
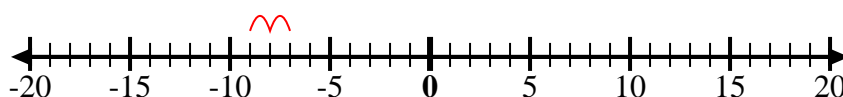
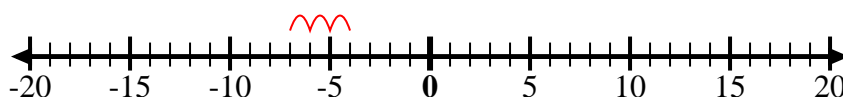
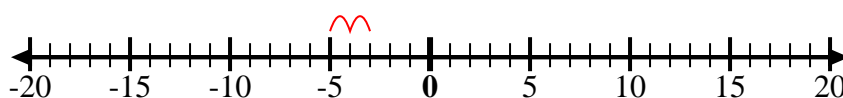
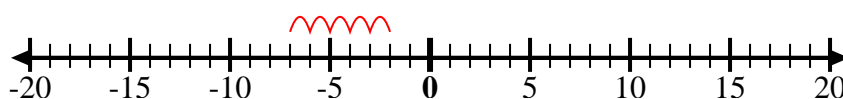
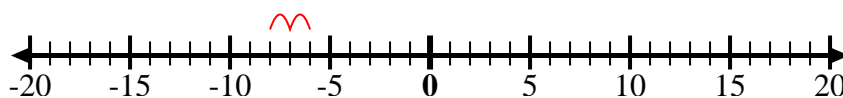
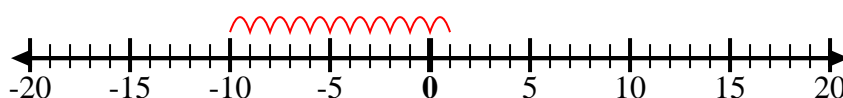
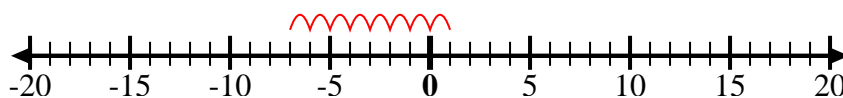
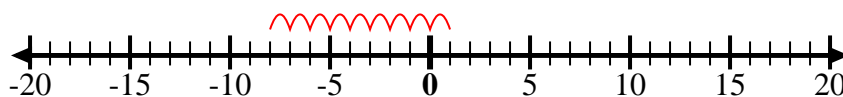
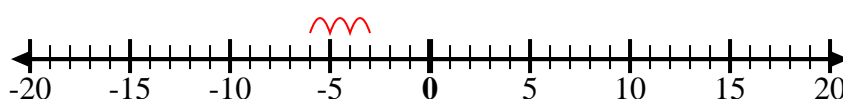
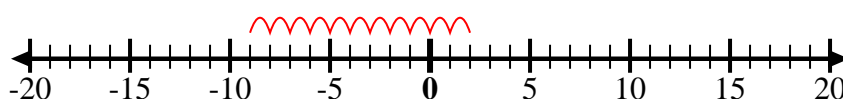
10. \_\_\_\_\_

11. \_\_\_\_\_

12. \_\_\_\_\_



Usa le linee dei numeri per mostrare ogni espressione e risolvere.

Es) Inizia da 7 e  
aggiungi -121) Inizia da -2 e  
aggiungi 52) Inizia da 8 e  
aggiungi -133) Inizia da -7 e  
aggiungi -24) Inizia da -4 e  
aggiungi -35) Inizia da -3 e  
aggiungi -26) Inizia da -7 e  
aggiungi 57) Inizia da -6 e  
aggiungi -28) Inizia da 1 e  
aggiungi -119) Inizia da -7 e  
aggiungi 810) Inizia da 1 e  
aggiungi -911) Inizia da -3 e  
aggiungi -312) Inizia da 2 e  
aggiungi -11**Risposte**

Es.  $7 + -12 = -5$

1.  $-2 + 5 = 3$

2.  $8 + -13 = -5$

3.  $-7 + -2 = -9$

4.  $-4 + -3 = -7$

5.  $-3 + -2 = -5$

6.  $-7 + 5 = -2$

7.  $-6 + -2 = -8$

8.  $1 + -11 = -10$

9.  $-7 + 8 = 1$

10.  $1 + -9 = -8$

11.  $-3 + -3 = -6$

12.  $2 + -11 = -9$