




Risolvi ogni problema.


Risposte

1) Quale lettera indica meglio -27?




1. _____

2) Quale lettera indica meglio -16?




2. _____

3) Quale lettera indica meglio -18?



3. _____

4) Quale lettera indica meglio -15?




4. _____

5) Quale lettera indica meglio -91?




5. _____

6) Quale lettera indica meglio -75?




6. _____

7) Quale lettera indica meglio -81?



7. _____

8) Quale lettera indica meglio -10?




8. _____

9) Quale lettera indica meglio -59?



9. _____

10) Quale lettera indica meglio -87?




10. _____



Risolvi ogni problema.

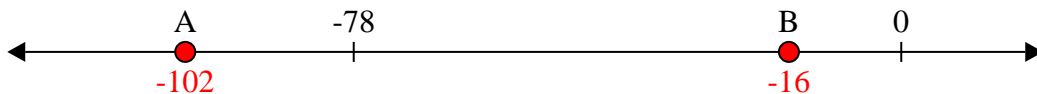
Risposte

1) Quale lettera indica meglio -27?



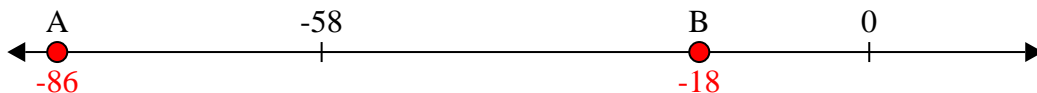
1. **B**

2) Quale lettera indica meglio -16?



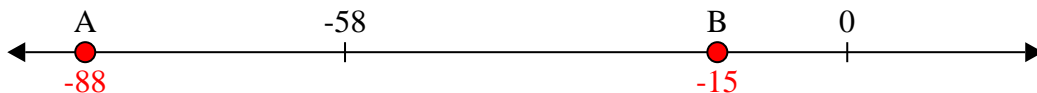
2. **B**

3) Quale lettera indica meglio -18?



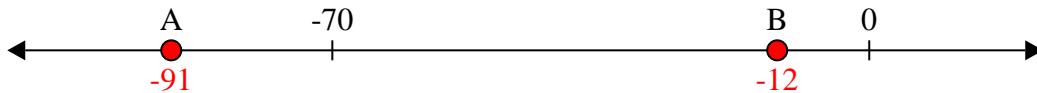
3. **B**

4) Quale lettera indica meglio -15?



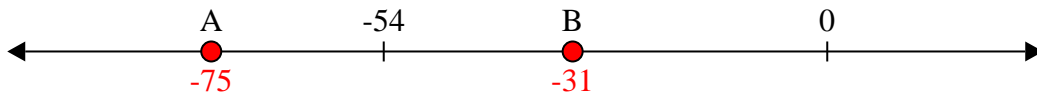
4. **B**

5) Quale lettera indica meglio -91?




5. **A**

6) Quale lettera indica meglio -75?




6. **A**

7) Quale lettera indica meglio -81?



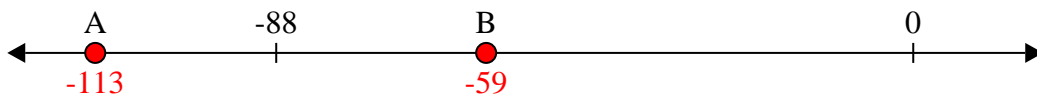
7. **A**

8) Quale lettera indica meglio -10?



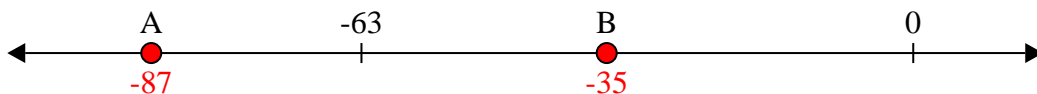
8. **B**

9) Quale lettera indica meglio -59?



9. **B**

10) Quale lettera indica meglio -87?




10. **A**



Risolvi ogni problema.


Risposte

1) Quale lettera indica meglio -28?



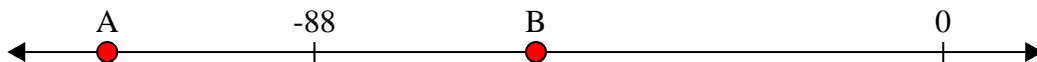
1. _____

2) Quale lettera indica meglio -26?



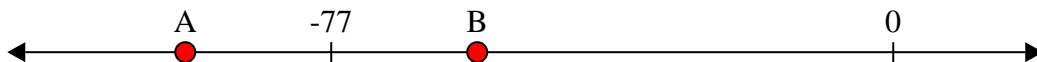
2. _____

3) Quale lettera indica meglio -117?



3. _____

4) Quale lettera indica meglio -97?



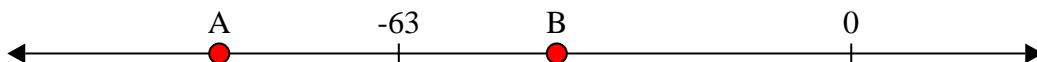
4. _____

5) Quale lettera indica meglio -113?




5. _____

6) Quale lettera indica meglio -88?



6. _____

7) Quale lettera indica meglio -22?




7. _____

8) Quale lettera indica meglio -25?




8. _____

9) Quale lettera indica meglio -82?



9. _____

10) Quale lettera indica meglio -120?




10. _____



Risolvi ogni problema.

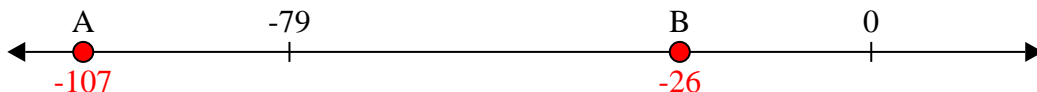
Risposte

1) Quale lettera indica meglio -28?



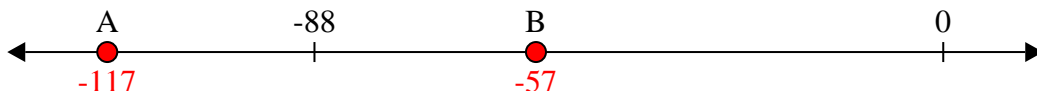
1. **B**

2) Quale lettera indica meglio -26?



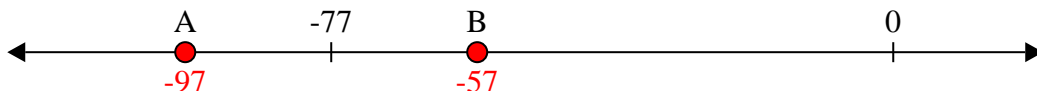
2. **B**

3) Quale lettera indica meglio -117?



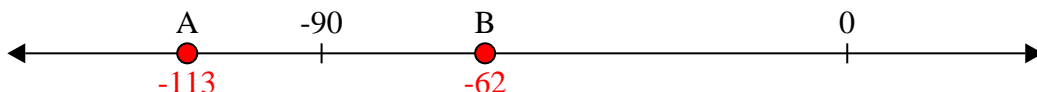
3. **A**

4) Quale lettera indica meglio -97?



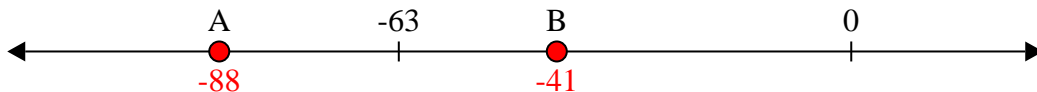
4. **A**

5) Quale lettera indica meglio -113?




5. **A**

6) Quale lettera indica meglio -88?




6. **A**

7) Quale lettera indica meglio -22?



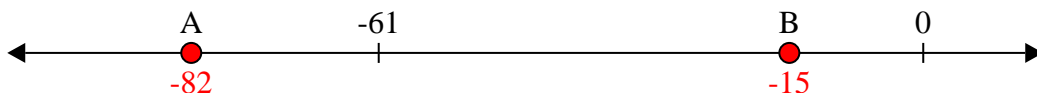
7. **B**

8) Quale lettera indica meglio -25?




8. **B**

9) Quale lettera indica meglio -82?



9. **A**

10) Quale lettera indica meglio -120?




10. **A**



Risolvi ogni problema.


Risposte

1) Quale lettera indica meglio -37?



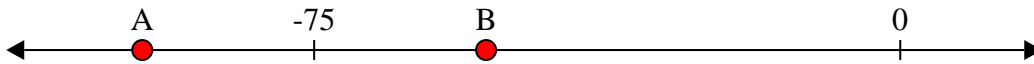
1. _____

2) Quale lettera indica meglio -113?




2. _____

3) Quale lettera indica meglio -97?




3. _____

4) Quale lettera indica meglio -80?




4. _____

5) Quale lettera indica meglio -40?




5. _____

6) Quale lettera indica meglio -101?




6. _____

7) Quale lettera indica meglio -22?




7. _____

8) Quale lettera indica meglio -105?




8. _____

9) Quale lettera indica meglio -115?



9. _____

10) Quale lettera indica meglio -97?



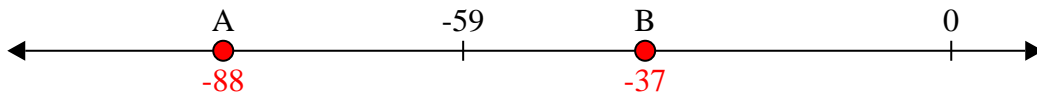
10. _____



Risolvi ogni problema.

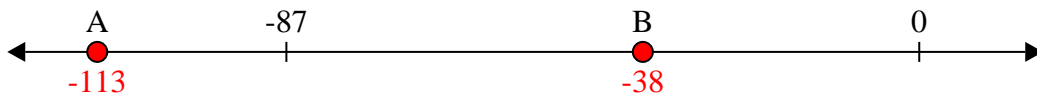
Risposte

1) Quale lettera indica meglio -37?



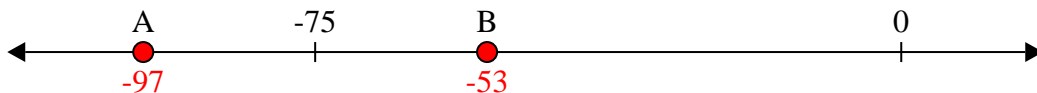
1. **B**

2) Quale lettera indica meglio -113?



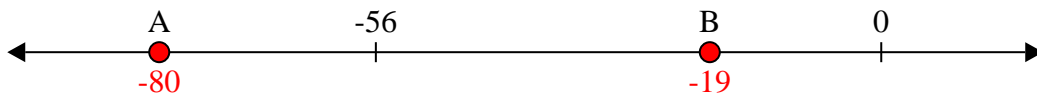
2. **A**

3) Quale lettera indica meglio -97?




3. **A**

4) Quale lettera indica meglio -80?




4. **A**

5) Quale lettera indica meglio -40?




5. **B**

6) Quale lettera indica meglio -101?




6. **A**

7) Quale lettera indica meglio -22?




7. **B**

8) Quale lettera indica meglio -105?



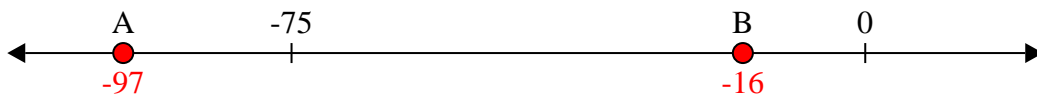
8. **A**

9) Quale lettera indica meglio -115?



9. **A**


10) Quale lettera indica meglio -97?



10. **A**

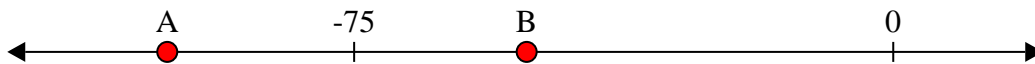
**Risolvi ogni problema.****Risposte**

1) Quale lettera indica meglio -24?




1. _____

2) Quale lettera indica meglio -101?



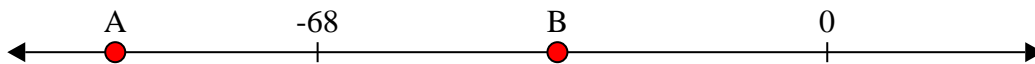
2. _____

3) Quale lettera indica meglio -83?



3. _____

4) Quale lettera indica meglio -95?




4. _____

5) Quale lettera indica meglio -86?



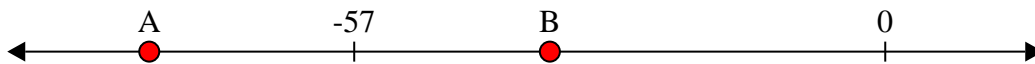
5. _____

6) Quale lettera indica meglio -112?




6. _____

7) Quale lettera indica meglio -79?




7. _____

8) Quale lettera indica meglio -10?



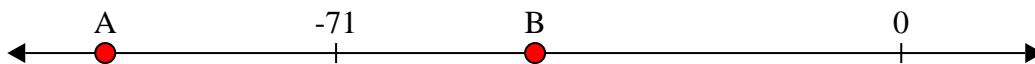
8. _____

9) Quale lettera indica meglio -27?



9. _____

10) Quale lettera indica meglio -100?




10. _____



Risolvi ogni problema.

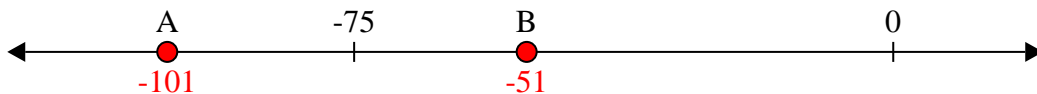
Risposte

1) Quale lettera indica meglio -24?



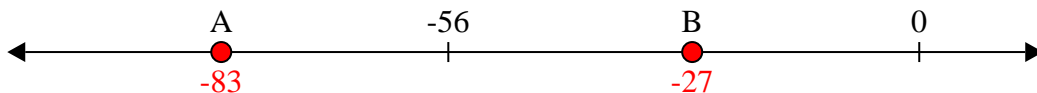
1. **B**

2) Quale lettera indica meglio -101?



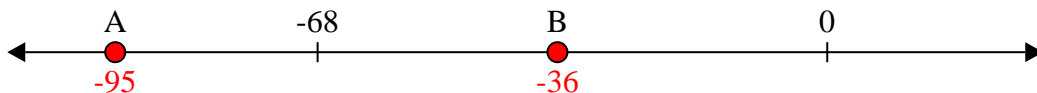
2. **A**

3) Quale lettera indica meglio -83?




3. **A**

4) Quale lettera indica meglio -95?




4. **A**

5) Quale lettera indica meglio -86?



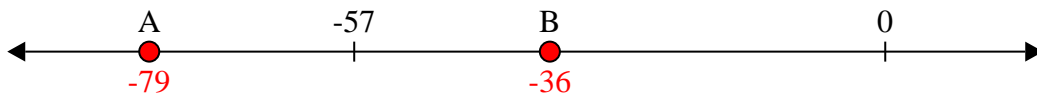
5. **A**

6) Quale lettera indica meglio -112?




6. **A**

7) Quale lettera indica meglio -79?




7. **A**

8) Quale lettera indica meglio -10?



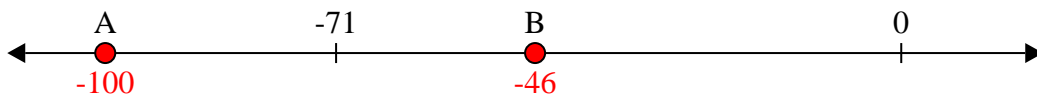
8. **B**

9) Quale lettera indica meglio -27?



9. **B**

10) Quale lettera indica meglio -100?




10. **A**



Risolvi ogni problema.

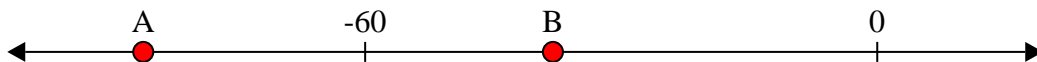
Risposte

1) Quale lettera indica meglio -11?



1. _____


2) Quale lettera indica meglio -38?



2. _____

3. _____


3) Quale lettera indica meglio -78?



4. _____

5. _____

4) Quale lettera indica meglio -28?



6. _____

7. _____

5) Quale lettera indica meglio -109?



8. _____

9. _____

6) Quale lettera indica meglio -68?




10. _____

7) Quale lettera indica meglio -10?




8) Quale lettera indica meglio -20?



9) Quale lettera indica meglio -82?



10) Quale lettera indica meglio -79?






Risolvi ogni problema.

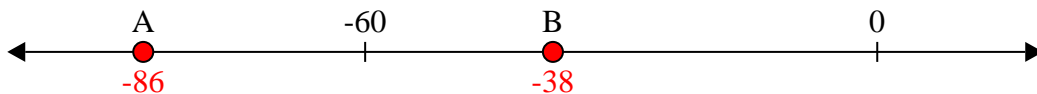
Risposte

1) Quale lettera indica meglio -11?



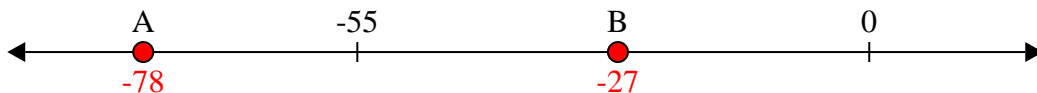
1. **B**

2) Quale lettera indica meglio -38?



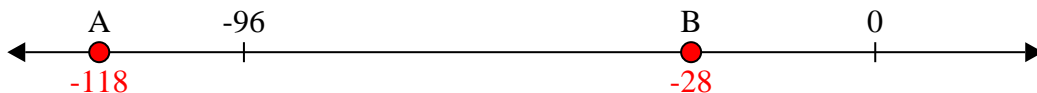
2. **B**

3) Quale lettera indica meglio -78?




3. **A**

4) Quale lettera indica meglio -28?



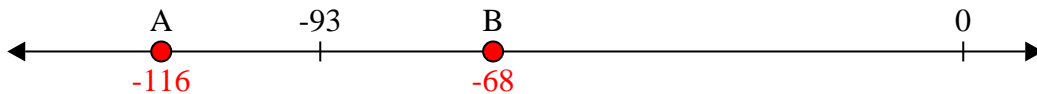
4. **B**

5) Quale lettera indica meglio -109?




5. **A**

6) Quale lettera indica meglio -68?




6. **B**

7) Quale lettera indica meglio -10?



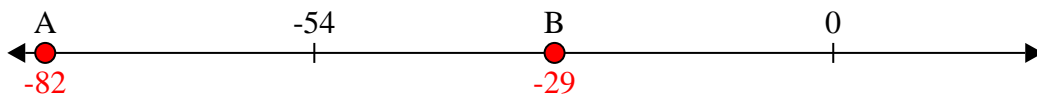
7. **B**

8) Quale lettera indica meglio -20?



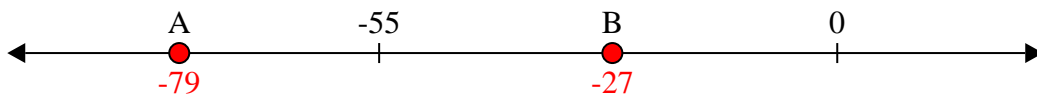
8. **B**

9) Quale lettera indica meglio -82?



9. **A**

10) Quale lettera indica meglio -79?




10. **A**



Risolvi ogni problema.


Risposte

1) Quale lettera indica meglio -98?




1. _____

2) Quale lettera indica meglio -39?




2. _____

3) Quale lettera indica meglio -20?



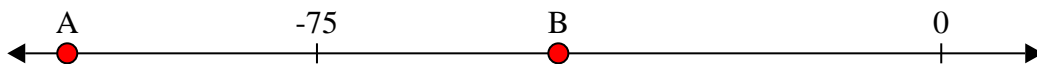
3. _____

4) Quale lettera indica meglio -11?



4. _____

5) Quale lettera indica meglio -105?




5. _____

6) Quale lettera indica meglio -106?




6. _____

7) Quale lettera indica meglio -12?




7. _____

8) Quale lettera indica meglio -111?




8. _____

9) Quale lettera indica meglio -12?



9. _____

10) Quale lettera indica meglio -28?




10. _____



Risolvi ogni problema.

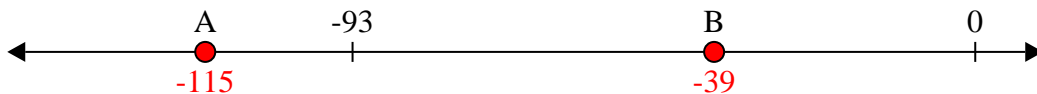
Risposte

1) Quale lettera indica meglio -98?



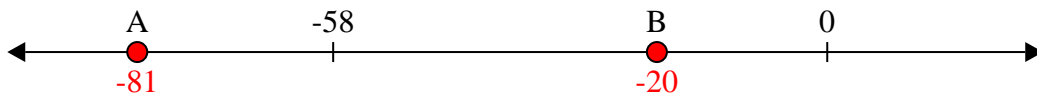
1. **A**

2) Quale lettera indica meglio -39?



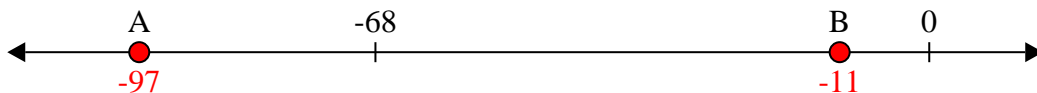
2. **B**

3) Quale lettera indica meglio -20?



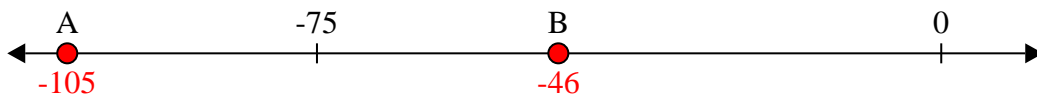
3. **B**

4) Quale lettera indica meglio -11?



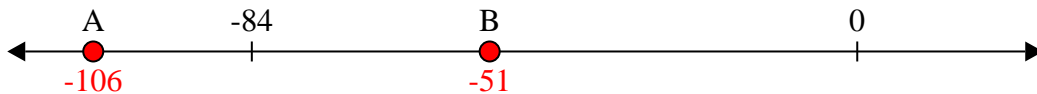
4. **B**

5) Quale lettera indica meglio -105?




5. **A**

6) Quale lettera indica meglio -106?




6. **A**

7) Quale lettera indica meglio -12?




7. **B**

8) Quale lettera indica meglio -111?



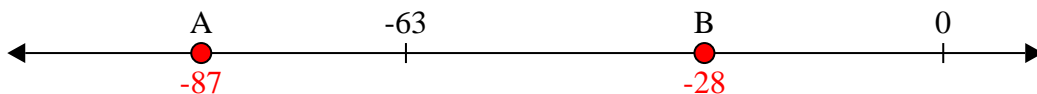
8. **A**

9) Quale lettera indica meglio -12?



9. **B**

10) Quale lettera indica meglio -28?




10. **B**



Risolvi ogni problema.


Risposte

1) Quale lettera indica meglio -128?




1. _____

2) Quale lettera indica meglio -114?



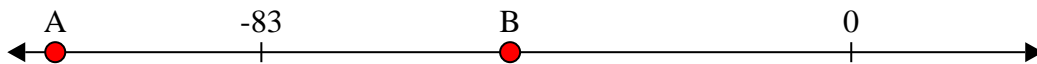
2. _____

3) Quale lettera indica meglio -76?



3. _____

4) Quale lettera indica meglio -48?



4. _____

5) Quale lettera indica meglio -47?



5. _____

6) Quale lettera indica meglio -115?



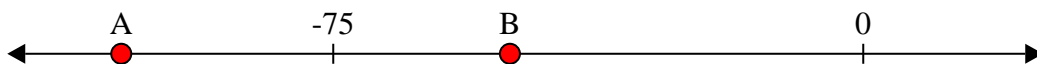
6. _____

7) Quale lettera indica meglio -115?




7. _____

8) Quale lettera indica meglio -105?




8. _____

9) Quale lettera indica meglio -10?



9. _____

10) Quale lettera indica meglio -82?




10. _____



Risolvi ogni problema.

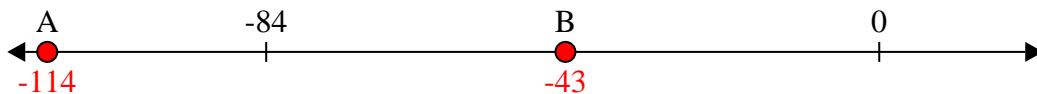
Risposte

1) Quale lettera indica meglio -128?



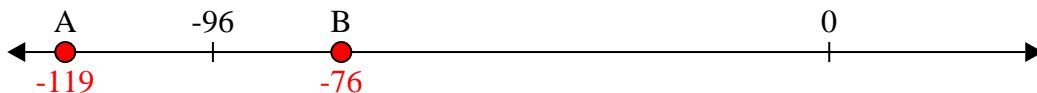
1. **A**

2) Quale lettera indica meglio -114?



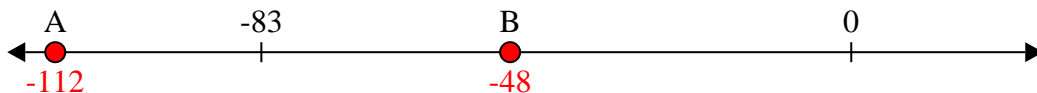
2. **A**

3) Quale lettera indica meglio -76?




3. **B**

4) Quale lettera indica meglio -48?




4. **B**

5) Quale lettera indica meglio -47?




5. **B**

6) Quale lettera indica meglio -115?



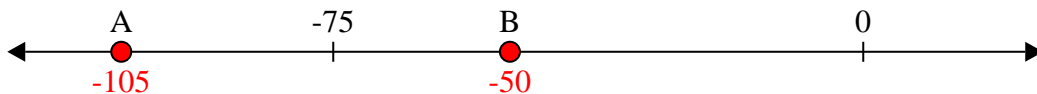
6. **A**

7) Quale lettera indica meglio -115?




7. **A**

8) Quale lettera indica meglio -105?



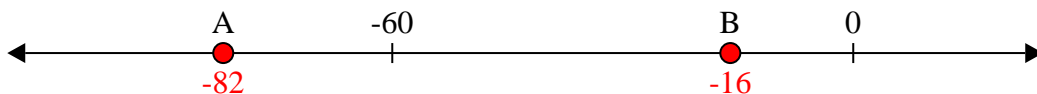
8. **A**

9) Quale lettera indica meglio -10?



9. **B**

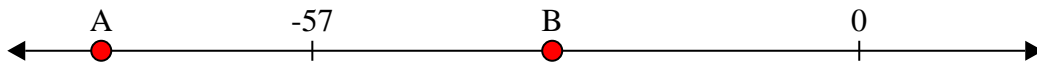
10) Quale lettera indica meglio -82?



10. **A**


**Risolvi ogni problema.****Risposte**

1) Quale lettera indica meglio -32?




1. _____

2) Quale lettera indica meglio -114?




2. _____

3) Quale lettera indica meglio -117?



3. _____

4) Quale lettera indica meglio -111?




4. _____

5) Quale lettera indica meglio -33?



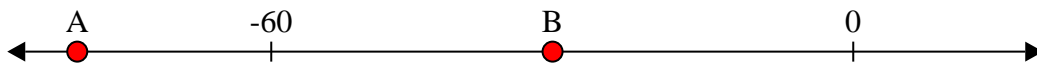
5. _____

6) Quale lettera indica meglio -29?




6. _____

7) Quale lettera indica meglio -80?



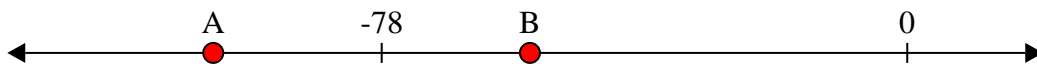
7. _____

8) Quale lettera indica meglio -86?




8. _____

9) Quale lettera indica meglio -56?



9. _____

10) Quale lettera indica meglio -24?



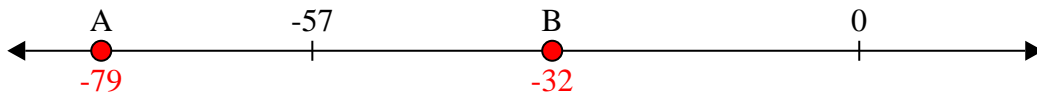
10. _____



Risolvi ogni problema.

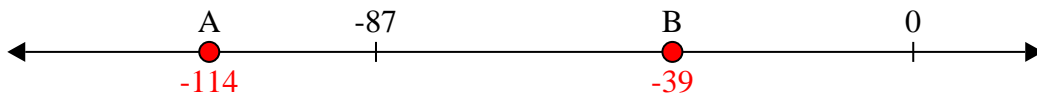
Risposte

1) Quale lettera indica meglio -32?



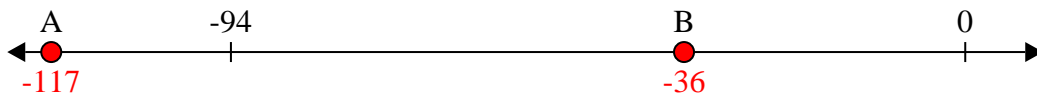
1. **B**

2) Quale lettera indica meglio -114?



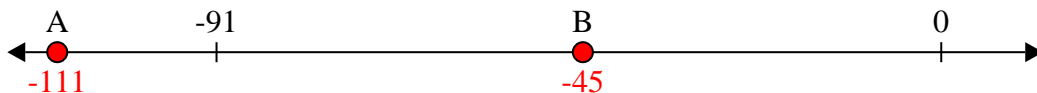
2. **A**

3) Quale lettera indica meglio -117?




3. **A**

4) Quale lettera indica meglio -111?




4. **A**

5) Quale lettera indica meglio -33?



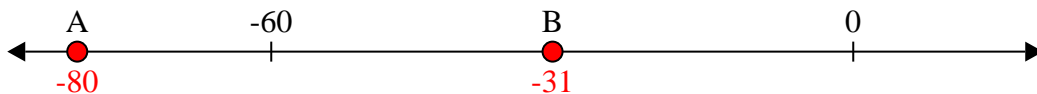
5. **B**

6) Quale lettera indica meglio -29?




6. **B**

7) Quale lettera indica meglio -80?



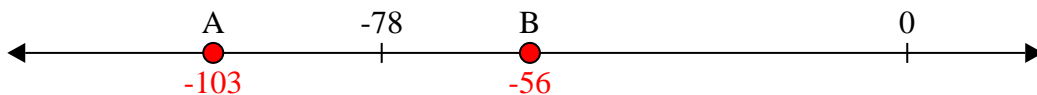
7. **A**

8) Quale lettera indica meglio -86?



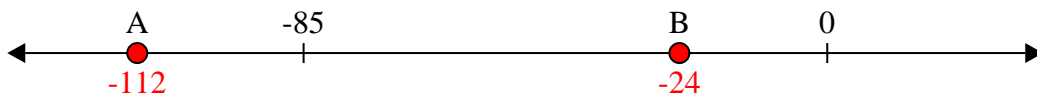
8. **A**

9) Quale lettera indica meglio -56?



9. **B**

10) Quale lettera indica meglio -24?




10. **B**



Risolvi ogni problema.


Risposte

1) Quale lettera indica meglio -29?




1. _____

2) Quale lettera indica meglio -120?




2. _____

3) Quale lettera indica meglio -118?




3. _____

4) Quale lettera indica meglio -14?




4. _____

5) Quale lettera indica meglio -109?




5. _____

6) Quale lettera indica meglio -28?




6. _____

7) Quale lettera indica meglio -21?




7. _____

8) Quale lettera indica meglio -14?




8. _____

9) Quale lettera indica meglio -13?



9. _____

10) Quale lettera indica meglio -114?



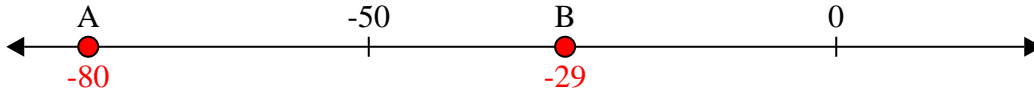
10. _____



Risolvi ogni problema.

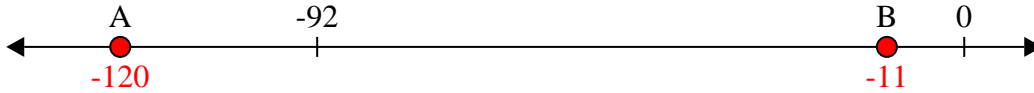
Risposte

1) Quale lettera indica meglio -29?



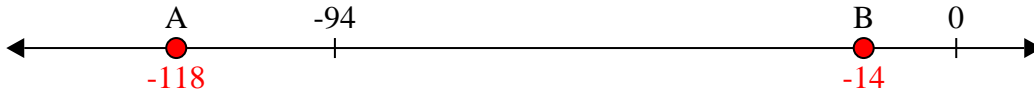
1. **B**

2) Quale lettera indica meglio -120?



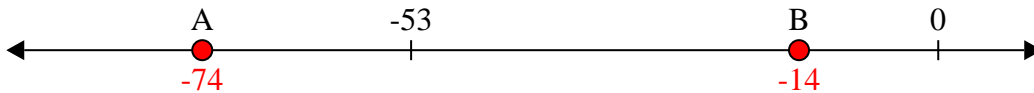
2. **A**

3) Quale lettera indica meglio -118?



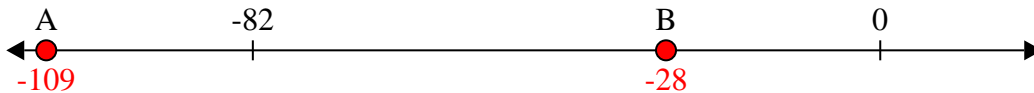
3. **A**

4) Quale lettera indica meglio -14?




4. **B**

5) Quale lettera indica meglio -109?




5. **A**

6) Quale lettera indica meglio -28?




6. **B**

7) Quale lettera indica meglio -21?




7. **B**

8) Quale lettera indica meglio -14?



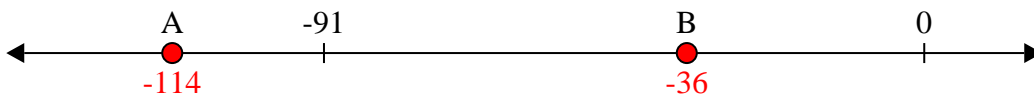
8. **B**

9) Quale lettera indica meglio -13?



9. **B**

10) Quale lettera indica meglio -114?




10. **A**



Risolvi ogni problema.


Risposte

1) Quale lettera indica meglio -101?




1. _____

2) Quale lettera indica meglio -42?




2. _____

3) Quale lettera indica meglio -76?




3. _____

4) Quale lettera indica meglio -110?




4. _____

5) Quale lettera indica meglio -106?




5. _____

6) Quale lettera indica meglio -114?




6. _____

7) Quale lettera indica meglio -21?




7. _____

8) Quale lettera indica meglio -20?




8. _____

9) Quale lettera indica meglio -79?



9. _____

10) Quale lettera indica meglio -97?




10. _____



Risolvi ogni problema.

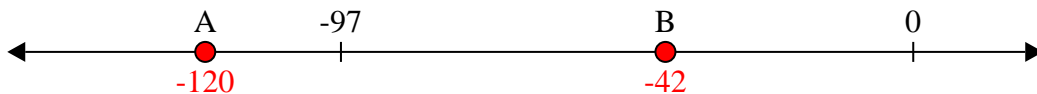
Risposte

1) Quale lettera indica meglio -101?



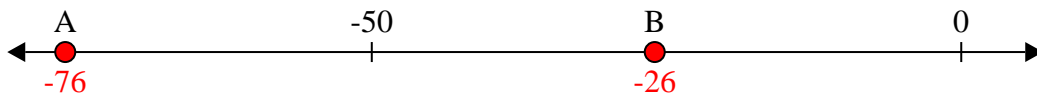
1. **A**

2) Quale lettera indica meglio -42?



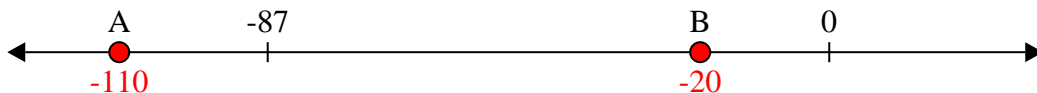
2. **B**

3) Quale lettera indica meglio -76?




3. **A**

4) Quale lettera indica meglio -110?




4. **A**

5) Quale lettera indica meglio -106?




5. **A**

6) Quale lettera indica meglio -114?




6. **A**

7) Quale lettera indica meglio -21?




7. **B**

8) Quale lettera indica meglio -20?




8. **B**

9) Quale lettera indica meglio -79?



9. **A**

10) Quale lettera indica meglio -97?



10. **A**