




Risolvi ogni problema.


Risposte

1) Quale lettera indica meglio -128?




1. _____

2) Quale lettera indica meglio -114?



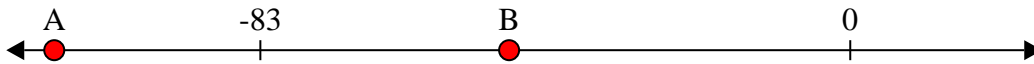
2. _____

3) Quale lettera indica meglio -76?




3. _____

4) Quale lettera indica meglio -48?




4. _____

5) Quale lettera indica meglio -47?




5. _____

6) Quale lettera indica meglio -115?



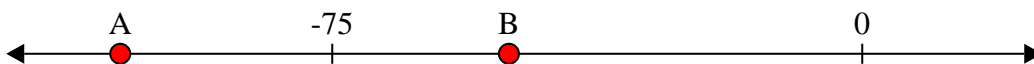
6. _____

7) Quale lettera indica meglio -115?




7. _____

8) Quale lettera indica meglio -105?




8. _____

9) Quale lettera indica meglio -10?



9. _____

10) Quale lettera indica meglio -82?




10. _____



Risolvi ogni problema.

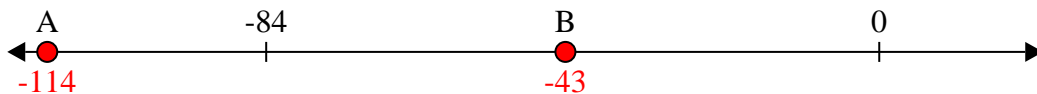
Risposte

1) Quale lettera indica meglio -128?



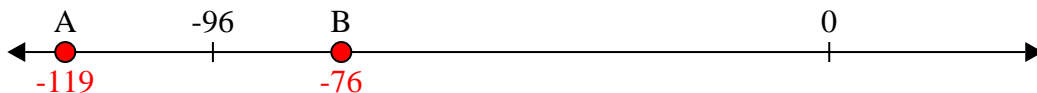
1. **A**

2) Quale lettera indica meglio -114?



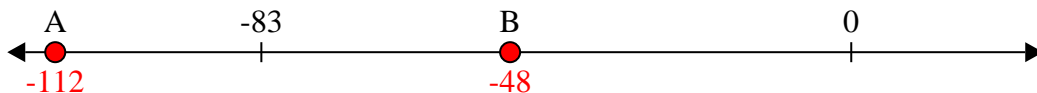
2. **A**

3) Quale lettera indica meglio -76?




3. **B**

4) Quale lettera indica meglio -48?




4. **B**

5) Quale lettera indica meglio -47?




5. **B**

6) Quale lettera indica meglio -115?



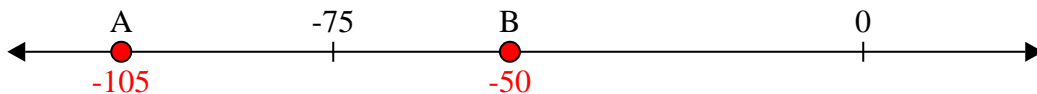
6. **A**

7) Quale lettera indica meglio -115?




7. **A**

8) Quale lettera indica meglio -105?



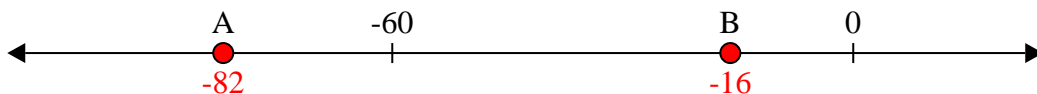
8. **A**

9) Quale lettera indica meglio -10?



9. **B**

10) Quale lettera indica meglio -82?



10. **A**