




Risolvi ogni problema.


**Risposte**

1) Quale lettera indica meglio -98?




1. \_\_\_\_\_

2) Quale lettera indica meglio -39?




2. \_\_\_\_\_

3) Quale lettera indica meglio -20?



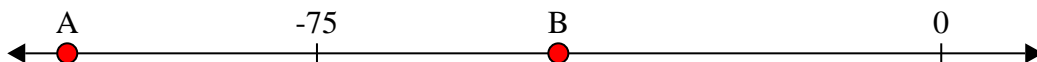
3. \_\_\_\_\_

4) Quale lettera indica meglio -11?



4. \_\_\_\_\_

5) Quale lettera indica meglio -105?



5. \_\_\_\_\_

6) Quale lettera indica meglio -106?



6. \_\_\_\_\_

7) Quale lettera indica meglio -12?




7. \_\_\_\_\_

8) Quale lettera indica meglio -111?




8. \_\_\_\_\_

9) Quale lettera indica meglio -12?



9. \_\_\_\_\_

10) Quale lettera indica meglio -28?




10. \_\_\_\_\_



Risolvi ogni problema.

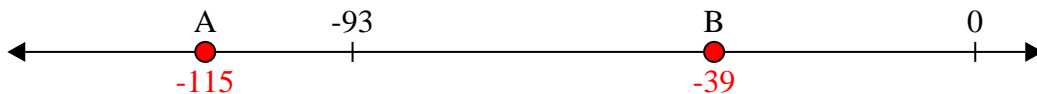
**Risposte**

1) Quale lettera indica meglio -98?



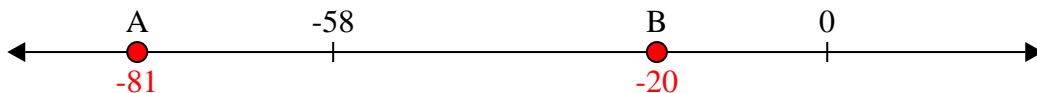
1.   **A**  

2) Quale lettera indica meglio -39?



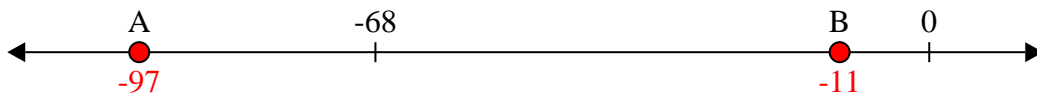
2.   **B**  

3) Quale lettera indica meglio -20?



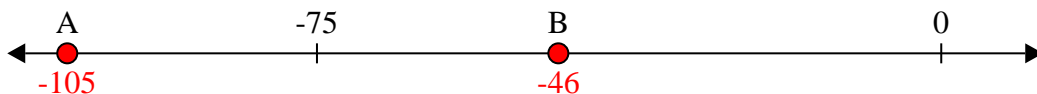
3.   **B**  

4) Quale lettera indica meglio -11?



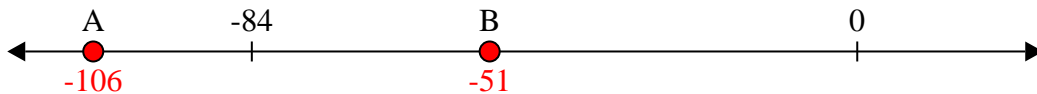
4.   **B**  

5) Quale lettera indica meglio -105?




5.   **A**  

6) Quale lettera indica meglio -106?




6.   **A**  

7) Quale lettera indica meglio -12?




7.   **B**  

8) Quale lettera indica meglio -111?



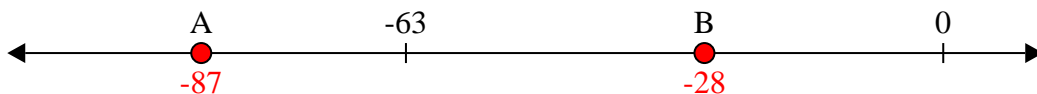
8.   **A**  

9) Quale lettera indica meglio -12?



9.   **B**  

10) Quale lettera indica meglio -28?



10.   **B**